



कोल इण्डिया लिमिटेड  
**Coal India Limited**  
एक महारत्न कंपनी A Maharatna Company

## ONLINE APPLICATION FOR MANAGEMENT TRAINEES 2016-17

Roll No:	170177190002
Participant Name:	MAHTO DASHRATH
Test Center Name:	Ram Tahal Choudhary Institute of Technology RTCIT
Test Date:	26/03/2017
Test Time:	12:30 PM - 3:30 PM

### Section : General Knowledge/Awareness

**Q.1** Who among the following won the Dronacharya Award in Gymnastics for the year 2016?

- Ans**
- 1. Bishweshwar Nandi
  - 2. Lalita Babar
  - 3. Deepa Karmakar
  - 4. Rajendra Pralhad Shelke

Question ID : 2391303332  
Status : Answered  
Chosen Option : 3

**Q.2** What type of Energy does "a batsman hitting a ball" use?

- Ans**
- 1. Gravitational Energy
  - 2. Frictional Energy
  - 3. Kinetic Energy
  - 4. Potential Energy

Question ID : 2391303328  
Status : Answered  
Chosen Option : 4

**Q.3** Which of the following is NOT an example of Biomass Material?

- Ans**
- 1. Wood
  - 2. Animal Waste
  - 3. Garbage
  - 4. Coal

Question ID : 2391303330  
Status : Answered  
Chosen Option : 1

**Q.4** Who has been awarded the 2016 IAAF World Athlete of the Year Award in male category for sixth time?

- Ans**
- 1. Michael Phelps
  - 2. Patrik Sjöberg
  - 3. Usain Bolt
  - 4. Andre De Grasse

Question ID : 2391303333  
Status : Answered  
Chosen Option : 3

**Q.5** Mr. Reddy is running for the Vice-President's post. Which of the following qualities of Mr. Reddy make him an ineligible candidate to contest election for the post of Vice-President of India?

- Ans**
- 1. Mr. Reddy is qualified for election as a member of the Council of States.
  - 2. Mr. Reddy has completed the age of thirty-five years.
  - 3. Mr. Reddy is the District Commissioner of Guntur, which is an office of profit under the Government of Andhra Pradesh.
  - 4. Mr. Reddy is a citizen of India.

Question ID : 2391303318  
Status : Answered  
Chosen Option : 3

**Q.6** Who became the first woman to win the Jnanpith Award in 1976 for her 1965-novel Pratham Pratishruti (The First Promise)?

# Test Prime

**ALL EXAMS,  
ONE SUBSCRIPTION**



**70,000+**  
Mock Tests



**Personalised  
Report Card**



**Unlimited  
Re-Attempt**



**600+**  
Exam Covered



**Previous Year  
Papers**



**500%**  
Refund



**ATTEMPT FREE MOCK NOW**

- Ans  1. Amrita Pritam  
 2. Mahasweta Devi  
 3. Lily Ray  
 4. Ashapoorna Devi

Question ID : 2391303335  
 Status : Answered  
 Chosen Option : 2

Q.7 Who is the Chief Executive Officer (CEO) of the Wipro Group?

- Ans  1. Rishad Premji  
 2. Azim H. Premji  
 3. Vishal Sikka  
 4. Abidali Z. Neemuchwala

Question ID : 2391303327  
 Status : Answered  
 Chosen Option : 2

Q.8 A physical balance is an example of:

- Ans  1. Composite machine  
 2. Inclined plane  
 3. Lever  
 4. Wedge

Question ID : 2391303329  
 Status : Answered  
 Chosen Option : 3

Q.9 \_\_\_\_\_ has the largest coal reserves in India.

- Ans  1. Odisha  
 2. West Bengal  
 3. Jharkhand  
 4. Chhattisgarh

Question ID : 2391303323  
 Status : Answered  
 Chosen Option : 3

Q.10 Which of the following does the 7<sup>th</sup> Schedule of the Constitution of India comprise?  
 i. State List  
 ii. Union List  
 iii. Concurrent List

- Ans  1. All (i), (ii) and (iii)  
 2. Both (i) and (ii)  
 3. Only (i)  
 4. Both (ii) and (iii)

Question ID : 2391303317  
 Status : Answered  
 Chosen Option : 2

Q.11 Who is the current Speaker of Lok Sabha?

- Ans  1. Meira Kumar  
 2. S. M. Krishna  
 3. Sumitra Mahajan  
 4. Mohammad Hamid Ansari

Question ID : 2391303341  
 Status : Answered  
 Chosen Option : 3

Q.12 Whom did Chandragupta Maurya overthrow to take over the reins of the Magadha Empire?

- Ans  1. Ajatshatru  
 2. Dhana Nanda  
 3. Bimbisara  
 4. Mahapadma Nanda

Question ID : 2391303320  
 Status : Answered  
 Chosen Option : 3

Q.13 Which country is the world leader in the population of bovine animals?

- Ans  1. India  
 2. USA

Question ID : 2391303325  
 Status : Answered  
 Chosen Option : 3

- 3. Denmark
- 4. Spain

Q.14 Asia's first and longest cycle highway runs between:

- Ans
- 1. Mumbai and Pune in Maharashtra
  - 2. Etawah and Agra in Uttar Pradesh
  - 3. Hyderabad and Secunderabad in Telangana
  - 4. Bengaluru and Mysuru in Karnataka

Question ID : 2391303337  
Status : Answered  
Chosen Option : 4

Q.15 Which of the following countries first invented the idea of "Gross National Happiness" to use happiness as a measure of good governance?

- Ans
- 1. Great Britain
  - 2. Taiwan
  - 3. Norway
  - 4. Bhutan

Question ID : 2391303324  
Status : Answered  
Chosen Option : 2

Q.16 Who wrote the medieval-era epic poem "Padmavat"?

- Ans
- 1. Mulla Daud
  - 2. Abu'l-Fazl ibn Mubarak
  - 3. Malik Muhammad "Jayasi"
  - 4. Amir Khusro

Question ID : 2391303322  
Status : Answered  
Chosen Option : 3

Q.17 What does IDBI in IDBI Bank stand for?

- Ans
- 1. Investment Development Board of India
  - 2. Industrial Development Bank of India
  - 3. Infrastructure and Development Board of India
  - 4. Industrial Divestment Board of India

Question ID : 2391303326  
Status : Answered  
Chosen Option : 4

Q.18 Which film won the 70th British Academy of Film and Television Arts (BAFTA) Award in the Best Special Visual Effects category?

- Ans
- 1. Manchester by the Sea
  - 2. Lion
  - 3. The Jungle Book
  - 4. La La Land

Question ID : 2391303336  
Status : Answered  
Chosen Option : 3

Q.19 Which statement about the Gobi Desert is NOT correct?

- Ans
- 1. Gobi is a cold desert.
  - 2. Gobi desert is the most expansive arid region in Asia.
  - 3. Most of Gobi's rain is blocked by the Himalayas.
  - 4. It never rains in the Gobi desert.

Question ID : 2391303334  
Status : Answered  
Chosen Option : 3

Q.20 What does RAM in a computer stands for?

- Ans
- 1. Random Access Memory
  - 2. Rapid Action Machine
  - 3. Random Application Mapping

Question ID : 2391303331  
Status : Answered  
Chosen Option : 1

**4. Rapid Applied Memory**

**Q.21** Whom among the following stepped down as the Chairman of International Cricket Council (ICC) on 15th March 2017?

- Ans**
- 1. Zaheer Abbas
  - 2. David Richardson
  - 3. Shashank Manohar
  - 4. N. Srinivasan

Question ID : 2391303338  
Status : Answered  
Chosen Option : 3

**Q.22** Which of the following Governor Generals of India earned the title, "Maker of the Modern India"?

- Ans**
- 1. Lord Dalhousie
  - 2. Lord Bentick
  - 3. Lord Canning
  - 4. Lord Mountbatten

Question ID : 2391303321  
Status : Answered  
Chosen Option : 4

**Q.23** Who is the Chief Justice of India as of February 2017?

- Ans**
- 1. Justice T. S. Thakur
  - 2. Justice C. S. Karnan
  - 3. Justice H. L. Dattu
  - 4. Justice Jagdish Singh Khehar

Question ID : 2391303340  
Status : Answered  
Chosen Option : 1

**Q.24** Who won the Men's Final Australian Open Tennis Championship 2017?

- Ans**
- 1. Stanislas Wawrinka
  - 2. Novak Djokovic
  - 3. Roger Federer
  - 4. Rafael Nadal

Question ID : 2391303339  
Status : Answered  
Chosen Option : 2

**Q.25** All executive action of the Government of India is taken in the name of the \_\_\_\_\_.

- Ans**
- 1. Speaker of Lok Sabha
  - 2. President of India
  - 3. Prime Minister of India
  - 4. Vice President of India

Question ID : 2391303319  
Status : Answered  
Chosen Option : 2

**Section : Numerical Ability**

**Q.1** Mr. Shiva invested equal amount of money in two private firms which gives 15% simple interest per annum for 3.5 years and 5 years respectively. If the difference in their interests is Rs. 270. The amount invested by Mr. Shiva is:

- Ans**
- 1. Rs. 1500
  - 2. Rs. 1200
  - 3. Rs. 1250
  - 4. Rs. 1205

Question ID : 2391303350  
Status : Not Attempted  
Chosen Option : --

**Q.2** Pipe A can fill the tank 2 times faster than pipe B. If pipe A and B together fill the tank in 24 minutes, then pipe B alone can fill the tank in:

- Ans**
- 1. 75 minutes
  - 2. 70 minutes
  - 3. 72 minutes
  - 4. 71 minutes

Question ID : 2391303356  
Status : Answered  
Chosen Option : 3

**Q.3** Find  $x$ , given  $5(\sqrt{5})^{x+5} = (\sqrt{5})^{2x+7}$ ;

- Ans**
- 1.  $x = -1$

Question ID : 2391303358  
Status : Answered  
Chosen Option : 2

- 2.  $x = 0$
- 3.  $x = 1$
- 4.  $x = -2$

**Q.4** A flight has to travel between 2 cities A and B, 3000 km apart. The flight was slowed down due to bad weather. Its average speed for the trip reduced by 200 km/hr and the time of flight increased by 30 min. The duration of the flight with original speed is:

- Ans**
- 1. 2.6 hrs
  - 2. 2.75 hrs
  - 3. 2.25 hrs
  - 4. 2.5 hrs

Question ID : 2391303354  
Status : Not Attempted  
Chosen Option : --

**Q.5** A train 130 meters long travelling at 36 km/hr crosses the bridge in 30 sec. Then the length of the bridge is:

- Ans**
- 1. 196 meters
  - 2. 170 meters
  - 3. 125 meters
  - 4. 175 meters

Question ID : 2391303361  
Status : Not Attempted  
Chosen Option : --

**Q.6** If two is added to the denominator of a rational number it becomes  $\frac{1}{3}$  and if 4 is added to the numerator it becomes  $\frac{1}{2}$ . Then the sum of the numerator and the denominator of the rational number is:

- Ans**
- 1. -38
  - 2. 38
  - 3. -18
  - 4. 18

Question ID : 2391303347  
Status : Not Attempted  
Chosen Option : --

**Q.7** Ms. Shivangi invests Rs. 4000 for six months at 20% per annum compounded quarterly. The total amount she gets after 6 months is:

- Ans**
- 1. Rs. 4401
  - 2. Rs. 4410
  - 3. Rs. 4411
  - 4. Rs. 4440

Question ID : 2391303352  
Status : Not Attempted  
Chosen Option : --

**Q.8** For a positive integer  $n$ ,  $3^{6n} - 6^{3n}$  is divisible by:

- Ans**
- 1. 3
  - 2. 513
  - 3. 500
  - 4. 6

Question ID : 2391303344  
Status : Answered  
Chosen Option : 3

**Q.9** Due to economic surges the price of eggs suddenly reduced to 40%. This enabled a woman to buy 64 more eggs for \$ 50. Then the reduced price per dozen is:

- Ans**
- 1. \$ 3.5
  - 2. \$ 3.75
  - 3. \$ 3.25
  - 4. \$ 4

Question ID : 2391303353  
Status : Answered  
Chosen Option : 3

**Q.10** If  $x_1$  and  $x_2$  are the roots of the equation  $x^2 + 2x - 15 = 0$  then the quadratic equation which has the roots  $\frac{1}{x_1}$  and  $\frac{1}{x_2}$  is:

- Ans**
- 1.  $-15x^2 - 2x - 1 = 0$
  - 2.  $15x^2 - 2x - 1 = 0$
  - 3.  $15x^2 - 2x + 1 = 0$
  - 4.  $15x^2 + 2x - 1 = 0$

Question ID : 2391303359  
Status : Answered  
Chosen Option : 2

**Q.11** The curved surface area of a hemisphere is  $8\pi \text{ cm}^2$ , then its radius is:

- Ans**
- 1. 1 cm

Question ID : 2391303363  
Status : Answered  
Chosen Option : 3

- 2. 3 cm
- 3. 2.5 cm
- 4. 2 cm

Q.12 If three sides of the triangle are given as 32 cm, 34 cm and 34 cm, then the area of the triangle is:

- Ans
- 1.  $500 \text{ cm}^2$
  - 2.  $480 \text{ cm}^2$
  - 3.  $450 \text{ cm}^2$
  - 4.  $475 \text{ cm}^2$

Question ID : 2391303360  
Status : Answered  
Chosen Option : 2

Q.13 If the sum of 2 numbers is 175, their LCM is 300 and HCF is 25. Then the difference between 2 numbers is:

- Ans
- 1. 10
  - 2. 25
  - 3. 20
  - 4. 15

Question ID : 2391303343  
Status : Answered  
Chosen Option : 2

Q.14 The total number of odd factors of  $2^5 \times 3^3 \times 5^2$  is:

- Ans
- 1. 12
  - 2. 10
  - 3. 6
  - 4. 15

Question ID : 2391303342  
Status : Answered  
Chosen Option : 3

Q.15 Mr. Vijay rows a boat with the stream in 8 km/hr and against the stream in 4 km/hr. In still water, his rate of rowing in km/hr is:

- Ans
- 1. 1
  - 2. 3
  - 3. 4
  - 4. 2

Question ID : 2391303362  
Status : Answered  
Chosen Option : 3

Q.16 If  $y$  exceeds  $x$  by 10% then  $x$  is less than  $y$  by what percent?

- Ans
- 1.  $9\frac{1}{12}$
  - 2.  $9\frac{1}{13}$
  - 3.  $9\frac{1}{14}$
  - 4.  $9\frac{1}{11}$

Question ID : 2391303364  
Status : Answered  
Chosen Option : 4

Q.17 In a chemistry lab two beakers A and B contain 62% and 84% of spirit respectively. If two liters from A is mixed with 4 liters of B, the ratio of spirit and water in the resulting mixture is:

- Ans
- 1. 58 : 19
  - 2. 17 : 19
  - 3. 23 : 7
  - 4. 17 : 21

Question ID : 2391303357  
Status : Answered  
Chosen Option : 3

Q.18 If  $-5 \leq x \leq 1$  and  $-1 \leq y \leq 5$ , then the minimum value of  $2y - 3x$  is:

- Ans
- 1. -5
  - 2. -9
  - 3. -8
  - 4. -10

Question ID : 2391303345  
Status : Answered  
Chosen Option : 2

Q.19 The number of terms in the sequence 20, 25, 30, ....., 150 is:

Question ID : 2391303365

- Ans  1. 23  
 2. 22  
 3. 27  
 4. 26

Status : **Answered**  
 Chosen Option : 3

**Q.20** An army post with 1800 men has provision of food for 50 days. After 10 days, some of the men go back to the base camp due to injuries. The remaining food is now enough for the next 50 days for the remaining men. What is the number of men who went back to the base camp?

- Ans  1. 350 Men  
 2. 360 Men  
 3. 250 Men  
 4. 310 Men

Question ID : 2391303349  
 Status : **Answered**  
 Chosen Option : 2

**Q.21** The number of terms in the sequence 5, 20, 80, 320, ....., 81920 is:

- Ans  1. 6  
 2. 7  
 3. 9  
 4. 8

Question ID : 2391303366  
 Status : **Answered**  
 Chosen Option : 3

**Q.22** Mr. Deep divides Rs. 1833 such that 4 times the 1<sup>st</sup> share, thrice the 2<sup>nd</sup> share and twice the third share amount to the same. Then the value of the 2<sup>nd</sup> share is:

- Ans  1. Rs. 546  
 2. Rs. 564  
 3. Rs. 560  
 4. Rs. 654

Question ID : 2391303348  
 Status : **Answered**  
 Chosen Option : 3

**Q.23** A can finish the work in 25 days and B in 25 days. They both work together for 5 days and then B leaves. How many days will A take to complete the remaining work?

- Ans  1. 18 days  
 2. 20 days  
 3. 17 days  
 4. 15 days

Question ID : 2391303355  
 Status : **Answered**  
 Chosen Option : 2

**Q.24** In a bio gas plant the population of yeast bacteria increases at a rate of 9% per annum, but there is an additional annual increase of 1% in population due to various other inputs in the system. The percentage increase in the yeast population after 2 yrs is:

- Ans  1. 20%  
 2. 21%  
 3. 25%  
 4. 22%

Question ID : 2391303351  
 Status : **Answered**  
 Chosen Option : 3

**Q.25** The average of 7 numbers is 29. The average of first three of them is 23 and the last three of them is 42. Then the fourth number is:

- Ans  1. 8  
 2. 9  
 3. 10  
 4. 12

Question ID : 2391303346  
 Status : **Answered**  
 Chosen Option : 4

Section : Reasoning

**Q.1** Select the one which is different from other three.

- Ans  1. GHST  
 2. EVFU  
 3. KPLO  
 4. IRJQ

Question ID : 2391303371  
 Status : **Answered**  
 Chosen Option : 1



**Q.2** What is related to 'Courage' in the same way as 'Kindness' is related to 'Cruelty'?

- Ans**  1. Cowardice  
 2. Bravery  
 3. Fear  
 4. Valour

Question ID : 2391303367  
 Status : Answered  
 Chosen Option : 1

**Q.3** In a certain code language CARPET is written as FDUSHW. How will MOTHER be coded in that code language?

- Ans**  1. PRWHUK  
 2. PRWKHU  
 3. OPUIFS  
 4. REHTOM

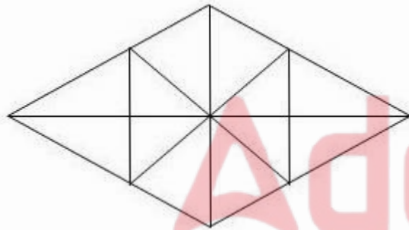
Question ID : 2391303380  
 Status : Answered  
 Chosen Option : 2

**Q.4** Four sets of three statements each are given below. Take these statements to be true even if they look factually absurd. Select one alternative in which third statement is implied by the first two statements.

- Ans**  1.  
 All tables are chairs. All cupboards are tables. So, all chairs are cupboards.  
 2.  
 All J's are K's. All K's are M's. So, all M's are J's.  
 3.  
 All apples are red. All bananas are apples. So, all bananas are red.  
 4.  
 All locks are keys. Some ball are keys. So, all locks are balls.

Question ID : 2391303386  
 Status : Answered  
 Chosen Option : 3

**Q.5** How many triangles are there in the following figure?



- Ans**  1. 20  
 2. 28  
 3. 24  
 4. 12

Question ID : 2391303391  
 Status : Answered  
 Chosen Option : 1

**Q.6** Choose the correct alternative that will complete the given number series.

9, 17, 31, 57, ?, 205

- Ans**  1. 107  
 2. 102  
 3. 104  
 4. 109

Question ID : 2391303374  
 Status : Answered  
 Chosen Option : 3

**Q.7** Find the odd number pair from the given alternative.

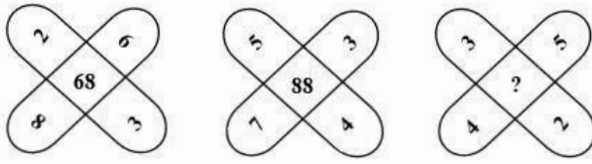
- Ans**  1. 46 – 10  
 2. 42 – 33  
 3. 25 – 43  
 4. 12 – 91

Question ID : 2391303372  
 Status : Answered  
 Chosen Option : 4

**Q.8**

Question ID : 2391303383  
 Status : Answered  
 Chosen Option : 2

Find the missing number from the given alternatives.



- Ans
- 1. 42
  - 2. 43
  - 3. 41
  - 4. 45

Q.9 Which of the answer figure is exactly the mirror image of the question figure, when the mirror is held on the line X Y?



Question ID : 2391303390  
Status : Answered  
Chosen Option : 4

Ans

- 1.
- 2.
- 3.
- 4.

Q.10 'R' is the paternal uncle of 'P', who is the daughter of 'N' and 'N' is the daughter-in-law of 'M'. How is 'R' related to 'M'?

- Ans
- 1. Brother
  - 2. Cousin
  - 3. Son-in-law
  - 4. Son

Question ID : 2391303376  
Status : Answered  
Chosen Option : 4

Q.11 Mother's age is twice her daughter's age. The son is older than daughter by one year and father is five years older than mother. If son has completed 18 years, find father's age.

- Ans
- 1. 40 years
  - 2. 39 years
  - 3. 41 years

Question ID : 2391303378  
Status : Answered  
Chosen Option : 2

4. 42 years

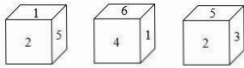
Q.12 Select the related number from the given alternatives.

$$23 : 34 :: 47 : ?$$

- Ans  1. 72  
 2. 65  
 3. 62  
 4. 69

Question ID : 2391303369  
 Status : Answered  
 Chosen Option : 4

Q.13 Three positions of a cube are shown below. Which number will be opposite to the face containing 3?



- Ans  1. 1  
 2. 4  
 3. 6  
 4. 5

Question ID : 2391303388  
 Status : Answered  
 Chosen Option : 3

Q.14 If '+' means 'x', '-' means '+', 'x' means '-' and '+' means '+', then what will be the value of  $16 + 36 - 6 \times 2 + 3 = ?$

- Ans  1. 26  
 2. 20  
 3. 16  
 4. 14

Question ID : 2391303381  
 Status : Answered  
 Chosen Option : 3

Q.15 In a row of boys, Vivek stands thirteenth from the left and Ravi is thirteenth from the right. If they interchange their places, Ravi would be eighteenth from the right. How many boys are there in the row?

- Ans  1. 29  
 2. 31  
 3. 30  
 4. 32

Question ID : 2391303385  
 Status : Answered  
 Chosen Option : 2

Q.16 From the given alternatives select the word which cannot be formed using the letters of the given word.

ORGANISATION

- Ans  1. GRANT  
 2. REASON  
 3. ORGAN  
 4. STRONG

Question ID : 2391303379  
 Status : Answered  
 Chosen Option : 2

Q.17 In the given letter series, which one set of letters when sequentially placed in the gaps shall complete it?  
 p \_ n n \_ p m n \_ m p \_ m n \_ m p

- Ans  1. n p m p n  
 2. m p n p n  
 3. m n p n p  
 4. n m n p p

Question ID : 2391303373  
 Status : Answered  
 Chosen Option : 2

Q.18 Shyam walked 20 metres towards south. Then he turned to his left and walked 15 metres. He again turned to his left and walked 20 metres. He then turned to his right and walked 10 metres. How far and in which direction is Shyam from the starting point?

- Ans  1. 35 Metres, East  
 2. 25 Metres, East  
 3. 35 Metres, West  
 4. 25 Metres, North

Question ID : 2391303384  
 Status : Answered  
 Chosen Option : 2

Q.19

Question ID : 2391303387

Identify the diagram that best represents the relationship among classes given below.

Status : **Answered**  
Chosen Option : 1

Boys, Students, Athletes

Ans

- 1.
- 2.
- 3.
- 4.

**Q.20** Seven friends – A, B, C, D, E, F and G are sitting in a circle facing at the centre. 'E' is neighbour of A and D. 'G' is not between 'F' and 'C'. 'F' is to the immediate right of 'A'. Who is sitting to the right of 'G'?

Question ID : **2391303377**  
Status : **Answered**  
Chosen Option : 3

Ans

- 1. C
- 2. F
- 3. D
- 4. A

**Q.21** Alok is older than Malvika. Gyan is older than Malvika but younger than Alok. Kamal is younger than Rashmi and Malvika. Malvika is older than Rashmi. Whose age is exactly in the middle of the five?

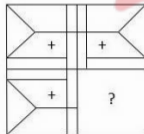
Question ID : **2391303375**  
Status : **Answered**  
Chosen Option : 2

Ans

- 1. Gyan
- 2. Malvika
- 3. Alok
- 4. Rashmi

**Q.22** Select the figure from the alternatives which will complete the pattern in given question figure.

Question ID : **2391303389**  
Status : **Answered**  
Chosen Option : 1



Ans

- 1.
- 2.
- 3.
- 4.

**Q.23**

Question ID : **2391303370**

Identify the word which belongs to the class of given words.

Grams, Kilograms, Quintal

- Ans
- 1. Yard
  - 2. Tonnes
  - 3. Litre
  - 4. Kilometer

Status : **Answered**  
Chosen Option : 2

**Q.24** Some equations are solved on the basis of a certain system. Find the correct value for '?' on that basis.

$$\begin{aligned} 8 * 6 &= 28 \\ 11 * 5 &= 96 \\ 15 * 7 &=? \end{aligned}$$

- Ans
- 1. 208
  - 2. 105
  - 3. 147
  - 4. 176

Question ID : **2391303382**  
Status : **Answered**  
Chosen Option : 4

**Q.25** Select the related letter from the given alternatives.

CXFU : AZBY :: GTNM : ?

- Ans
- 1. EVJQ
  - 2. RIIP
  - 3. IRRD
  - 4. EROP

Question ID : **2391303368**  
Status : **Answered**  
Chosen Option : 1

Section : **General English**

**Q.1** In the following sentence, four words or phrases have been underlined. One of them is incorrect. Select the INCORRECT word or phrase from the given options.

You can be exempted from games only while you produce a medical certificate.

- Ans
- 1. only while
  - 2. produce
  - 3. from
  - 4. can be

Question ID : **2391303394**  
Status : **Answered**  
Chosen Option : 2

**Q.2** Select the word that best expresses the meaning of the given word.

COMPLIMENT

- Ans
- 1. Agree
  - 2. Admire
  - 3. Please
  - 4. Criticize

Question ID : **2391303400**  
Status : **Answered**  
Chosen Option : 2

**Q.3** Select the ANTONYM of the given word.

PRECIOUS

- Ans
- 1. Valued
  - 2. Worthless
  - 3. Loved
  - 4. Costly

Question ID : **2391303403**  
Status : **Answered**  
Chosen Option : 2

**Q.4** Select the word that is spelt INCORRECTLY.

- Ans
- 1. favaur

Question ID : **2391303408**  
Status : **Answered**  
Chosen Option : 1

- 2. fauna
- 3. faucet
- 4. fault

**Q.5** Select the phrase that best expresses the meaning of the underlined word.

I am grateful to my teacher who persistently scolded me for poor spelling.

- Ans**
- 1. pulled me through
  - 2. pulled me up
  - 3. pulled me out
  - 4. pulled me off

Question ID : 2391303410  
Status : Answered  
Chosen Option : 3

**Q.6** Select the option that completes the sentence CORRECTLY.

My cousin felt annoyed with \_\_\_\_\_ when he saw what had happened due to his ignorance.

- Ans**
- 1. himself
  - 2. oneself
  - 3. myself
  - 4. itself

Question ID : 2391303396  
Status : Answered  
Chosen Option : 1

**Q.7** Select the phrase that best expresses the meaning of the underline word.

It was a serious offence but he was allowed to go with a warning.

- Ans**
- 1. let down
  - 2. let off
  - 3. let out
  - 4. let aside

Question ID : 2391303409  
Status : Answered  
Chosen Option : 2

**Q.8** Find the appropriate meaning of the underlined idiom.

A true friend will stand by you through thick and thin.

- Ans**
- 1. at the last moment
  - 2. in difficult times
  - 3. under all circumstances
  - 4. during summer time

Question ID : 2391303411  
Status : Answered  
Chosen Option : 3

**Q.9** Select the option that completes the sentence CORRECTLY.

Next week I \_\_\_\_\_ to visit my cousin.

- Ans**
- 1. will intend
  - 2. intended
  - 3. intending
  - 4. intend

Question ID : 2391303399  
Status : Answered  
Chosen Option : 1

**Q.10** Select the word that is spelt INCORRECTLY.

- Ans**
- 1. Excel
  - 2. Excess
  - 3. Access
  - 4. Expell

Question ID : 2391303406  
Status : Answered  
Chosen Option : 4

**Q.11**

Question ID : 2391303404

Select the ANTONYM of the given word.

Status : **Answered**  
Chosen Option : 3

STRAIGHT

- Ans
- 1. Weak
  - 2. Long
  - 3. Crooked
  - 4. Short

Q.12 Select the option that completes the sentence CORRECTLY.

Question ID : 2391303398  
Status : **Answered**  
Chosen Option : 3

If you have any queries to raise \_\_\_\_\_ please let me know now.

- Ans
- 1. about
  - 2. up
  - 3. no word required
  - 4. along

Q.13 Select the word that best expresses the meaning of the given word.

Question ID : 2391303402  
Status : **Answered**  
Chosen Option : 2

CONCEAL

- Ans
- 1. Deceive
  - 2. Hide
  - 3. Free
  - 4. Detest

Q.14 Select the word that best expresses the meaning of the given word.

Question ID : 2391303401  
Status : **Answered**  
Chosen Option : 4

TRANQUIL

- Ans
- 1. Calm
  - 2. Silent
  - 3. Active
  - 4. Tired

Q.15 Select the ANTONYM of the given word.

Question ID : 2391303405  
Status : **Answered**  
Chosen Option : 4

DESPAIR

- Ans
- 1. Detest
  - 2. Abandon
  - 3. Reject
  - 4. Hope

Q.16 In the following sentence, four words or phrases have been underlined. One of them is incorrect. Select the INCORRECT word or phrase from the given options.

Question ID : 2391303393  
Status : **Answered**  
Chosen Option : 4

A time came when Gautam Buddha began to feel weary with the luxuries surrounding him.

- Ans
- 1. came
  - 2. when
  - 3. began to
  - 4. with

Q.17 Select the word that is spelt INCORRECTLY.

Question ID : 2391303407  
Status : **Answered**  
Chosen Option : 1

- Ans
- 1. moltan
  - 2. molecule

3. moist  
 4. molest

**Q.18** Select the option that completes the sentence CORRECTLY.

I don't think you will have \_\_\_\_\_ difficulty in obtaining your driving license.

- Ans  1. some  
 2. a great deal  
 3. many  
 4. any

Question ID : 2391303397  
Status : Answered  
Chosen Option : 4

**Q.19** In the following sentence, four words or phrases have been underlined. One of them is incorrect. Select the INCORRECT word or phrase from the given options.

This is one of the five books that was launched yesterday at the Vigyan Bhawan.

- Ans  1. one of the  
 2. This  
 3. that was  
 4. at

Question ID : 2391303392  
Status : Answered  
Chosen Option : 3

**Q.20** In the following sentence, four words or phrases have been underlined. One of them is incorrect. Select the INCORRECT word or phrase from the given options.

If Antarctica has a very cold climate a variety of sea birds is found there.

- Ans  1. has  
 2. a variety  
 3. is found  
 4. If

Question ID : 2391303395  
Status : Answered  
Chosen Option : 3

Comprehension Passage:

Adda247



Read the following passage and answer the given questions.

A desert is basically a wilderness or a wasteland. There is little moisture and poor soil such as sand gravel or rock. There are few plants to offer shade. Deserts can be described as harsh places. Many are burning hot by day and cold by night.

Every continent has deserts. Much of the western United States is a desert. A desert region called The Outback covers Central Australia. The southern tip of South America is largely desert. Northern Africa is covered by the Sahara, a desert as big as the mainland United States. The Arabian Peninsula, between the Persian Gulf and the Red Sea, is almost entirely desert. A large part of central Asia, from China to the Caspian Sea, is mostly desert. Deserts cover 1/8 of our planet.

The popular belief is that a desert is dry, hot, waterless and without shelter. But this is not entirely correct. For those who have studied it, the desert can be a beautiful place. It is home to a variety of people, animals and plants that have learnt to live under hot and dry conditions. A desert is not always a flat, unchanging wasteland of dry sand. It may have mountains and hills. It may have an oasis, big or small. An oasis is like a green island in the middle of a desert where a spring or a well gives plants and trees a better chance to grow.

All living things need water in order to survive. The few plants and animals that live in deserts have developed the ability to require less water than most plants and animals. Desert plants have adapted to heat and dryness of the desert. Plants such as cacti have special means of storing and conserving water. They often have few or no leaves. Some plants have gotten used to arid environments by growing extremely long roots, allowing them to acquire moisture at or by the water table.

The desert animals also have found a way to solve the heat and water problems the desert environment creates. Camels can drink a lot of water at one time. They can live without water for days together. The reason is they sweat very little. We sweat because we must keep our body temperature constant. We sweat when it gets hot, and this cools the body. Camels can stand a high body temperature. They don't need to sweat and can therefore retain the water they drink for long periods of time.

SubQuestion No : 21

Q. 21 What is the popular belief about the climatic conditions of a desert?

Ans ~~X~~ 1.

It is a region surrounded by mountains and hills.

✓ 2.

It is sandy where no rain falls and no vegetation grow.

~~X~~ 3.

It has vast land which is used for cultivation of flowers.

Question ID : 2391303413

Status : Answered

Chosen Option : 2

✗ 4. A variety of animals and plants live there.

Comprehension Passage:

Read the following passage and answer the given questions.

A desert is basically a wilderness or a wasteland. There is little moisture and poor soil such as sand gravel or rock. There are few plants to offer shade. Deserts can be described as harsh places. Many are burning hot by day and cold by night.

Every continent has deserts. Much of the western United States is a desert. A desert region called The Outback covers Central Australia. The southern tip of South America is largely desert. Northern Africa is covered by the Sahara, a desert as big as the mainland United States. The Arabian Peninsula, between the Persian Gulf and the Red Sea, is almost entirely desert. A large part of central Asia, from China to the Caspian Sea, is mostly desert. Deserts cover 1/8 of our planet.

The popular belief is that a desert is dry, hot, waterless and without shelter. But this is not entirely correct. For those who have studied it, the desert can be a beautiful place. It is home to a variety of people, animals and plants that have learnt to live under hot and dry conditions. A desert is not always a flat, unchanging wasteland of dry sand. It may have mountains and hills. It may have an oasis, big or small. An oasis is like a green island in the middle of a desert where a spring or a well gives plants and trees a better chance to grow.

All living things need water in order to survive. The few plants and animals that live in deserts have developed the ability to require less water than most plants and animals. Desert plants have adapted to heat and dryness of the desert. Plants such as cacti have special means of storing and conserving water. They often have few or no leaves. Some plants have gotten used to arid environments by growing extremely long roots, allowing them to acquire moisture at or by the water table.

The desert animals also have found a way to solve the heat and water problems the desert environment creates. Camels can drink a lot of water at one time. They can live without water for days together. The reason is they sweat very little. We sweat because we must keep our body temperature constant. We sweat when it gets hot, and this cools the body. Camels can stand a high body temperature. They don't need to sweat and can therefore retain the water they drink for long periods of time.

SubQuestion No : 22

Q. 22 The desert region called 'The Outback' is located in:

- Answers
- ✗ 1. Central Asia
  - ✗ 2. South America
  - ✗ 3. North Africa
  - ✓ 4. Central Australia

Question ID : 2391303414

Status : Answered

Chosen Option : 3

Comprehension Passage:

Read the following passage and answer the given questions.

A desert is basically a wilderness or a wasteland. There is little moisture and poor soil such as sand gravel or rock. There are few plants to offer shade. Deserts can be described as harsh places. Many are burning hot by day and cold by night.

Every continent has deserts. Much of the western United States is a desert. A desert region called The Outback covers Central Australia. The southern tip of South America is largely desert. Northern Africa is covered by the Sahara, a desert as big as the mainland United States. The Arabian Peninsula, between the Persian Gulf and the Red Sea, is almost entirely desert. A large part of central Asia, from China to the Caspian Sea, is mostly desert. Deserts cover 1/8 of our planet.

The popular belief is that a desert is dry, hot, waterless and without shelter. But this is not entirely correct. For those who have studied it, the desert can be a beautiful place. It is home to a variety of people, animals and plants that have learnt to live under hot and dry conditions. A desert is not always a flat, unchanging wasteland of dry sand. It may have mountains and hills. It may have an oasis, big or small. An oasis is like a green island in the middle of a desert where a spring or a well gives plants and trees a better chance to grow.

All living things need water in order to survive. The few plants and animals that live in deserts have developed the ability to require less water than most plants and animals. Desert plants have adapted to heat and dryness of the desert. Plants such as cacti have special means of storing and conserving water. They often have few or no leaves. Some plants have gotten used to arid environments by growing extremely long roots, allowing them to acquire moisture at or by the water table.

The desert animals also have found a way to solve the heat and water problems the desert environment creates. Camels can drink a lot of water at one time. They can live without water for days together. The reason is they sweat very little. We sweat because we must keep our body temperature constant. We sweat when it gets hot, and this cools the body. Camels can stand a high body temperature. They don't need to sweat and can therefore retain the water they drink for long periods of time.

SubQuestion No : 23

Q. 23 Why has an oasis been called 'green' island?

- Answers
- ✓ 1. It has a source of water that supports vegetation.
- ✗ 2. It is surrounded by green hills and mountains.
- ✗ 3. The sand here is conducive for the vegetation.
- ✗ 4. It is in the middle of a vast desert.

Question ID : 2391303415

Status : Answered

Chosen Option : 3

Comprehension Passage:

Read the following passage and answer the given questions.

A desert is basically a wilderness or a wasteland. There is little moisture and poor soil such as sand gravel or rock. There are few plants to offer shade. Deserts can be described as harsh places. Many are burning hot by day and cold by night.

Every continent has deserts. Much of the western United States is a desert. A desert region called The Outback covers Central Australia. The southern tip of South America is largely desert. Northern Africa is covered by the Sahara, a desert as big as the mainland United States. The Arabian Peninsula, between the Persian Gulf and the Red Sea, is almost entirely desert. A large part of central Asia, from China to the Caspian Sea, is mostly desert. Deserts cover 1/8 of our planet.

The popular belief is that a desert is dry, hot, waterless and without shelter. But this is not entirely correct. For those who have studied it, the desert can be a beautiful place. It is home to a variety of people, animals and plants that have learnt to live under hot and dry conditions. A desert is not always a flat, unchanging wasteland of dry sand. It may have mountains and hills. It may have an oasis, big or small. An oasis is like a green island in the middle of a desert where a spring or a well gives plants and trees a better chance to grow.

All living things need water in order to survive. The few plants and animals that live in deserts have developed the ability to require less water than most plants and animals. Desert plants have adapted to heat and dryness of the desert. Plants such as cacti have special means of storing and conserving water. They often have few or no leaves. Some plants have gotten used to arid environments by growing extremely long roots, allowing them to acquire moisture at or by the water table.

The desert animals also have found a way to solve the heat and water problems the desert environment creates. Camels can drink a lot of water at one time. They can live without water for days together. The reason is they sweat very little. We sweat because we must keep our body temperature constant. We sweat when it gets hot, and this cools the body. Camels can stand a high body temperature. They don't need to sweat and can therefore retain the water they drink for long periods of time.

SubQuestion No : 24

Q. 24 Certain plants are able to survive in deserts because they:

- Ans
- 1. have thick stems and few leaves.
  - 2. require less water than animals.
  - 3. have adapted to survive in hot and dry climate.
  - 4. develop especially long roots.

Question ID : 2391303416

Status : Answered

Chosen Option : 2

Comprehension Passage:

Read the following passage and answer the given questions.

A desert is basically a wilderness or a wasteland. There is little moisture and poor soil such as sand gravel or rock. There are few plants to offer shade. Deserts can be described as harsh places. Many are burning hot by day and cold by night.

Every continent has deserts. Much of the western United States is a desert. A desert region called The Outback covers Central Australia. The southern tip of South America is largely desert. Northern Africa is covered by the Sahara, a desert as big as the mainland United States. The Arabian Peninsula, between the Persian Gulf and the Red Sea, is almost entirely desert. A large part of central Asia, from China to the Caspian Sea, is mostly desert. Deserts cover 1/8 of our planet.

The popular belief is that a desert is dry, hot, waterless and without shelter. But this is not entirely correct. For those who have studied it, the desert can be a beautiful place. It is home to a variety of people, animals and plants that have learnt to live under hot and dry conditions. A desert is not always a flat, unchanging wasteland of dry sand. It may have mountains and hills. It may have an oasis, big or small. An oasis is like a green island in the middle of a desert where a spring or a well gives plants and trees a better chance to grow.

All living things need water in order to survive. The few plants and animals that live in deserts have developed the ability to require less water than most plants and animals. Desert plants have adapted to heat and dryness of the desert. Plants such as cacti have special means of storing and conserving water. They often have few or no leaves. Some plants have gotten used to arid environments by growing extremely long roots, allowing them to acquire moisture at or by the water table.

The desert animals also have found a way to solve the heat and water problems the desert environment creates. Camels can drink a lot of water at one time. They can live without water for days together. The reason is they sweat very little. We sweat because we must keep our body temperature constant. We sweat when it gets hot, and this cools the body. Camels can stand a high body temperature. They don't need to sweat and can therefore retain the water they drink for long periods of time.

SubQuestion No : 25

Q. 25 Which of the following statements is not true according to the passage?

Ans ✓ 1.

The Arabian Peninsula between the Persian Gulf and Caspian Sea is entirely desert.

✗ 2.

In a desert region there is little moisture and poor soil.

Question ID : 2391303417

Status : Answered

Chosen Option : 2

3.

Camels can retain water for a long time because they do not sweat.

4.

About 1/8 area of the earth is covered by deserts.

Section : Professional Knowledge

Q.1 Which of the following statements is TRUE?

Ans  1.

The cardinality ratio for a binary relationship specifies the maximum number of relationship instances that an entity can participate in.

2.

The cardinality ratio for a binary relationship specifies the minimum number of relationship instances that an entity can participate in.

3.

The partial participation constraint is also called existence dependency.

4.

The cardinality ratio for a binary relationship specifies the average number of relationship instances that an entity can participate in.

Question ID : 2391303427

Status : Answered

Chosen Option : 1

Q.2 Which of the following represents the function of a Multiplexer?

Ans  1.  $Y = A + B$

2.  $Y = A | B$

3.  $Y = A \& B$

4.  $Y = S ? A : B$

Question ID : 2391303477

Status : Answered

Chosen Option : 2

Q.3 The prefix equivalent of the following infix expression is:

$a/b - c + d * e - a * c$

Ans  1.  $- + - / a b c * d e * a c$

2.  $+ - - / a b c * d e * a c$

3.  $- + / a b c - * d e * a c$

4.  $- - + / a b c * d e * a c$

Question ID : 2391303441

Status : Answered

Chosen Option : 3

Q.4 Which of the following file-type arguments is used in fopen () library function to open a new file for both reading and writing, and destroys the file if a file with the specified file-name already exists in the current directory?

Ans  1. "w"

2. "w+"

3. "a+"

4. "t+"

Question ID : 2391303507

Status : Answered

Chosen Option : 3

Q.5 Which of the following statements about IPv6 is FALSE?

Ans  1. IPSec support is an integral part of IPv6.

2.

IPv6 has no way to distinguish delay-sensitive packets from bulk data transfers.

3.

In comparison to IPv4, IPv6 has improved header structure with less processing overhead.

4.

IPv6 routers no longer have to fragment packets.

Question ID : 2391303509

Status : Answered

Chosen Option : 4

Q.6 Which of the following does not represent the total number of multiplications for multiplying four matrices of orders  $20 \times 2$ ,  $2 \times 30$ ,  $30 \times 12$  and  $12 \times 8$ ?

Ans  1. 1232

2. 3680

Question ID : 2391303450

Status : Answered

Chosen Option : 2

- 3. 10320
- 4. 8850

**Q.7** Two schedules are said to be \_\_\_\_\_, if the order of any two conflicting operations is same in both the schedules.

- Ans**
- 1. conflict equivalent
  - 2. schema equivalent
  - 3. result equivalent
  - 4. view equivalent

Question ID : 2391303485  
Status : Answered  
Chosen Option : 4

**Q.8** Which of the following data structures allows both addition and deletion of items from either end?

- Ans**
- 1. Double Ended Queue
  - 2. Queue
  - 3. Priority Queue
  - 4. Stack

Question ID : 2391303488  
Status : Answered  
Chosen Option : 1

**Q.9** Considering the relation schemas R (A, B, C, D) and S (C, D, E, F), what will be the degree of the resultant relation of the following Relational Algebra expression, where "\*" represents the "natural join" operation?

$$(\sigma_{A=1}(R)) * (\sigma_{E=1}(S))$$

- Ans**
- 1. 3
  - 2. 4
  - 3. 6
  - 4. 5

Question ID : 2391303487  
Status : Answered  
Chosen Option : 3

**Q.10** Which of the following will be the encoding of string "aabaabaca" using Huffman's coding?

- Ans**
- 1. 110111011001
  - 2. 110111011111
  - 3. 110111111001
  - 4. 110011011011

Question ID : 2391303449  
Status : Answered  
Chosen Option : 2

**Q.11** Which of the following is the time complexity of dynamic programming algorithm to compute the Binomial coefficient  ${}^nC_k$ ?

- Ans**
- 1.  $\theta(nk)$
  - 2.  $\theta(k^n)$
  - 3.  $\theta(n^k)$
  - 4.  $\theta(n+k)$

Question ID : 2391303444  
Status : Answered  
Chosen Option : 3

**Q.12** Which of the following constraints enforces that the value of the primary key cannot be Null?

- Ans**
- 1. Key constraint
  - 2. Foreign key constraint
  - 3. Entity integrity constraint
  - 4. Domain constraint

Question ID : 2391303430  
Status : Answered  
Chosen Option : 1

**Q.13** Two concurrent processes P and Q execute the following code.

```
Process P:
while(True){
W: _____
print('0'); print('0');
X: _____
}
```

```
Process Q:
while(True){
Y: _____
print('1'); print('1');
Z: _____
}
```

Given S and T are binary semaphore variables, and P() and V() as standard "wait" and "signal" functions respectively. What should be the semaphore operations W, X, Y, and Z for the output string: 11001100...?

**Ans**

Question ID : 2391303515  
Status : Answered  
Chosen Option : 4

✓ 1.  
W=P(T), X=V(S), Y=P(S), Z=V(T), S=1, T=0

✗ 2. W=P(T), X=V(S), Y=P(S), Z=V(T), S=T=1

✗ 3. W=P(T), X=V(T), Y=P(S), Z=V(S), S=T=1

✗ 4.  
W=P(T), X=V(T), Y=P(S), Z=V(S), S=1, T=0

Q.14 The output of the following 'C' language code is:

```
void main(){
    int x=1, i, y=2;
    for (i=0;i<10;i++)
    {
        x << 1;
        y=x+i;
    }
    printf("%d,%d",x,y);
}
```

- Ans
- ✗ 1. 10,11
  - ✗ 2. 1,1
  - ✗ 3. 10,1
  - ✓ 4. 1,10

Question ID : 2391303462  
Status : Answered  
Chosen Option : 3

Q.15 Which of the following protocols is built on client-server architecture and uses separate control and data connections between the client and the server?

- Ans
- ✓ 1. FTP
  - ✗ 2. SMTP
  - ✗ 3. POP
  - ✗ 4. TELNET

Question ID : 2391303511  
Status : Answered  
Chosen Option : 1

Q.16 An organization has a Class B Network and wishes to form subnets for 60 departments. The subnet mask would be:

- Ans
- ✗ 1. 255.255.64.0
  - ✗ 2. 255.255.0.0
  - ✓ 3. 255.255.252.0
  - ✗ 4. 255.255.255.0

Question ID : 2391303464  
Status : Answered  
Chosen Option : 2

Q.17 Which of the following is an NP-complete problem?

- Ans
- ✗ 1. Turing's Halting problem
  - ✓ 2. CNF-Satisfiability problem
  - ✗ 3. Presburger Arithmetic problem
  - ✗ 4.

Number of Hamiltonian circuits in a complete graph of 'n' vertices with  $n > 2$

Question ID : 2391303448  
Status : Answered  
Chosen Option : 4

Q.18 Which of the following is/are FALSE?

- I) Operator precedence parser works on ambiguous grammar
- II) Top-down parser works on left recursive, unambiguous and deterministic grammar
- III) LL(1) is a non-recursive descent parser
- CLR(1) is the most powerful parser

- Ans
- ✓ 1. Only II
  - ✗ 2. I, II, III and IV
  - ✗ 3. II and IV

Question ID : 2391303456  
Status : Answered  
Chosen Option : 3



4. I, III and IV

**Q.19** The data type of the variable "var1" declared in the following 'C' language statement is:  
unsigned var1;

- Ans  1. int  
 2. double  
 3. char  
 4. float

Question ID : 2391303501  
Status : Answered  
Chosen Option : 1

**Q.20** Which of the following problem cannot be solved using greedy approach?

- Ans  1. 0-1 knapsack  
 2. Job scheduling  
 3. Minimum spanning tree  
 4. Huffman code

Question ID : 2391303447  
Status : Answered  
Chosen Option : 2

**Q.21** The decimal number 395, when converted into binary occupies \_\_\_\_\_ binary digits, whereas when it is represented using BCD codes, occupies \_\_\_\_\_ binary digits.

- Ans  1. 12; 9  
 2. 7; 12  
 3. 9; 12  
 4. 12; 7

Question ID : 2391303420  
Status : Answered  
Chosen Option : 3

**Q.22** Match the following.

- | List I                | List II                           |
|-----------------------|-----------------------------------|
| I) Attenuation        | P) Loss of energy                 |
| II) Shannon capacity  | Q) Changes in shape of the signal |
| III) Nyquist bit rate | R) Noisy channel                  |
| IV) Distortion        | S) Noiseless channel              |

- Ans  1. I – P, II – Q, III – R, IV – S  
 2. I – P, II – R, III – S, IV – Q  
 3. I – S, II – R, III – Q, IV – P  
 4. I – Q, II – P, III – S, IV – R

Question ID : 2391303467  
Status : Answered  
Chosen Option : 3

**Q.23** Which of the following relation schema is always in BCNF?

- Ans  1. R(A, B, C, D)  
 2. R(A, B, C)  
 3. R(A, B, C, D, E)  
 4. R(A, B)

Question ID : 2391303429  
Status : Answered  
Chosen Option : 4

**Q.24** Let  $K_{2,2}$  be a complete bipartite graph given below. Which of the following is the total number of paths of length 3 from vertex 1 to vertex 4?



- Ans  1. 2  
 2. 3  
 3. 4  
 4. 1

Question ID : 2391303499  
Status : Answered  
Chosen Option : 4

**Q.25**

Question ID : 2391303500  
Status : Answered  
Chosen Option : 2

Consider the list of numbers 1, 2, 3, ..., 1000 is stored in  $a[0..999]$ . What will be the total number of comparisons to search  $x = 501$  using the following binary search () function?

```
int binary search(int a[], int n, int x){ int low=0, high=n-1;
while(low <= high){int m = (low+high) / 2;
if(x > a[m]) low = m + 1;
else if(x < a[m]) high = m - 1;
else return m;
}
return -1;
}
```

- Ans
- 1. 2
  - 2. 15
  - 3. 17
  - 4. 1

Q.26 Match the following.

- |  |                             |
|--|-----------------------------|
| List-1   | List-2                      |
| A. Moves suspended process to secondary storage  | I. Short-Term Scheduler     |
| B. Loads the processes into memory for execution | II. Dispatcher              |
| C. Moves one of the processes to Running state   | III. Medium- Term Scheduler |
| D. Allocates CPU to a process                    | IV. Long-Term Scheduler     |

- Ans
- 1. A – III, B – IV, C – I, D – II
  - 2. A – II, B – I, C – IV, D – III
  - 3. A – III, B – I, C – II, D – IV
  - 4. A – II, B – IV, C – I, D – III

Question ID : 2391303514  
Status : Answered  
Chosen Option : 1

Q.27 Which of the following is the Postorder traversal of the binary tree whose Inorder and Preorder traversals are as follows?

In-order : OLCHIBEKNGMADFI  
Preorder : KHLQCBJEAGNMFDI

- Ans
- 1. ADFLIBNCJEMGHOK
  - 2. OCLJEBGDIAFNMHK
  - 3. ADFLIBNMGJCEHOK
  - 4. OCLJEBHNMGDIFAK

Question ID : 2391303437  
Status : Not Attempted  
Chosen Option : --

Q.28 If P is a two-dimensional array having 10 rows and 20 columns, then which of the following cannot be used to access the element in row 2 and column 5?

- Ans
- 1. P[2][5]
  - 2. \*((P + 2) + 5)
  - 3. \*(P[2] + 5)
  - 4. \*(P + 2 + 5)

Question ID : 2391303504  
Status : Answered  
Chosen Option : 4

Q.29 Given total number of instances of a resource to be 18, three processes (P1, P2, and P3) and the resource requirement and allocation table are given below. Which of the following orders of process execution forms a safe (deadlock free) sequence?

Process	Max. Need	Current Allocation
P1	12	7
P2	10	5
P3	5	4

- Ans
- 1. <P1, P2, P3>
  - 2. <P3, P1, P2>
  - 3. <P1, P3, P2>
  - 4. <P2, P1, P3>

Question ID : 2391303471  
Status : Answered  
Chosen Option : 2

Q.30 What will be the "First" and "Follow" of E and F for the following grammar?

$E \rightarrow TE'$   
 $E' \rightarrow +TE' / \epsilon$   
 $T \rightarrow FT'$   
 $T' \rightarrow *FT' / \epsilon$   
 $F \rightarrow id(E)$

- Ans
- 1.  
First(E)={id, (,  $\epsilon$ }, Follow(E)={ $\epsilon$ , )}, First(F)={id, ), S}, Follow(F)={\*, S, (}
  - 2.  
First(E)={id, (}, Follow(E)={S, )}, First(F)={id, (}, Follow(F)={\*, S, )}

Question ID : 2391303458  
Status : Answered  
Chosen Option : 2

3.  $\text{First}(E) = \{id, \epsilon\}$ ,  $\text{Follow}(E) = \{\epsilon, \cdot\}$ ,  $\text{First}(F) = \{id, \cdot\}$ ,  $\text{Follow}(F) = \{*, S, (, +\}$

4.  $\text{First}(E) = \{id, \cdot\}$ ,  $\text{Follow}(E) = \{S, \cdot\}$ ,  $\text{First}(F) = \{id, (, S\}$ ,  $\text{Follow}(F) = \{*, S, \cdot, +\}$

**Q.31** Which of the following recurrence relation can be solved using Master theorem?

- Ans  1.  $T(n) = 64T(n/8) - n$   
 2.  $T(n) = 2T(n/2) + n/(\log n)$   
 3.  $T(n) = 2^n T(n/2) + n$   
 4.  $T(n) = 2T(n/2) + 1$

Question ID : 2391303443  
 Status : Answered  
 Chosen Option : 2

**Q.32** Which of the following statements is TRUE for the grammar given below?

$S \rightarrow (L)/a$   
 $L \rightarrow L, S/S$

- Ans  1. The grammar can be parsed by LR(0) parser only  
 2. The grammar can be parsed by LR(0) and SLR(1) parsers  
 3. The grammar can be parsed by LL(1) parser only  
 4. The grammar can be parsed by LL(1) and LR(0) parsers

Question ID : 2391303457  
 Status : Answered  
 Chosen Option : 4

**Q.33** Match the following.

- |      | List-1             | List-2                                  |
|------|--------------------|---|
| I)   | Class-A IP address | A) 8 bit host id and 24 bit network id  |
| II)  | Class-B IP address | B) 16 bit host id and 16 bit network id |
| III) | Class-C IP address | C) 24 bit host id and 8 bit network id  |

- Ans  1. I - C, II - A, III - B  
 2. I - C, II - B, III - A  
 3. I - A, II - B, III - C  
 4. I - B, II - C, III - A

Question ID : 2391303510  
 Status : Answered  
 Chosen Option : 2

**Q.34** The number of tokens in the following 'C' language statement is:

`printf("The number of tokens are %d", &count);`

- Ans  1. 8  
 2. 9  
 3. 10  
 4. 11

Question ID : 2391303455  
 Status : Answered  
 Chosen Option : 1

**Q.35** Suppose that we have an ordered file with  $r = 30000$  records stored on a disk with block size  $B = 1024$  bytes. If file records are of fixed size and are unspanned with record length  $R = 100$  bytes, the blocking factor for the file and the number of blocks needed for the file are \_\_\_\_\_ and \_\_\_\_\_ respectively.

- Ans  1. 110, 3000  
 2. 10, 3000  
 3. 110, 30000  
 4. 10, 300

Question ID : 2391303435  
 Status : Answered  
 Chosen Option : 3

**Q.36** If  $L = \{ab, c\}$  is a language over the set  $A = \{a, b, c\}$ , then  $L^3$  is:

- Ans  1.  $\{ababc, abcab, abc^2, cabab, cabc, c^2ab, c^3\}$

Question ID : 2391303453  
 Status : Answered  
 Chosen Option : 3

2.

{ababab, ababc, abcab, abc<sup>2</sup>, cabab, c<sup>2</sup>ab, c<sup>3</sup>}

3.

{ababab, ababc, abcab, abc<sup>2</sup>abab, cabab, cabc, c<sup>2</sup>ab, c<sup>3</sup>}

4.

{ababab, ababc, abcab, abc<sup>2</sup>, cabab, cabc, c<sup>2</sup>ab, c<sup>3</sup>}

**Q.37** Consider the following Adjacency matrix corresponding to some weighted Graph 'G'.

Vertex	1	2	3	4	5
1	0	5	0	10	2
2	5	0	4	6	2
3	0	4	0	1	0
4	10	6	1	0	7
5	2	2	0	7	0

What is the weight of the minimum spanning tree for the graph 'G'?

Ans  1. 11

2. 9

3. 10

4. 8

Question ID : 2391303442

Status : Answered

Chosen Option : 1

**Q.38** Which of the following is used to specify whether the existence of an entity depends on its being related to another entity via the relationship type?

Ans  1. Entity integrity constraint

2. Foreign key constraint

3. Cardinality ratio

4. Participation constraint

Question ID : 2391303483

Status : Answered

Chosen Option : 4

**Q.39** Logical data independence is the ability to change \_\_\_\_\_ schema without having to change \_\_\_\_\_ schema.

Ans  1. internal; external

2. conceptual; internal

3. conceptual; external

4. internal; conceptual

Question ID : 2391303484

Status : Answered

Chosen Option : 4

**Q.40** Which of the following addressing modes is more appropriate for accessing elements of an array?

Ans  1. Index mode

2. Auto increment mode

3. Displacement mode

4. Register mode

Question ID : 2391303474

Status : Answered

Chosen Option : 1

**Q.41** Which of the following 'C' language arithmetic expressions has logical error?

Ans  1. -13 % -5 + 3;

2. 4 / (-10 % -2) / 3;

3. 3 / (-13 % -5) / 3;

4. -5 % 3 / 13;

Question ID : 2391303502

Status : Answered

Chosen Option : 2

**Q.42**

Question ID : 2391303424

Status : Answered

Chosen Option : 3

Match the following.

- | List-1                         | List-2            |
|--------------------------------|-------------------|
| (I) $(X')'$                    | (A) De Morgan law |
| (II) $(X + Y)' = X' \cdot Y'$  | (B) Involution    |
| (III) $X(X + Y) = X$           | (C) Distributive  |
| (IV) $X + YZ = (X + Y)(X + Z)$ | (D) Absorption    |

- Ans  1. I – D, II – A, III – B, IV – C
2. I – C, II – A, III – D, IV – B
3. I – B, II – A, III – D, IV – C
4. I – B, II – D, III – A, IV – C

Q.43 Which of the following statements is FALSE?

- Ans  1. Johnson counter is a synchronous counter.
2. Ripple counter is an asynchronous counter.
3. Asynchronous counters are slower than synchronous counters.
4. A counter may count up or count down, but cannot count both up and down.

Question ID : 2391303423  
Status : Answered  
Chosen Option : 4

Q.44 Consider the following relation schema R and S along with their tuple sets.

$R(A, B) = \{ \langle a1, b1 \rangle, \langle a2, b1 \rangle, \langle a3, b1 \rangle, \langle a4, b1 \rangle, \langle a1, b2 \rangle, \langle a3, b2 \rangle, \langle a2, b3 \rangle, \langle a3, b3 \rangle, \langle a4, b3 \rangle, \langle a1, b4 \rangle, \langle a2, b4 \rangle, \langle a3, b4 \rangle \}$   
 $S(A) = \{ a1, a2, a3 \}$   
 What is the value of  $T \leftarrow R / S$ , where " $\leftarrow$ " represents the Relational Algebra "division" operation?

- Ans  1.  $T(B) = \{ b1, b3 \}$
2.  $T(B) = \{ b1, b2, b4 \}$
3.  $T(B) = \{ b1, b4 \}$
4.  $T(B) = \{ b1, b3, b4 \}$

Question ID : 2391303433  
Status : Answered  
Chosen Option : 2

Q.45 Considering the following key using a block of five characters, encryption of the message "NETWORKING" using the Transposition Cipher is:  
 Plaintext : 5 4 3 2 1  
 Ciphertext : 1 2 3 4 5

- Ans  1. GNIKROWTEN
2. OGWNTIEKNR
3. OWTENGNIKR
4. NREKTIWNOG

Question ID : 2391303465  
Status : Answered  
Chosen Option : 1

Q.46 If every production is of the form  $\alpha \rightarrow \beta$  where  $|\alpha| \leq |\beta|$  or of the form  $\alpha \rightarrow \lambda$ , then the grammar is said to be of:

- Ans  1. Type 3
2. Type 1
3. Type 0
4. Type 2

Question ID : 2391303452  
Status : Answered  
Chosen Option : 2

Q.47 Assume that source S and destination D are connected through five intermediate routers R1, R2, R3, R4 and R5. Determine how many times each packet has to visit the Network layer and the Data Link layer during transmission from S to D?

- Ans  1. Network Layer: 7 times, Data Link Layer: 12 times
2. Network Layer: 5 times, Data Link Layer: 12 times
3. Network Layer: 12 times, Data Link Layer: 12 times

Question ID : 2391303463  
Status : Answered  
Chosen Option : 4

4.

Network Layer: 7 times, Data Link Layer: 7 times

**Q.48** Which of the following statements about the "DELETE" command is FALSE?

Ans  1. It removes tuples from a relation (table).

2.

It removes tuples as well as the relation (table).

3.

A missing WHERE clause specifies that all tuples in the relation are to be deleted.

4.

Depending on the number of tuples selected by the condition in the WHERE clause, zero, one or several tuples can be deleted by a single DELETE command.

Question ID : 2391303431

Status : Answered

Chosen Option : 2

**Q.49** Given the Burst Time (BT) of 4 processes P1, P2, P3 and P4 as BT(1, 12, 13, 14) = (4, 8, 6, 7), smoothing factor( $\alpha$ ) = 0.5, and T1=10, what will be the burst time of process P5 for Shortest Job First scheduling, using the technique of exponential averaging?

Ans  1. 6.875 unit time

2. 6.25 unit time

3. 5.785 unit time

4. 5.5 unit time

Question ID : 2391303472

Status : Answered

Chosen Option : 2

**Q.50** In order to sort list of numbers using radix sort algorithm, we need to get the individual digits of each number 'n' of the list. If n is a positive decimal integer, then  $i^{\text{th}}$  digit, from right, of the number n is:

Ans  1.  $\left\lfloor \frac{n}{10^{i-1}} \right\rfloor \% 10$

2.  $\left\lfloor \frac{n}{10^i} \right\rfloor \% 10$

3.  $\left\lfloor \frac{n}{10^{i-1}} \right\rfloor \% 10$

4.  $\left\lfloor \frac{n}{10^i} \right\rfloor \% 10$

Question ID : 2391303498

Status : Answered

Chosen Option : 2

**Q.51** Which of the following statements about "total specialization" constraint is TRUE?

Ans  1. Every entity in the subclass must be a member of the superclass.

2.

Every entity in the superclass must be a member of at least one subclass in the specialization.

3.

At least one entity in the superclass must be a member of at least one subclass in the specialization.

4.

Every entity in the superclass must be a member of all subclasses in the specialization.

Question ID : 2391303428

Status : Answered

Chosen Option : 3

**Q.52** In a B-Tree of order  $m$  ( $m > 1$ ), every non-leaf node (except root node) has the number of children between:

Ans  1.  $m/2$  and  $m$

2.  $\lfloor m/2 \rfloor$  and  $m$

3.  $\lfloor m/2 \rfloor$  and  $m$

4.  $\lfloor m/2 \rfloor$  and  $\lfloor m/2 \rfloor$

Question ID : 2391303496

Status : Answered

Chosen Option : 2

**Q.53** Which of the following statements about Secure Shell Protocol (SSH) is FALSE?

Ans  1.

SSH cannot be used for file transfer and e-mail tasks.

2.

SSH provides a secure client/server communication.

3. SSH runs on top of the TCP/IP layer.

4. SSH is a network protocol.

Question ID : 2391303512

Status : Answered

Chosen Option : 3

Q.54

Which of the following statements is INCORRECT with respect to pointers declared in the following 'C' language code?

```
void main() {
    int a[10], *p, *q;
    p=&a[5];
    q=&a[7];
}
```

- Ans
- 1. q-p
  - 2. P+1
  - 3. q-3
  - 4. P+q

Question ID : 2391303460  
Status : Answered  
Chosen Option : 3

Q.55 Considering the process details given in the following table, what will be the completion order of the processes under the policies FCFS and RR (with CPU quantum of 2 time units)?

Process ID	CPU Burst	Arrival Time
P1	5	3
P2	7	2
P3	5	0

- Ans
- 1. FCFS: P1, P2, P3 and RR: P1, P2, P3
  - 2. FCFS: P3, P2, P1 and RR: P3, P1, P2
  - 3. FCFS: P3, P2, P1 and RR: P3, P2, P1
  - 4. FCFS: P1, P3, P2 and RR: P1, P2, P3

Question ID : 2391303516  
Status : Answered  
Chosen Option : 3

Q.56 Which of the following represents the language over the set  $A = \{a, b\}$  consisting of all words beginning with one or more a's and followed by the same number of b's?

- Ans
- 1.  $L = \{a, ab, ab^2, \dots\}$
  - 2.  $L = \{a^m b^n : m > 0, n > 0\}$
  - 3.  $L = \{a^m b^m : m > 0\}$
  - 4.  $L = \{b^m a b^n : m \geq 0, n \geq 0\}$

Question ID : 2391303451  
Status : Answered  
Chosen Option : 2

Q.57 Which of the following is the every-case time complexity of dynamic programming algorithm for "traversing salesperson" problem to traverse 'n' cities?

- Ans
- 1.  $\theta(\log n 2^n)$
  - 2.  $\theta(n 2^n)$
  - 3.  $\theta(2^n)$
  - 4.  $\theta(n^2 2^n)$

Question ID : 2391303446  
Status : Answered  
Chosen Option : 3

Q.58 Which of the following statements related to Cache memory organization is FALSE?

- Ans
- 1. In "write through" approach, main memory content is always invalid.
  - 2. In "write back" approach, updates are made only in the cache and it minimizes memory writes.
  - 3. Least Recently Used (LRU) replacement algorithm can be used in associative and set associative mappings.
  - 4. For direct mapping, no replacement algorithm is needed.

Question ID : 2391303478  
Status : Answered  
Chosen Option : 2

Q.59 If  $D = \{R_1, R_2\}$  is a decomposition of R, and F is the set of functional dependencies on R, then which of the following ensures that the decomposition D is lossless (nonadditive)?

- Ans
- 1.  $((R_1 \cap R_2) \rightarrow (R_1 - R_2)) \in F^+$
  - 2.  $((R_1 \cap R_2) \rightarrow (R_1 - R_2)) \notin F^+$
  - 3.  $((R_1 \cup R_2) \rightarrow (R_1 - R_2)) \in F^+$
  - 4.  $((R_1 \cap R_2) \rightarrow R_1) \in F^+$

Question ID : 2391303434  
Status : Answered  
Chosen Option : 3

Q.60 The 9's compliment of the decimal number 139452 is:

- Ans
- 1. 971658

Question ID : 2391303418  
Status : Answered

- 2. 971659
- 3. 860547
- 4. 860548

Chosen Option : 3

**Q.61** A flip-flop has a 20-nano second delay from the time its CP input goes from 1 to 0 to the time the output is complimented. What is the maximum delay in a 16-bit binary ripple counter that uses these flip-flops?

- Ans**
- 1. 20 ns
  - 2. 320 ns
  - 3. 36 ns
  - 4. 16 ns

Question ID : 2391303422

Status : Answered

Chosen Option : 2

**Q.62** Let L be the language on A = {a, b, c} which consists of all words of the form  $w = a^r b^s c^t$  where  $r, s, t > 0$ . Which of the following is the valid regular expression 'r' such that  $L = L(r)$ ?

- Ans**
- 1.  $r = a^* b^* c^*$
  - 2.  $r = aa^* bb^* c^*$
  - 3.  $r = aa^* b^* cc^*$
  - 4.  $r = aa^* bb^* cc^*$

Question ID : 2391303454

Status : Answered

Chosen Option : 2

**Q.63** Match the following.

- | List-I                        | List-II                        |
|-------------------------------|--------------------------------|
| I) Dijkstra's Algorithm       | P) Divide and Conquer Approach |
| II) Tower of Hanoi            | Q) Greedy Approach             |
| III) Floyd-Warshall Algorithm | R) Dynamic Approach            |
| IV) Merge Sort                | S) Recursion                   |

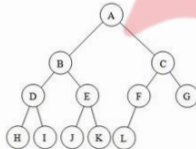
- Ans**
- 1. I – Q, II – S, III – R, IV – P
  - 2. I – S, II – Q, III – P, IV – R
  - 3. I – S, II – Q, III – R, IV – P
  - 4. I – Q, II – S, III – P, IV – R

Question ID : 2391303440

Status : Answered

Chosen Option : 1

**Q.64** The listing of nodes after applying the preorder traversal over the following binary tree is:



- Ans**
- 1. A, B, D, H, I, E, J, K, C, F, G, L
  - 2. H, D, I, B, J, E, K, A, L, F, C, G
  - 3. H, I, D, J, K, E, B, L, F, G, C, A
  - 4. A, B, D, H, I, E, J, K, C, F, L, G

Question ID : 2391303494

Status : Answered

Chosen Option : 4

**Q.65** Consider the following relation schema R along with the tuples.

Employee(name, salary) = {<e1, 10000>, <e2, 5000>, <e3, 2500>, <e4, 7500>, <e5, 8900>, <e6, 9800>}

What is the output of following SQL query?

SELECT name, MAX(salary) FROM Employee WHERE salary < (SELECT MAX(salary) FROM Employee);

- Ans**
- 1. <e3, 2500>
  - 2. <e5, 8900>
  - 3. <e6, 9800>
  - 4. <e1, 10000>

Question ID : 2391303486

Status : Answered

Chosen Option : 3

**Q.66** Maximum number of edges in a simple graph with 'n' vertices and 'k' components is:

- Ans**
- 1.  $\frac{(n-2)(n-1)}{2} + 1$

Question ID : 2391303438

Status : Answered

Chosen Option : 1



- 2.  $\frac{(n-k)(n-k+1)}{2}$
- 3.  $n^2$
- 4.  $\frac{(n)(n-1)}{2}$

**Q.67** The number of elements in a one-dimensional array with lowest and highest index values as -1024 and 1024 is:

- Ans**
- 1. 2048
  - 2. 0
  - 3. 1024
  - 4. 2049

Question ID : 2391303436  
Status : Answered  
Chosen Option : 1

**Q.68** Total number of spanning tree of a complete graph of 4 vertices  $K_4$  is:

- Ans**
- 1. 15
  - 2. 16
  - 3. 3
  - 4. 17

Question ID : 2391303497  
Status : Answered  
Chosen Option : 2

**Q.69** Which of the following relationships holds for non-random-access memory, where  $T_n$  = average time to read or write  $n$  bits,  $T_a$  = average access time,  $n$  = number of bits and  $r$  = transfer rate in bits per second?

- Ans**
- 1.  $T_a = T_n + n/r$
  - 2.  $T_n = T_a + n/r$
  - 3.  $T_a = T_n + r/n$
  - 4.  $T_n = T_a + r/n$

Question ID : 2391303481  
Status : Answered  
Chosen Option : 2

**Q.70** Match the following.

- | List-1                | List-2    |
|-----------------------|-----------|
| I) Independent access | A) RAID 0 |
| II) Parallel access   | B) RAID 3 |
| III) Mirroring        | C) RAID 5 |
| IV) Striping          | D) RAID 1 |

- Ans**
- 1. I – B, II – C, III – D, IV – A
  - 2. I – C, II – B, III – D, IV – A
  - 3. I – A, II – D, III – B, IV – C
  - 4. I – B, II – A, III – D, IV – C

Question ID : 2391303480  
Status : Answered  
Chosen Option : 4

**Q.71** Consider an information exchange scenario where Anthony is the sender and Bond is the intended recipient of the data. Match the following appropriately.

- | List I                      | List II   |
|-----------------------------|---|
| I) Message authentication   | A) Anthony must not be able to deny sending a message that he or she, in fact, did send       |
| II) Message confidentiality | B) The message must arrive at the Bond's side exactly as it was sent                          |
| III) Message integrity      | C) Bond needs to be sure of Anthony's identity and that an imposter has not sent the message  |
| IV) Message non-repudiation | D) The transmitted message must make sense to only Bond, and to all others it must be garbage |

- Ans**
- 1. I – C, II – B, III – D, IV – A
  - 2. I – C, II – D, III – A, IV – B
  - 3. I – C, II – D, III – B, IV – A
  - 4. I – A, II – D, III – B, IV – C

Question ID : 2391303470  
Status : Answered  
Chosen Option : 3

**Q.72** If the address of the operand is embedded in the instruction code itself, then the addressing mode is termed as:

- Ans**
- 1. Register mode

Question ID : 2391303475  
Status : Answered  
Chosen Option : 2

- 2. Direct mode
- 3. Displacement mode
- 4. Immediate mode

**Q.73** Consider the process details given in the following table.

Process ID	CPU Burst	Arrival Time	Priority
P0	3	0	1
P1	9	2	4
P2	7	4	3
P3	6	3	2

A new pre-emptive scheduling algorithm is proposed, i.e., the Longest Remaining Time Next (LRTN), wherein ties are broken by giving priority to the process with the highest priority. Calculate the following.

- i. Turnaround time for Process P2
- ii. Response time for Process P3

- Ans**
- 1. (i) 20, (ii) 6
  - 2. (i) 19, (ii) 3
  - 3. (i) 19, (ii) 8
  - 4. (i) 20, (ii) 7

Question ID : 2391303517  
Status : Answered  
Chosen Option : 2

**Q.74** Under normal circumstances, the cardinality ratio of the binary relationship "Write" relating "Author" and "Book" entities is:

- Ans**
- 1. 1 : N
  - 2. N : 1
  - 3. 1 : 1
  - 4. M : N

Question ID : 2391303482  
Status : Answered  
Chosen Option : 4

**Q.75** If T is a binary tree with N nodes, then the number of levels is at least:

- Ans**
- 1.  $\lceil \log_2(N + 1) \rceil$
  - 2. N-1
  - 3. N
  - 4.  $\lfloor \log_2(N + 1) \rfloor$

Question ID : 2391303489  
Status : Answered  
Chosen Option : 1

**Q.76** Which of the following declares 'pf' as a pointer to a function, which returns an integer quantity and requires two integer arguments?

- Ans**
- 1. `int *pf(int, int);`
  - 2. `int (*pf) (int, int);`
  - 3. `(int *) pf(int, int);`
  - 4. `int (int *pf(int, int));`

Question ID : 2391303505  
Status : Answered  
Chosen Option : 2

**Q.77** The output of the following 'C' language code is:

```
void main(){
    char arr[10];
    arr = "world";
    printf("%s", arr);
}
```

- Ans**
- 1. world
  - 2. world5
  - 3. world10
  - 4. L-value required error

Question ID : 2391303461  
Status : Answered  
Chosen Option : 1

**Q.78** Interrupt generated due to which of the following operations does not belong to program-related interrupt category?

- Ans**
- 1. Division by zero

Question ID : 2391303476  
Status : Answered  
Chosen Option : 2

2.

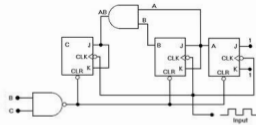
Attempt to execute an illegal machine instruction

3. Memory parity error

4.

Reference outside a user's allowed memory space

**Q.79** The counter implemented by the following circuit diagram where inputs to the NAND gate are the outputs of the B and C flip-flops, is:



**Ans**  1. MOD-7 Counter

2. MOD-6 Counter

3. MOD-8 Counter

4. MOD-4 Counter

Question ID : 2391303425

Status : Answered

Chosen Option : 4

**Q.80** What will be the minimum Hamming distance for the following coding scheme?

Data Word	Code Word
00	00111
01	01001
10	10101
11	11100

**Ans**  1. 1

2. 2

3. 3

4. 4

Question ID : 2391303466

Status : Answered

Chosen Option : 3

**Q.81** In clustering index, the number of index entries is same as the number of:

**Ans**  1. attributes in data file

2. records in data file

3. blocks in data file

4. distinct index field values

Question ID : 2391303432

Status : Answered

Chosen Option : 3

**Q.82** Which of the following operators can be used if a portion of a given bit patterns needs to be copied to a new word, while the remainder of the new word is filled with 0s?

**Ans**  1. Logical AND

2. Bitwise AND

3. Bitwise OR

4. Bitwise XOR

Question ID : 2391303508

Status : Answered

Chosen Option : 2

**Q.83** Let each process  $P_i$ ,  $i=1$  to 7 executes the following code.

```
repeat
P(mutex);
CS
V(mutex);
forever
```

The process  $P_8$  executes the following code:

```
repeat
V(mutex);
CS
V(mutex);
forever
```

What is the maximum number of processes that can be present in the critical section at any point of time? Given that the initial value of binary semaphore variable "mutex" is 1.

**Ans**  1. 7

2. 8

3. 1

4. 10

Question ID : 2391303473

Status : Answered

Chosen Option : 2

**Q.84** Which of the following is the best-case time complexity of Floyd's algorithm for finding shortest paths in a graph with 'n' vertices?

- Ans
- 1.  $\theta(n^2)$
  - 2.  $\theta(1)$
  - 3.  $\theta(n)$
  - 4.  $\theta(n^3)$

Question ID : 2391303445  
Status : Answered  
Chosen Option : 1

**Q.85** State TRUE or FALSE for the following.

- (i) A sine wave with a phase of  $180^\circ$  starts at time 0 with a zero amplitude. The amplitude is decreasing.
- (ii) If a signal changes instantaneously, its frequency is zero.
- (iii) In bipolar encoding, we use three voltage levels: positive, negative and zero.
- (iv) Infrared signals can be used for short-range communication in a closed area using ground propagation.

- Ans
- 1. (i) TRUE, (ii) FALSE, (iii) TRUE, (iv) FALSE
  - 2. (i) TRUE, (ii) TRUE, (iii) TRUE, (iv) FALSE
  - 3. (i) FALSE, (ii) TRUE, (iii) FALSE, (iv) FALSE
  - 4. (i) TURE, (ii) TRUE, (iii) FALSE, (iv) FALSE

Question ID : 2391303468  
Status : Answered  
Chosen Option : 2

**Q.86** Consider the characters and their frequency counts given in the following table.

	a	b	c	d	e	f
Frequency (in 1000s)	24	16	12	20	8	4

Using the Huffman coding technique, which of the following is the valid code for character 'c'?

- Ans
- 1. 11111
  - 2. 1110
  - 3. 11110
  - 4. 110

Question ID : 2391303439  
Status : Answered  
Chosen Option : 3

**Q.87** A block of addresses is granted to a small organization. If one of the addresses is 210.32.64.79/26, then what will be the values of the following?

- (i) First address
- (ii) Last address
- (iii) Total number of addresses

- Ans
- 1. (i) 210.32.64.64, (ii) 210.32.64.127, (iii) 64
  - 2. (i) 210.32.64.64, (ii) 210.32.64.255, (iii) 32
  - 3. (i) 210.32.64.79, (ii) 210.32.64.255, (iii) 64
  - 4. (i) 210.32.64.64, (ii) 210.32.64.79, (iii) 128

Question ID : 2391303469  
Status : Answered  
Chosen Option : 2

**Q.88** A \_\_\_\_\_ takes a directed \_\_\_\_\_ graph G and produces a linear ordering of all its vertices such that for every directed edge  $\langle v, w \rangle$  in G, the vertex v comes before the vertex w in the ordering.

- Ans
- 1. breadth first search; acyclic
  - 2. topological sort; acyclic
  - 3. breadth first search; cyclic
  - 4. topological sort; cyclic

Question ID : 2391303492  
Status : Answered  
Chosen Option : 3

**Q.89** Match the following.

- | List I            | List II                 |
|-------------------|-------------------------|
| I) Stack          | P) Non-linear           |
| II) Heap tree     | Q) Complete binary tree |
| III) Tree         | R) Ordered list         |
| IV) Binary search | S) Linear               |

Question ID : 2391303495  
Status : Answered  
Chosen Option : 1

- Ans  1. I – S, II – R, III – P, IV – Q  
 2. I – S, II – Q, III – P, IV – R  
 3. I – S, II – P, III – Q, IV – R  
 4. I – P, II – Q, III – R, IV – S

**Q.90** Which of the following statements is TRUE for the function prototype declaration given below?

Int **\***(**\***P) (char **\***Q[]);

- Ans  1.  
 P is a function that accepts an argument which is a character array and returns a pointer to an integer quantity.  
 2.  
 P is a function that accepts an argument which is a pointer to a character array and returns a pointer to an integer quantity.  
 3.  
 P is a pointer to a function that accepts an argument which is an array of character pointers, and returns a pointer to an integer quantity.  
 4.  
 P is a pointer to function that accepts an argument which is a character array and returns a pointer to an integer quantity.

Question ID : 2391303506

Status : Answered

Chosen Option : 3

**Q.91** Consider the following segment of codes related to process creation. How many times the message "child process created" will be printed?

```
#include <stdio.h>
void main()
fork(); fork(); fork();
printf("child process created");
}
```

- Ans  1. 9  
 2. 7  
 3. 8  
 4. 3

Question ID : 2391303513

Status : Answered

Chosen Option : 3

**Q.92** What is the output when the following segment of 'C' code is executed?

```
void main(){
float a = 123.456;
printf("%7.2f, %7.3f, %12e", a, a, a);
}
```

- Ans  1. 123.450, 123.4560, 1.234560e+02  
 2. 123.46, 123.456, 1.234560e+02  
 3. 123.456000, 123.456, 0.1234560e+03  
 4. 123.45, 123.4560, 1.234560e+02

Question ID : 2391303503

Status : Answered

Chosen Option : 2

**Q.93** Which of the following is a seven-bit code?

- Ans  1. Biquinary code  
 2. BCD code  
 3. 2421 code  
 4. Excess-3 code

Question ID : 2391303419

Status : Answered

Chosen Option : 2

**Q.94** Which of the following attributes can be considered as composite, single-valued and key attribute?

- Ans  1. Age  
 2. Date of birth  
 3. Gender  
 4. Enrollment number

Question ID : 2391303426

Status : Answered

Chosen Option : 2

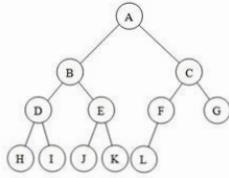
**Q.95**

Question ID : 2391303491

Status : Answered

Chosen Option : 2

Which of the following statements about the following binary tree is FALSE?



- Ans
- 1. It is a binary search tree.
  - 2. It is a complete binary tree.
  - 3. Nodes 'J' and 'K' are siblings.
  - 4. Node 'B' is the ancestor of node 'J'.

Q.96 The default storage class for functions in 'C' language is:

- Ans
- 1. Static
  - 2. Register
  - 3. Extern
  - 4. Auto

Question ID : 2391303459  
Status : Answered  
Chosen Option : 2

Q.97 If T is a binary tree with number of levels as L, then the number of leaf nodes in the binary tree is at most:

- Ans
- 1.  $2^{L+1}$
  - 2.  $2L$
  - 3.  $2^L$
  - 4.  $2^{L-1}$

Question ID : 2391303490  
Status : Answered  
Chosen Option : 2

Q.98 If a connected graph G does not contain any vertex whose removal disconnects the rest of the graph, then G is called:

- Ans
- 1. Biconnected graph
  - 2. Separable graph
  - 3. Forest
  - 4. Diagraph

Question ID : 2391303493  
Status : Answered  
Chosen Option : 2

Q.99 Consider a cache memory organization with  $m$  lines in which the cache is divided into  $v$  sets, each of which consists of  $k$  lines. The set associative mapping technique reduces to direct mapping when:

- Ans
- 1.  $v = m$  and  $k = m$
  - 2.  $v = 1$  and  $k = m$
  - 3.  $v = m$  and  $k = 1$
  - 4.  $v = 1$  and  $k = 1$

Question ID : 2391303479  
Status : Answered  
Chosen Option : 2

Q.10 Consider a memory unit of size  $96\text{K} \times 16$ , where first component represents the total number of words and that the second component represents the number of bits per word. What will be the number of address lines and input-output data lines?

- Ans
- 1. 16 address lines, 7 data lines
  - 2. 7 address lines, 16 data lines
  - 3. 17 address lines, 16 data lines
  - 4. 16 address lines, 17 data lines

Question ID : 2391303421  
Status : Answered  
Chosen Option : 2