



Download PDF of All India Mock for RBI Assistant Prelims 2022- 21st &22nd March

Directions (1-7): Read the following passage carefully and answer the questions given below them.

In a welcome development, the National Health Authority (NHA) — the body responsible for administering the Ayushman Bharat Digital Mission (ABDM) — has _____ a consultation process on the retention of health data by health-care providers in India. The consultation paper asks for feedback on what data is to be retained, and for how long. A simple classification system, as suggested in the consultation paper, exposes individuals to harms arising from over-collection and retention of unnecessary data. At the same time, this kind of one-size-fits-all system can also lead to under-retention of data that is genuinely required for research or public policy needs. Instead, we should seek to classify data based on its use. In this system, health data not required for an identified purpose would be anonymised, or deleted.

Whether the state should mandate a retention period at all is an open question. Currently, service providers can compete on how they handle the data of individuals or health records; in theory, each of us can choose a provider whose data policies we are comfortable with. Given the landscape of health-care access in India, including through informal providers, many patients may not think about this factor in practice. Nonetheless, the decision to take choice out of the individual's hands should not be taken lightly. The Supreme Court of India has clarified that privacy is a fundamental right, and any interference into the right must pass a four-part test: legality; **legitimate** aim; proportionality, and appropriate safeguards. The mandatory retention of health data is one such form of interference with the right to privacy.

In this context, the question of legality becomes a question about the legal standing and authority of the NHA. For instance, the consultation paper asks whether the health data retention policy should be made applicable only to health-care providers who are participating in the ABDM ecosystem, or to all health-care providers in general. We believe the answer can only be the former; since the NHA is not a sector-wide regulator, it has no legal basis for formulating guidelines for health-care providers in general. The aim of data retention is described in terms of benefits to the individual and the public at large. Individuals benefit through greater convenience and choice, created through portability of health records. The broader public benefits through research and innovation, driven by the availability of more and better data to analyse. While these are important benefits, they do have to be weighed against the risks. Globally, legal systems consider health data particularly sensitive, and recognise that improper disclosure of this data can expose a person to a range of significant harms. These could include harms that would be very difficult to make whole, so it is not enough to have penalties for such breaches; every effort must be made to minimise the extent of data collected, and to hold it only for the amount of time needed so as to reduce the likelihood of any breach in the first place.

BILINGUAL

BANK PRIME
TEST PACK

SBI | IBPS | RBI | ESIC | ECGC | Others

1200+ TOTAL TESTS

Q1. Why there is a need for a consultation process on the retention of health data?

- (a) Consultation papers will help in preserving the overall data of healthcare across the country
- (b) It is a crucial step to determine the access of healthcare services to all especially during the pandemic
- (c) It is a process of turning all papers into digital papers and keeping them in a Digi-locker
- (d) This will help in classifying the important data that should be maintained by NHA
- (e) None of these

Q2. Which of the following is suggested as a technique for maintaining important data?

- (a) Distribution of necessary health data in different health departments
- (b) Categorization of data as per their usage and expunge the irrelevant ones
- (c) Keeping all data as it could be required later for tracking history
- (d) Making data available on websites and accessible for general use
- (e) None of these

Q3. What is the Supreme Court's concern associated with data retention?

- (a) As a huge population is illiterate, they don't analyze appropriate safeguards
- (b) Keeping health data is an infringement of the fundamental right to privacy
- (c) a transparent access to all the health data of every citizen could provide a negative image on country's health sector.
- (d) Important health data of all citizens can be misused by private service providers
- (e) None of these

Q4. What is/are the advantage(s) of retention of data as per the passage?

- (a) preserving data is necessary for further research and development in the healthcare sector
- (b) There are benefits by innovation which are brought out by better data to analyze
- (c) Person can be benefitted from greater convenience and choice created through the portability of health records.
- (d) Only (B) and (C)
- (e) None of these

Q5. Which of the following is/are mentioned drawback(s) associated with retention of data?

- (a) The possibility of data breaching is high with retention of data.
- (b) Exposing these health data can trigger a range of significant harm
- (c) The severity of data breaching in health sector is so high that no amount of penalty can match up to it.
- (d) All of these
- (e) None of these

Q6. Which of the following can be used to fill the blank given in the passage in order to make a grammatically correct and contextually meaningful sentence?

- (a) initiated
- (b) revoked
- (c) invoked
- (d) preamble
- (e) None of these

Q7. Which of the following is the similar in meaning of '**Legitimate**' given in bold in the paragraph?

- (a) shady
- (b) authorized
- (c) democratic
- (d) felonious
- (e) None of these

Directions (8-14): In the following passage, some of the words have been left out, each of which is indicated by a number. Find the suitable word from the options given against each number and fill up the blanks with appropriate words to make the paragraph meaningfully complete.

Q8. Finance Minister Nirmala Sitharaman's Budget announcement that the Government _____(8) to conduct the "required spectrum auctions" in 2022 to facilitate the roll-out of 5G mobile phone services in fiscal 2022-23 has understandably triggered _____ (9) including about the feasibility of the timeline. The Government's keenness to _____ (10) the roll-out was framed by Ms. Sitharaman as being _____ (11) by an appreciation of the latest generation telecommunication technology's ability to serve as an enabler of economic growth and job creation. Commenting on the Budget announcement, Communications Minister Ashwini Vaishnaw said TRAI was expected to submit its recommendations on the spectrum to be set aside for 5G by March, adding that the _____ (12) for the airwaves would be held soon after. While last week's flurry of announcements have raised the possibility that the next auction of telecom spectrum may be held within the next few months, there is little clarity on the _____ (13) the Government plans to take with regard to the crucial issues surrounding the introduction of 5G services. Foremost are questions around the particular _____ (14) the regulator is likely to recommend, the Government's plans on pricing the spectrum, and most crucially, the very viability of the new technology, both for the telecom companies and the economy as a whole.

- (a) dismal
- (b) proposes
- (c) vigorous
- (d) influx
- (e) expedient

Q9. Finance Minister Nirmala Sitharaman's Budget announcement that the Government _____(8) to conduct the "required spectrum auctions" in 2022 to facilitate the roll-out of 5G mobile phone services in fiscal 2022-23 has understandably triggered _____ (9) including about the feasibility of the timeline. The Government's keenness to _____ (10) the roll-out was framed by Ms. Sitharaman as being _____ (11) by an appreciation of the latest generation telecommunication technology's ability to serve as an enabler of economic growth and job creation. Commenting on the Budget announcement, Communications Minister Ashwini Vaishnaw said TRAI was expected to submit its recommendations on the spectrum to be set aside for 5G by March, adding that the _____ (12) for the airwaves would be held soon after. While last week's flurry of announcements have raised the possibility that the next auction of telecom spectrum may be held within the next few months, there is little clarity on the _____ (13) the Government plans to take with regard to the crucial issues surrounding the introduction of 5G services. Foremost are questions around the particular _____ (14) the regulator is likely to recommend, the Government's plans on pricing the spectrum, and most crucially, the very viability of the new technology, both for the telecom companies and the economy as a whole.

- (a) booster
- (b) jubilation
- (c) impedance
- (d) speculation
- (e) abeyance

Q10. Finance Minister Nirmala Sitharaman's Budget announcement that the Government _____(8) to conduct the "required spectrum auctions" in 2022 to facilitate the roll-out of 5G mobile phone services in fiscal 2022-23 has understandably triggered _____ (9) including about the feasibility of the timeline. The Government's keenness to _____ (10) the roll-out was framed by Ms. Sitharaman as being _____ (11) by an appreciation of the latest generation telecommunication technology's ability to serve as an enabler of economic growth and job creation. Commenting on the Budget announcement, Communications Minister Ashwini Vaishnaw said TRAI was expected to submit its recommendations on the spectrum to be set aside for 5G by March, adding that the _____ (12) for the airwaves would be held soon after. While last week's flurry of announcements have raised the possibility that the next auction of telecom spectrum may be held within the next few months, there is little clarity on the _____ (13) the Government plans to take with regard to the crucial issues surrounding the introduction of 5G services. Foremost are questions around the particular _____ (14) the regulator is likely to recommend, the Government's plans on pricing the spectrum, and most crucially, the very viability of the new technology, both for the telecom companies and the economy as a whole.

- (a) expedite
- (b) incline
- (c) prosper
- (d) paving
- (e) delusion

Q11. Finance Minister Nirmala Sitharaman's Budget announcement that the Government _____(8) to conduct the "required spectrum auctions" in 2022 to facilitate the roll-out of 5G mobile phone services in fiscal 2022-23 has understandably triggered _____ (9) including about the feasibility of the timeline. The Government's keenness to _____ (10) the roll-out was framed by Ms. Sitharaman as being _____ (11) by an appreciation of the latest generation telecommunication technology's ability to serve as an enabler of economic growth and job creation. Commenting on the Budget announcement, Communications Minister Ashwini Vaishnaw said TRAI was expected to submit its recommendations on the spectrum to be set aside for 5G by March, adding that the _____ (12) for the airwaves would be held soon after. While last week's flurry of announcements have raised the possibility that the next auction of telecom spectrum may be held within the next few months, there is little clarity on the _____ (13) the Government plans to take with regard to the crucial issues surrounding the introduction of 5G services. Foremost are questions around the particular _____ (14) the regulator is likely to recommend, the Government's plans on pricing the spectrum, and most crucially, the very viability of the new technology, both for the telecom companies and the economy as a whole.

- (a) endanger
- (b) hoard
- (c) propelled
- (d) abet
- (e) rampant

Q12. Finance Minister Nirmala Sitharaman's Budget announcement that the Government _____(8) to conduct the "required spectrum auctions" in 2022 to facilitate the roll-out of 5G mobile phone services in fiscal 2022-23 has understandably triggered _____ (9) including about the feasibility of the timeline. The Government's keenness to _____ (10) the roll-out was framed by Ms. Sitharaman as being _____ (11) by an appreciation of the latest generation telecommunication technology's ability to serve as an enabler of economic growth and job creation. Commenting on the Budget announcement, Communications Minister Ashwini Vaishnaw said TRAI was expected to submit its recommendations on the spectrum to be set aside for 5G by March, adding that the _____ (12) for the airwaves would be held soon after. While last week's flurry of announcements have raised the possibility that the next auction of telecom spectrum may be held within the next few months, there is little clarity on the _____ (13) the Government plans to take with regard to the crucial issues surrounding the introduction of 5G services. Foremost are questions around the particular _____ (14) the regulator is likely to recommend, the Government's plans on pricing the spectrum, and most crucially, the very viability of the new technology, both for the telecom companies and the economy as a whole.

- (a) dissipate
- (b) anomaly
- (c) nurture
- (d) clemency
- (e) auction

Q13. Finance Minister Nirmala Sitharaman's Budget announcement that the Government _____(8) to conduct the "required spectrum auctions" in 2022 to facilitate the roll-out of 5G mobile phone services in fiscal 2022-23 has understandably triggered _____ (9) including about the feasibility of the timeline. The Government's keenness to _____ (10) the roll-out was framed by Ms. Sitharaman as being _____ (11) by an appreciation of the latest generation telecommunication technology's ability to serve as an enabler of economic growth and job creation. Commenting on the Budget announcement, Communications Minister Ashwini Vaishnaw said TRAI was expected to submit its recommendations on the spectrum to be set aside for 5G by March, adding that the _____ (12) for the airwaves would be held soon after. While last week's flurry of announcements have raised the possibility that the next auction of telecom spectrum may be held within the next few months, there is little clarity on the _____ (13) the Government plans to take with regard to the crucial issues surrounding the introduction of 5G services. Foremost are questions around the particular _____ (14) the regulator is likely to recommend, the Government's plans on pricing the spectrum, and most crucially, the very viability of the new technology, both for the telecom companies and the economy as a whole.

- (a) slender
- (b) approach
- (c) tenacious
- (d) segregation
- (e) mourn

Q14. Finance Minister Nirmala Sitharaman's Budget announcement that the Government _____(8) to conduct the "required spectrum auctions" in 2022 to facilitate the roll-out of 5G mobile phone services in fiscal 2022-23 has understandably triggered _____ (9) including about the feasibility of the timeline. The Government's keenness to _____ (10) the roll-out was framed by Ms. Sitharaman as being _____ (11) by an appreciation of the latest generation telecommunication technology's ability to serve as an enabler of economic growth and job creation. Commenting on the Budget announcement, Communications Minister Ashwini Vaishnaw said TRAI was expected to submit its recommendations on the spectrum to be set aside for 5G by March, adding that the _____ (12) for the airwaves would be held soon after. While last week's flurry of announcements have raised the possibility that the next auction of telecom spectrum may be held within the next few months, there is little clarity on the _____ (13) the Government plans to take with regard to the crucial issues surrounding the introduction of 5G services. Foremost are questions around the particular _____ (14) the regulator is likely to recommend, the Government's plans on pricing the spectrum, and most crucially, the very viability of the new technology, both for the telecom companies and the economy as a whole.

- (a) tentative
- (b) dejection
- (c) frequencies
- (d) institute
- (e) abrogation

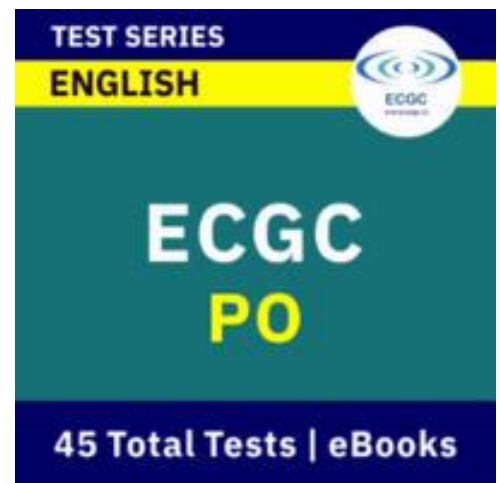
Directions (15-19): In each of the questions given below, a statement with a highlighted phrase is given. The highlighted phrase may or may not be used correctly in the given statements. Choose the most appropriate phrase from the given options which could replace the highlighted phrase to make the statements grammatically and contextually correct. If the highlighted phrase is correct then choose option "No replacement required" as your response.

Q15. The increasing trend in Covid-199 cases continued **despite of a higher number of tests** being conducted in the city and district.

- (a) despite of a higher numbers of tests
- (b) in spite a higher number of tests
- (c) In spite of a higher number from tests
- (d) despite a higher number of tests
- (e) No replacement required

Q16. He is **so young to drive** a car therefore he didn't get a driving license.

- (a) to young to drive
- (b) very young to drive
- (c) so young for drive
- (d) too young to drive
- (e) No replacement required



Q17. Creative thinking relies on the organization of associations in semantic memory, i.e., on the way **elements of our many knowledge** are connected to each other.

- (a) element of our many knowledge
- (b) elements of our much knowledge
- (c) elements of our knowledge
- (d) elements of our many knowleges
- (e) No replacement required

Q18. French President's shuttle diplomacy between Russia and Ukraine is **one of the most significant interventions** in the crisis ever since tensions started soaring in Eastern Europe.

- (a) one of the most significance interventions
- (b) one of the more significant interventions
- (c) one of the most significant intervention
- (d) one of the mostly significant intervention
- (e) No replacement required

Q19. Today Elijah didn't get runs **but he will get runs if he is** playing under Oliver's captaincy or anybody else's.

- (a) however he will get runs if he is
- (b) but he will gets runs if he is
- (c) but he will get runs whether he was
- (d) but he will get runs whether he is
- (e) No replacement required

Directions (20-21): In each of the questions given below, a sentence has been divided into FOUR parts. Rearrange the parts of the sentence to make a grammatically correct and contextually meaningful statement. If the sentence is correct as it is then choose option 'No rearrangement required'.

Q20. the breakdown of democracy by (A)/ such coups after Guinea, Mali and Sudan (B)/ Burkina Faso became the fourth country (C)/ to be suspended by the African Union for (D).

- (a) DBCA
- (b) CDAB
- (c) BCDA
- (d) BDAC
- (e) No rearrangement required

Q21. India needs a unified labour market (A)/, safety and dignity to all workers (B)/ and universal social security system (C)/ which can ensure security, (D).

- (a) ACDB
- (b) CBDA
- (c) DABC
- (d) BDCA
- (e) No rearrangement required

Directions (22-25): In the following question, sentences are given with four words in bold. The given words in bold may or may not be correctly spelled. The incorrectly spelled word will be your answer. If all the words are correct then select 'All are correct' as your answer.

Q22. Greater spending on the social sector can contribute to **improvements** in human development outcomes, provide a **cushion** to people during the current **economic** crisis and also contribute to boosting private **consumption** demand.

- (a) improvements
- (b) cushion
- (c) economic
- (d) consumption
- (e) All are correct

Q23. **Craving** for a modest amount of **autonmy** unites **principals** and teachers from across our vast **network** of schools.

- (a) craving
- (b) autonmy
- (c) principals
- (d) network
- (e) All are correct

Q24. With the country yet again **grappling** with another wave of the COVID-19 **pandemic**, there are concerns about **faltering** growth and increasing **unemployment**.

- (a) grappling
- (b) pandemic
- (c) faltering
- (d) unemployment
- (e) All are correct

Q25. The **environment** is one such issue now **considered** to be an essential **component** to be factored in to measure human **development**.

- (a) environment
- (b) considered
- (c) component
- (d) developement
- (e) All are correct

Directions (26-30): Each question is divided into four parts, in which one part may or may not have an error. Choose the incorrect part as your answer.

Q26. The significant dispersion of (A)/ the people of that nation occurred once (B)/it was destroyed by a catastrophe, (C)/ forcing them to spread elsewhere(D)/No Error(E).

- (a) A
- (b) B
- (c) C
- (d) D
- (e) No Error

Q27. Because I does not wish to (A) /exacerbate my mother's worries, (B)/I am not going to tell her about (C)/ my problems at work (C)/ No Error (E).

- (a) A
- (b) B
- (c) C
- (d) D
- (e) No Error

Q28. Because an excessive number of (A)/ invitations were sent out, (B)/there was not enough seats (C)/ for the attendees (D)/ No Error(E)

- (a) A
- (b) B
- (c) C
- (d) D
- (e) No Error

Q29. Your suggestion on (A)/increasing greenhouse (B)/gases is not different (C)/ from your best friend (D)/ No Error (E)

- (a) A
- (b) B
- (c) C
- (d) D
- (e) No Error

Q30. The contradictory law(A)/ makes no sense because it (B)/ outlaws the act in one part and (C)/ allow it in another(D).

- (a) A
- (b) B
- (c) C
- (d) D
- (e) No Error

Directions (31-40): What will come in place of (?) question mark in the following questions?

निम्नलिखित प्रश्नों में प्रश्नचिन्ह (?) के स्थान पर क्या आएगा?

Q31.

$$62.5\% \text{ of } 576 + 16\frac{2}{3}\% \text{ of } 300 = ? + (19)^2$$

- (a) 37
- (b) 42
- (c) 49
- (d) 59
- (e) 52

Q32.

$$4\frac{1}{11} \times 7\frac{1}{3} \div 5\frac{4}{3} \times 1\frac{7}{12} = ?$$

- (a) 35/3
- (b) 11
- (c) 15/2
- (d) 9
- (e) 12

Q33.

$$(1.36 + 1.14)^2 \times 4 \times 1.75 = ?$$

- (a) 36.25
- (b) 37.5
- (c) 50
- (d) 43.75
- (e) 29.5

Q34.

$$(81)^{\frac{1}{4}} \times (729)^{-\frac{1}{3}} \times 9^2 = ?$$

- (a) 27
- (b) 9
- (c) 18
- (d) 81
- (e) 36

Q35.

$$\frac{?-7^2}{35\% \text{ of } 40} \times 45 \div 0.3 = \frac{150}{7}$$

- (a) 55
- (b) 63
- (c) 51
- (d) 47
- (e) 42

Q36.

$$784 + 1297 - 613 = ? + 429 + 811$$

- (a) 228
- (b) 342
- (c) 1454
- (d) 1086
- (e) 338



Q37.

$$[(50)^2 \times 4] \div 80 \div 25 = (8)^2 - ?$$

- (a) 59
- (b) 42
- (c) 49
- (d) 79
- (e) 69

Q38.

$$75\% \text{ of } 340 - 150\% \text{ of } 170 = ?$$

- (a) 12
- (b) 15
- (c) 7
- (d) 0
- (e) 22

Q39.

$$\frac{4}{5} \text{ of } \sqrt{1225} \div \frac{1}{3} \text{ of } (729)^{\frac{1}{3}} = ? + \frac{1}{3}$$

- (a) 10
- (b) 18
- (c) 15
- (d) 9
- (e) 3

Q40.

$$\frac{11}{7} \text{ of } 210\% \text{ of } ? = \sqrt{121} \times 6$$

- (a) 20
- (b) 30
- (c) 50
- (d) 60
- (e) 10

Q41. Avinash covers a distance of 560 km in 7 hours. If speed of Anurag is $\frac{3}{4}$ th of the speed of Avinash, then find time taken by Anurag to cover $\frac{5}{8}$ th of the distance that is covered by Avinash.

अविनाश 7 घंटे में 560 किमी की दूरी तय करता है। यदि अनुराग की गति, अविनाश की गति का $\frac{3}{4}$ है, तो अविनाश द्वारा तय की गई दूरी का $\frac{5}{8}$ भाग तय करने में, अनुराग द्वारा लिया गया समय ज्ञात कीजिए।

- (a) 320 min/320 मिनट
- (b) 420 min/420 मिनट
- (c) 395 min/ 395मिनट
- (d) 350 min/350 मिनट
- (e) 280 min/ 280 मिनट

TEST SERIES
BILINGUAL



ESIC SSO 2022
MANAGER
PHASE-I & II

45 Tests | eBooks



adda247

Q42. Two alloys containing iron: zinc: tin and iron: tin in ratio 2:3:4 and 2:1 respectively are mixed in ratio 3:5 respectively to form another alloy so that tin in final alloy becomes 45 kg, find quantity of zinc in final alloy?

दो मिश्रधातु जिसमें लोहा: जस्ता: टिन और लोहा: टिन क्रमशः 2:3:4 और 2:1 के अनुपात में हैं। उन्हें एक अन्य मिश्रधातु बनाने के लिए 3:5 के अनुपात में मिलाया जाता है जिससे अंतिम मिश्रधातु में टिन 45 किग्रा हो जाए, अंतिम मिश्र धातु में जस्ता की मात्रा ज्ञात कीजिये।

- (a) 18 kg / 18 कि.ग्रा.
- (b) 24 kg / 24 कि.ग्रा.
- (c) 20 kg / 20 कि.ग्रा.
- (d) 15 kg / 15 कि.ग्रा.
- (e) 32 kg / 32 कि.ग्रा.

Q43. By selling an article at Rs 750, a shopkeeper gets a loss of 25%. Find, to make a profit of 25% he should sell the article at how much price?

एक वस्तु को 750 रुपये में बेचने पर एक दुकानदार को 25% की हानि होती है। ज्ञात कीजिए, 25% का लाभ कमाने के लिए उसे वस्तु को किस मूल्य पर बेचना चाहिए?

- (a) Rs 1200 / 1200 रुपये
- (b) Rs 1250 / 1250 रुपये
- (c) Rs 900 / 900 रुपये
- (d) Rs 1000 / 1000 रुपये
- (e) Rs 1500 / 1500 रुपये

Q44. A, B and C can do a piece of work in 12 days, 8 days and 20 days respectively. If total wage earned by them is Rs 930, then find wage of C is how much more/less than A.

A, B और C एक कार्य को क्रमशः 12 दिन, 8 दिन और 20 दिन में पूरा कर सकते हैं। यदि उनके द्वारा अर्जित कुल वेतन 930 रुपये है, तो ज्ञात कीजिए कि C का वेतन, A से कितना अधिक/कम है।

- (a) Rs 120/120 रुपये
- (b) Rs 180/180 रुपये
- (c) Rs 160/160 रुपये
- (d) Rs 220/220 रुपये
- (e) Rs 150/150 रुपये

Q45. What will be area (in cm^2) of a square, which side is 12 cm more than radius of a circle. Area of the circle is 2464 cm^2 ?

एक वर्ग का क्षेत्रफल (वर्ग सेमी में) क्या होगा, जिसकी भुजा, एक वृत्त की त्रिज्या से 12 सेमी अधिक है। वृत्त का क्षेत्रफल 2464 वर्ग सेमी है?

- (a) 1600
- (b) 2500
- (c) 1024
- (d) 1296
- (e) 2304

Directions (46-50): Which number is wrong in the following number series.

निम्नलिखित संख्या श्रृंखला में कौन सी संख्या गलत है?

Q46. 2, 4, 9, 19, 36, 62, 98

- (a) 19
- (b) 2
- (c) 62
- (d) 98
- (e) 9

Q47. 30, 15, 60, 10, 80, 8, 90

- (a) 30
- (b) 15
- (c) 8
- (d) 10
- (e) 90

Q48. 6, 9, 14, 21, 30, 45, 62

- (a) 30
- (b) 21
- (c) 62
- (d) 6
- (e) 14

Q49. 5, 12, 22, 37, 57, 82, 112

- (a) 12
- (b) 112
- (c) 5
- (d) 82
- (e) 37

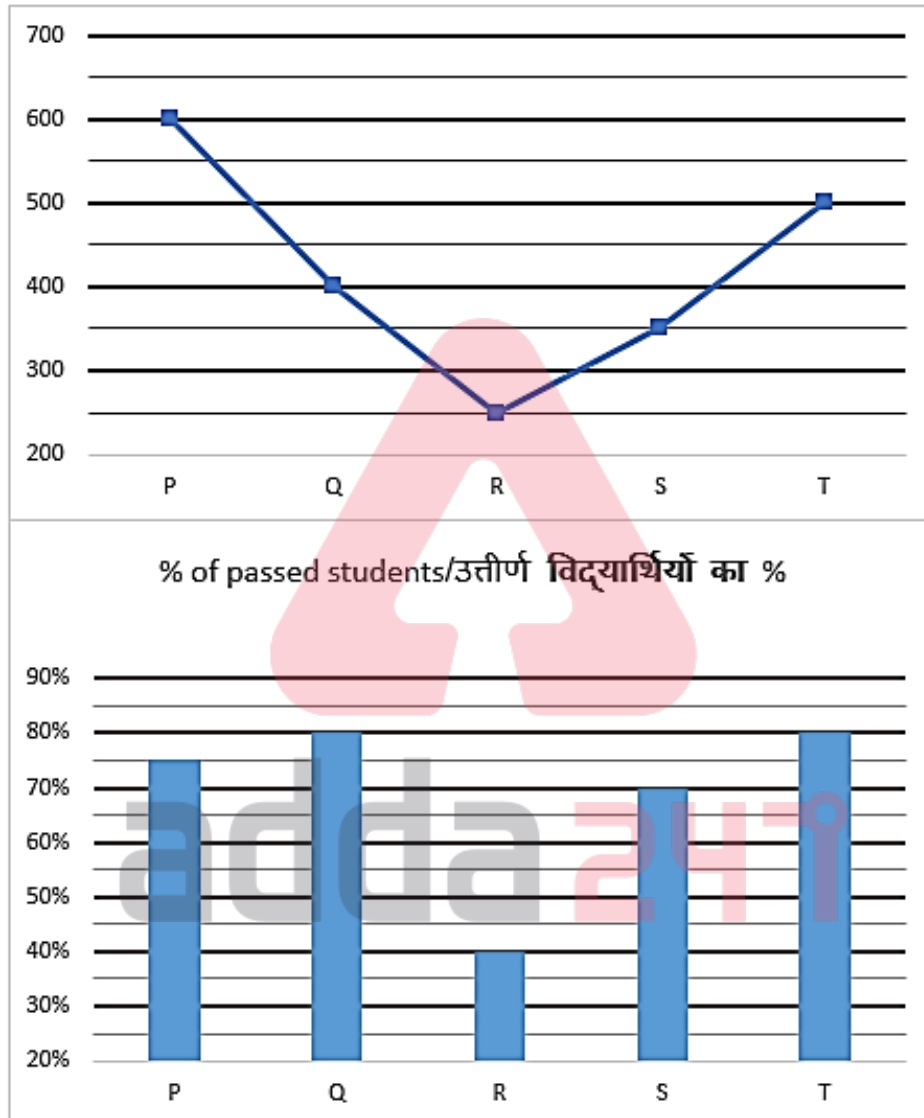
Q50. 22, 20, 24, 16, 32, 2, 64

- (a) 22
- (b) 2
- (c) 64
- (d) 20
- (e) 32



Directions (51-55): Line graph given below gives information about no. of students passed in yearly exam in five different colleges and bar graph shows percentage of students who passed in those colleges out of total students?

नीचे दिया गया लाइन ग्राफ पांच अलग-अलग कॉलेजों में वार्षिक परीक्षा में उत्तीर्ण विद्यार्थियों की संख्या के बारे में जानकारी देता है और बार ग्राफ कुल विद्यार्थियों में से उन कॉलेजों में उत्तीर्ण विद्यार्थियों का प्रतिशत दर्शाता है?



Q51. No. of students failed in college Q are what percent of total students in college P?

कॉलेज Q में अनुत्तीर्ण विद्यार्थियों की संख्या, कॉलेज P में कुल विद्यार्थियों का कितना प्रतिशत है?

- (a) 25%
- (b) 20%
- (c) 16.63%
- (d) 12.5%
- (e) 15%

Q52. What is ratio of total no. of students in College R to that of College T?

कॉलेज R में विद्यार्थियों की कुल संख्या का कॉलेज T में विद्यार्थियों की कुल संख्या से अनुपात क्या है?

- (a) 1:2
- (b) 2:1
- (c) 1:1
- (d) 1:3
- (e) 3:1

Q53. What is the difference between no. of students failed in College S and College T?

कॉलेज S और कॉलेज T में अनुत्तीर्ण विद्यार्थियों की संख्या के बीच का अंतर कितना है?

- (a) 50
- (b) 25
- (c) 20
- (d) 30
- (e) 15

Q54. What is the average of total no. of students in college P, Q, and S?

कॉलेज P, Q और S में विद्यार्थियों की कुल संख्या का औसत क्या है?

- (a) 600
- (b) 400
- (c) 350
- (d) 750
- (e) 500

Q55. No. of students passed in college P are how much percent more/less than total no. of students of College S?

कॉलेज P में उत्तीर्ण विद्यार्थियों की संख्या, कॉलेज S के विद्यार्थियों की कुल संख्या से कितने प्रतिशत अधिक/कम है?

- (a) 20% less
- (b) 25% more
- (c) 25% less
- (d) 16.67% less
- (e) 20% more

Directions (56-60): What approximate value should come in place of question mark (?) in the following questions?

निम्नलिखित प्रश्नों में प्रश्नचिन्ह (?) के स्थान पर लगभग क्या मान आना चाहिए?

Q56.

$$49.9\% \text{ of } 399.8 - ? \div \left(\frac{1}{1.91}\right) = \sqrt[3]{1727.99}$$

- (a) 94
- (b) 80
- (c) 126
- (d) 74
- (e) 88

Q57. $(7.99)^2 - \sqrt[3]{216.02} \div 3.99 \times 7.91 = \sqrt{?} \times 12.99$

- (a) 36
- (b) 25
- (c) 16
- (d) 49
- (e) 27

Q58. $(13.04)^2 - (1.01)^2 - 24.03 = ?^2$

- (a) 12
- (b) 15
- (c) 13
- (d) 9
- (e) 8

Q59.

$119.72 + 40.12 + 899.92 = \left(\frac{?}{2.97}\right) + 849.7$

- (a) 540
- (b) 320
- (c) 440
- (d) 630
- (e) 890

Q60.

$21.93\% \text{ of } 899 + (3.99)^2 + ? \div 6.02 = 3.002 \times 65.02 + (4.02)^2$

- (a) -6
- (b) 12
- (c) -18
- (d) -12
- (e) 6

Q61. A sum becomes 180% of itself at simple interest in 4 years. Find the compound interest on sum of Rs 1600 at same rate of interest after 2 years.

एक राशि साधारण ब्याज पर 4 वर्षों में स्वयं का 180 प्रतिशत हो जाती है। 1600 रुपये की राशि पर 2 वर्षों के बाद समान ब्याज दर पर चक्रवृद्धि ब्याज ज्ञात कीजिए।

- (a) Rs 608 / 608 रूपये
- (b) Rs 704 / 704 रूपये
- (c) Rs 756 / 756 रूपये
- (d) Rs 832 / 832 रूपये
- (e) Rs 669 / 669 रूपये



Q62. A person bought an old bicycle in Rs 5600. He expense Rs. P on repairing it. Find value of P, if he sold the bicycle in Rs 8400 and makes profit of 20%.

एक व्यक्ति ने 5600 रुपये में एक पुरानी साइकिल खरीदी। वह इसकी मरम्मत पर P रुपये खर्च करता है। P का मान ज्ञात कीजिए, यदि वह 8400 रुपये में साइकिल बेचता है और 20% का लाभ कमाता है।

- (a) Rs 1200 / 1200 रुपये
- (b) Rs 900 / 900 रुपये
- (c) Rs 1000 / 1000 रुपये
- (d) Rs 1400 / 1400 रुपये
- (e) Rs 450 / 450 रुपये

Q63. Present age of Virender is 25% more than present age of Jitender. 7 years ago, age of Jitender was 7 years more than half of age of Virender. Find the present age of Surender, if he is 4 years younger to Virender.

वीरेंद्र की वर्तमान आयु जितेंद्र की वर्तमान आयु से 25% अधिक है। 7 वर्ष पूर्व, जितेंद्र की आयु वीरेंद्र की आयु के आधे से 7 वर्ष अधिक थी। सुरेंद्र की वर्तमान आयु ज्ञात कीजिए, यदि वह वीरेंद्र से 4 वर्ष छोटा है।

- (a) 39 years / 39 वर्ष
- (b) 35 years / 35 वर्ष
- (c) 31 years / 31 वर्ष
- (d) 24 years / 24 वर्ष
- (e) 32 years / 32 वर्ष

Q64. Rohit invests twice the sum invested by Shikhar and withdraws half of sum after 8 months and again withdraws half of the remaining sum after next 8 months. Find Ratio of profit share of Rohit and Shikhar after 2 years?

रोहित, शिखर द्वारा निवेश की गई राशि का दोगुना निवेश करता है और 8 महीने के बाद आधी राशि निकाल लेता है और शेष राशि का आधा अगले 8 महीनों के बाद फिर से निकाल लेता है। 2 वर्ष बाद रोहित और शिखर के लाभ हिस्से का अनुपात ज्ञात कीजिये।

- (a) 3 : 4
- (b) 7 : 6
- (c) 4 : 3
- (d) 6 : 7
- (e) None of these / इनमें से कोई नहीं

Q65. Speed of a boat in upstream is 70% of speed of boat in downstream. If speed of current is 6 km/hr. Find time taken by boat in downstream to cover 440 km?

धारा के प्रतिकूल ने एक नाव की गति, धारा के अनुकूल में नाव की गति का 70% है। यदि धारा की गति 6 किमी/घंटा है। नाव द्वारा धारा के अनुकूल में 440 किमी की दूरी तय करने में लिया गया समय ज्ञात कीजिए।

- (a) 7 hr / 7 घंटे
- (b) 9 hr / 9 घंटे
- (c) 8 hr / 8 घंटे
- (d) 11 hr / 11 घंटे
- (e) 10 hr / 10 घंटे

Directions (66-70): Study the following information carefully and answer the questions given below.
निम्नलिखित जानकारी का ध्यानपूर्वक अध्ययन कीजिये और नीचे दिए गए प्रश्नों के उत्तर दीजिये।

Eight persons J, K, L, M, N, O, P and Q will have to attend the meeting in the August and September month. In each month, they will attend the meeting on different dates 1, 5, 15 and 17 of the given months.

J will attend the meeting on the 5th of September. Three persons will attend the meeting between J and P. More than two persons will attend the meeting between P and M. Two persons will attend the meeting between M and Q. Three persons will attend the meeting between Q and L. K will not attend the meeting immediately before or immediately after the dates on which Q attend the meeting. K will not attend the meeting on 15th September. Two persons will attend the meeting between N and O. N will attend the meeting in August month.

आठ व्यक्ति J, K, L, M, N, O, P और Q को अगस्त और सितंबर महीने में मीटिंग में भाग लेना है। प्रत्येक महीने में, वे दिए गए महीनों की विभिन्न तिथियों 1, 5, 15 और 17 को मीटिंग में भाग लेंगे।

J, 5 सितंबर को मीटिंग में भाग लेगा। J और P के बीच मीटिंग में तीन व्यक्ति भाग लेंगे। P और M के बीच मीटिंग में दो से अधिक व्यक्ति भाग लेंगे। M और Q के बीच दो व्यक्ति मीटिंग में भाग लेंगे। Q और L के बीच तीन व्यक्ति मीटिंग में भाग लेंगे। K, जिस तिथि को Q मीटिंग में भाग लेता है, उसके ठीक पहले या ठीक बाद की मीटिंग में उपस्थित नहीं होगा। K, 15 सितंबर को मीटिंग में शामिल नहीं होगा। N और O के बीच मीटिंग में दो व्यक्ति भाग लेंगे। N, अगस्त महीने में मीटिंग में भाग लेगा।

Q66. Who among the following will attend the meeting on 5th August?

निम्नलिखित में से कौन 5 अगस्त को मीटिंग में भाग लेगा?

- (a) L
- (b) P
- (c) O
- (d) J
- (e) M

Q67. How many persons will attend the meeting between P and O?

P और O के बीच मीटिंग में कितने व्यक्ति शामिल होंगे?

- (a) One/ एक
- (b) Three/ तीन
- (c) Five/ पांच
- (d) Two/ दो
- (e) Four / चार

Q68. Q will attend the meeting on which of the following day?

Q निम्नलिखित में से किस दिन मीटिंग में भाग लेगा?

- (a) 5th August/5 अगस्त
- (b) 1st August/1 अगस्त
- (c) 17th August/ 17 अगस्त
- (d) 17th September/17 सितम्बर
- (e) None of these/ इनमें से कोई नहीं

Q69. If L is related to K and Q is related to O then in the same way N is related to?

यदि L, K से संबंधित है और Q, O से संबंधित है तो उसी प्रकार N किससे संबंधित है?

- (a) L
- (b) P
- (c) O
- (d) J
- (e) M

Q70. Who among the following will attend the meeting on 1st August?

निम्नलिखित में से कौन 1 अगस्त को मीटिंग में भाग लेगा?

- (a) L
- (b) P
- (c) O
- (d) N
- (e) M

Directions (71-73): In these questions, relationship between different elements is show in the statements. The statements are followed by conclusions. Study the conclusions based on the given statements and select the appropriate answer:

इन प्रश्नों में, कथनों में विभिन्न तत्वों के बीच संबंध दिखाया गया है। कथनों के बाद निष्कर्ष दिए गये हैं। दिए गए कथनों के आधार पर निष्कर्षों का अध्ययन करें और उचित उत्तर का चयन करें:

Q71.

Statements / कथन:

$$N = P \leq F \geq L = K > Y$$

Conclusion/ निष्कर्ष:

I. $F = K$

II. $F > K$

(a) If only conclusion I follows.

यदि केवल निष्कर्ष I अनुसरण करता है।

(b) If only conclusion II follows.

यदि केवल निष्कर्ष II अनुसरण करता है।

(c) If either conclusion I or II follows

यदि या तो निष्कर्ष I या II अनुसरण करता है

(d) If neither conclusion I nor II follows.

यदि न तो निष्कर्ष I और न ही II अनुसरण करता है।

(e) If both conclusions I and II follow.

यदि निष्कर्ष I और II दोनों अनुसरण करते हैं।

Q72.

Statements / कथन:

$$D > C \geq G \geq Q = Z \geq R$$

Conclusion/ निष्कर्ष:

I. $G \geq Z$

II. $C \geq R$

(a) If only conclusion I follows.

यदि केवल निष्कर्ष I अनुसरण करता है।

(b) If only conclusion II follows.

यदि केवल निष्कर्ष II अनुसरण करता है।

(c) If either conclusion I or II follows

यदि या तो निष्कर्ष I या II अनुसरण करता है

(d) If neither conclusion I nor II follows.

यदि न तो निष्कर्ष I और न ही II अनुसरण करता है।

(e) If both conclusions I and II follow.

यदि निष्कर्ष I और II दोनों अनुसरण करते हैं।

Q73.

Statements / कथन:

$$L > K > M \geq N > O < P$$

Conclusion/ निष्कर्ष:

I. $P > M$

II. $M \leq P$

(a) If only conclusion I follows.

यदि केवल निष्कर्ष I अनुसरण करता है।

(b) If only conclusion II follows.

यदि केवल निष्कर्ष II अनुसरण करता है।

(c) If either conclusion I or II follows

यदि या तो निष्कर्ष I या II अनुसरण करता है

(d) If neither conclusion I nor II follows.

यदि न तो निष्कर्ष I और न ही II अनुसरण करता है।

(e) If both conclusions I and II follow.

यदि निष्कर्ष I और II दोनों अनुसरण करते हैं।

Q74. In a class, there are 43 students. Rajan's rank is 17th from top and Sahil is 4th rank below from Rajan. Sahil rank is at exactly between Rajan and Sneha. Then what is the Sneha's rank from the bottom?

एक कक्षा में 43 विद्यार्थी हैं। राजन की रैंक ऊपर से 17वां और साहिल राजन से 4 रैंक नीचे है। साहिल की रैंक राजन और स्नेहा के ठीक बीच में है तो नीचे से स्नेहा की रैंक क्या है?

(a) 17

(b) 18

(c) 16

(d) 19

(e) 21



adda247

Q75. Jyoti ranked 18th from the top and 24th from the bottom in a class. How many students are there in the class?

ज्योति एक कक्षा में ऊपर से 18वें और नीचे से 24वें स्थान पर है। कक्षा में कितने छात्र हैं?

- (a) 42
- (b) 43
- (c) 41
- (d) 39
- (e) 40

Directions (76-80): Study the following information carefully and answer the given questions.

निम्नलिखित जानकारी का ध्यानपूर्वक अध्ययन कीजिये और दिए गए प्रश्नों के उत्तर दीजिये।

Twelve persons are sitting in two parallel rows at an equal distance facing each other. A, B, C, D, E and F are sitting in Row 1 facing south. P, Q, R, S, T and U are sitting in Row 2 facing north (but not necessarily in the same order).

U sits third to the right of P and one of them sits at the end of the row. A sits at the right end of the row. Three persons sit between A and D. T sits to the immediate left of U. Two persons sit between T and Q. Q who faces B and sits to the immediate right of S. C faces R. E sits to the immediate left of C.

बारह व्यक्ति दो समानांतर पंक्तियों में समान दूरी पर एक-दूसरे की ओर उन्मुख होकर बैठे हैं। A, B, C, D, E और F पंक्ति 1 में दक्षिण की ओर उन्मुख होकर बैठे हैं। P, Q, R, S, T और U पंक्ति 2 में उत्तर की ओर उन्मुख होकर बैठे हैं (लेकिन जरूरी नहीं कि इसी क्रम में हों)।

U, P के दायें से तीसरे स्थान पर बैठा है और उनमें से एक पंक्ति के अंत में बैठा है। A पंक्ति के दायें छोर पर बैठा है। A और D के बीच तीन व्यक्ति बैठे हैं। T, U के ठीक बायें बैठा है। T और Q के बीच दो व्यक्ति बैठे हैं। Q जो B की ओर उन्मुख है और S के ठीक दायें बैठा है। C, R की ओर उन्मुख है। E, C के ठीक बायें बैठा है।

Q76. Which of the following pair sits at the extreme ends of Row 2?

निम्नलिखित में से कौन सा युग्म पंक्ति 2 के अंतिम छोर पर बैठा है?

- (a) P & S / P और S
- (b) U & S / U और S
- (c) P & Q / P और Q
- (d) U & Q / U और Q
- (e) None of these / इनमें से कोई नहीं

Q77. Who sits second to the left of the person who is facing F?

F की ओर उन्मुख व्यक्ति के बायें से दूसरे स्थान पर कौन बैठा है?

- (a) P
- (b) R
- (c) T
- (d) Q
- (e) U

Q78. What is the position of E with respect to B?

B के सन्दर्भ में E का स्थान क्या है?

- (a) 3rd to the left/ बायें से तीसरा
- (b) 2nd to the left/ बायें से दूसरा
- (c) 2nd to the right/ दायें से दूसरा
- (d) 3rd to the right/ दायें से तीसरा
- (e) None of these/ इनमें से कोई नहीं

Q79. Who is facing T?

T की ओर कौन उन्मुख है?

- (a) D
- (b) E
- (c) A
- (d) C
- (e) None of these/ इनमें से कोई नहीं

Q80. If the positions of all persons who sitting in Row-2 are arranged as per the English alphabetical order from left to right, then who among the following faces R?

यदि पंक्ति-2 में बैठे सभी व्यक्तियों के स्थान को अंग्रेजी वर्णमाला के क्रम में बायें से दायें व्यवस्थित किया जाता है, तो निम्नलिखित में से कौन R की ओर उन्मुख है?

- (a) A
- (b) B
- (c) C
- (d) D
- (e) None of these/ इनमें से कोई नहीं

Directions (81-84): Study the following information carefully and answer the questions given below.

निम्नलिखित जानकारी का ध्यानपूर्वक अध्ययन करें और नीचे दिए गए प्रश्नों के उत्तर दें।

In a certain code:

एक निश्चित कोड में:

'Student online classes' is written as 'ru ri be',

'Exam postponed schemed' is written as 'ta no pa',

'Cancelled complete classes postponed' is written as 'do ri pa pi'

'Exam complete student online' is written as 'ru be do no'.

'Student online classes' को 'ru ri be' लिखा जाता है

'Exam postponed schemed' को 'ta no pa' लिखा जाता है

'Cancelled complete classes postponed' को 'do ri pa pi' लिखा जाता है

'Exam complete student online' को 'ru be do no' लिखा जाता है

Q81. What is the code for 'online'?

'online' के लिए कूट क्या है?

- (a) ri
- (b) be
- (c) ru
- (d) do
- (e) Can't be determined

निर्धारित नहीं किया जा सकता

Q82. What does 'ru' stand for?

'ru' का क्या अर्थ है?

- (a) Student
- (b) Either (A) or (D)/ या तो (A) या (D)
- (c) Classes
- (d) Online
- (e) None of these/ इनमें से कोई नहीं

Q83. Which of the following is the code for 'Exam Postponed schemed Student Classes'?

निम्नलिखित में से कौन सा कूट 'Exam Postponed schemed Student Classes' के लिए है?

- (a) no pa ri ta do
- (b) ta ri pa no be
- (c) ta no ru ri pa
- (d) Either (B) or (C)/ या तो (B) या (C)
- (e) None of these/ इनमें से कोई नहीं

Q84. Which of the following code stands for 'Postponed'?

निम्नलिखित में से कौन सा कूट 'Postponed' के लिए है?

- (a) ri
- (b) no
- (c) pa
- (d) do
- (e) None of these/ इनमें से कोई नहीं

Directions (85-87): Study the following information carefully and answer the questions given below.

निम्नलिखित जानकारी का ध्यानपूर्वक अध्ययन कीजिये और नीचे दिए गए प्रश्नों के उत्तर दीजिये।

Suresh leaves his house and starts walking in the north direction. After 10m he turns left. Then he walks for 5m and turns to his right. He walks for 4m and then takes three consecutive left turns and walked 9m, 14m and 10m respectively. Finally, he stops at point T.

सुरेश अपने घर से निकलता है और उत्तर दिशा की ओर चलना शुरू करता है। 10 मी के बाद, वह बायें मुड़ता है। फिर वह 5मी चलता है और अपने दायें ओर मुड़ता है। वह 4 मीटर चलता है और फिर तीन लगातार बायें मोड़ लेता है और क्रमशः 9 मीटर, 14 मीटर और 10 मीटर चलता है। अंत में, वह बिंदु T पर रुकता है।

Q85. How far is Suresh from his starting point?

सुरेश अपने आरंभिक बिंदु से कितनी दूर है?

- (a) 5m/5 मी
- (b) 9m/9 मी
- (c) 4m/4 मी
- (d) 14m/14 मी
- (e) None of these/ इनमें से कोई नहीं

Q86. In which direction is point T with respect to the starting point?

प्रारंभिक बिंदु के सन्दर्भ में बिंदु T किस दिशा में है?

- (a) West/ पश्चिम
- (b) South-East/ दक्षिण-पूर्व
- (c) South/ दक्षिण
- (d) North-West/ उत्तर-पश्चिम
- (e) None of these/ इनमें से कोई नहीं

Q87. If Suresh goes 5m south from point T then, what is the direction of Suresh initial position with respect to his current position?

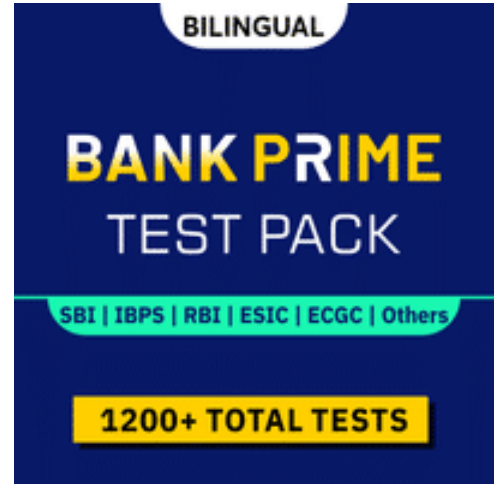
यदि सुरेश बिंदु T से 5मी दक्षिण की ओर जाता है, तो उसके वर्तमान स्थान के संदर्भ में सुरेश के प्रारंभिक स्थान की दिशा क्या है?

- (a) West/ पश्चिम
- (b) South-East/ दक्षिण-पूर्व
- (c) South/ दक्षिण
- (d) North-West/ उत्तर-पश्चिम
- (e) None of these/ इनमें से कोई नहीं

Q88. If in the number 78364925, 1 is added to each of the even digits and 1 is subtracted in each odd digits, then all digits are arranged in ascending order from left to right. Then which of the following digit is 5th from the right end?

यदि संख्या 78364925 में, प्रत्येक सम अंक में 1 जोड़ा जाता है और प्रत्येक विषम अंक से 1 घटाया जाता है, तो सभी अंकों को बाएं से दाएं आरोही क्रम में व्यवस्थित किया जाता है तो निम्नलिखित में से कौन सा अंक दायें छोर से 5वां है?

- (a) 3
- (b) 7
- (c) 6
- (d) 5
- (e) 8



Directions (89-93): Study the following information carefully and answer the questions given below:
निम्नलिखित जानकारी का ध्यानपूर्वक अध्ययन कीजिये और नीचे दिए गए प्रश्नों के उत्तर दीजिये:

Eight boxes P, Q, R, S, T, U, V and W are kept one above the other but not necessarily in the same order. Box V is kept just below box R and just above box W. Only four boxes are kept above box U. One box is kept between box U and box Q. Box P is kept below box S and above box T. Box T is kept above box R.

आठ बॉक्स P, Q, R, S, T, U, V और W को एक के ऊपर एक रखा गया है लेकिन जरूरी नहीं कि इसी क्रम में हो। बॉक्स V, बॉक्स R के ठीक नीचे और बॉक्स W के ठीक ऊपर रखा गया है। बॉक्स U के ऊपर केवल चार बॉक्स रखे गए हैं। बॉक्स U और बॉक्स Q के बीच एक बॉक्स रखा गया है। बॉक्स P, बॉक्स S के नीचे रखा गया है और बॉक्स T के ऊपर रखा गया है। बॉक्स T, बॉक्स R के ऊपर रखा गया है।

Q89. How many boxes are kept above box T?

बॉक्स T के ऊपर कितने बॉक्स रखे हैं?

- (a) Two / दो
- (b) Three/ तीन
- (c) Four/ चार
- (d) More than five/ पांच से अधिक
- (e) One/ एक

Q90. Which of the following statement is true regarding box R?

बॉक्स R के संबंध में निम्नलिखित में से कौन सा कथन सत्य है?

- (a) Less than two boxes are kept below R/ दो से कम बॉक्स, R के नीचे रखे गए हैं
- (b) U is kept below R/ U को R के नीचे रखा गया है
- (c) More than five boxes are kept between R and S/ R और S के बीच पांच से अधिक बॉक्स रखे गए हैं
- (d) Only one box is kept between R and T/ R और T के बीच केवल एक बॉक्स रखा गया है
- (e) None is true/ इनमें से कोई नहीं

Q91. Which of the following box is kept at the topmost position?/ निम्नलिखित में से कौन सा बॉक्स सबसे ऊपर रखा गया है?

- (a) P
- (b) Q
- (c) S
- (d) R
- (e) T

Q92. Which of the following statement/statements is/are false regarding box P?

बॉक्स P के संबंध में निम्नलिखित में से कौन सा कथन असत्य है/हैं?

- (a) Box P is kept immediately below box S/ बॉक्स P, बॉक्स S के ठीक नीचे रखा गया है
- (b) Only one box is kept between Box U and P/ बॉक्स U और P के बीच केवल एक बॉक्स रखा गया है
- (c) Box Q is kept immediately below Box P/ बॉक्स Q, बॉक्स P के ठीक नीचे रखा गया है
- (d) More than two boxes are kept between Box P and R/ बॉक्स P और R के बीच दो से अधिक बॉक्स रखे गए हैं
- (e) Both (A) and (B)/दोनों (A) और (B)

Q93. Four of the following five are alike in a certain way and hence form a group, which of the following does not belong to the group?

निम्नलिखित पांच में से चार एक निश्चित प्रकार से समान हैं और इसलिए एक समूह बनाते हैं, निम्नलिखित में से कौन सा एक उस समूह से संबंधित नहीं है?

- (a) V-W
- (b) R-U
- (c) Q-T
- (d) S-P
- (e) R-V

Directions (94-98): These questions are based on the following letter/number/symbol arrangement. Study it carefully and answer the questions.

ये प्रश्न निम्नलिखित अक्षर/संख्या/प्रतीक व्यवस्था पर आधारित हैं। इसका ध्यानपूर्वक अध्ययन करें और प्रश्नों के उत्तर दें।

1 % K \$ E J B € * 2 H O @ L 6 Q 9 M T U F 7 D 5 # A © 8 W

Q94. How many such symbols are there in the above arrangement each of which is immediately preceded by a vowel and also immediately followed by a number?

उपरोक्त व्यवस्था में ऐसे कितने प्रतीक हैं जिनमें से प्रत्येक के ठीक पहले एक स्वर है और ठीक बाद एक संख्या भी है?

- (a) None / कोई नहीं
- (b) One / एक
- (c) Two / दो
- (d) Three / तीन
- (e) Four / चार

Q95. How many such numbers are there in the above arrangement each of which is immediately preceded by a symbol and also immediately followed by a letter?

उपरोक्त व्यवस्था में ऐसी कितनी संख्याएँ हैं जिनमें से प्रत्येक के ठीक पहले एक प्रतीक है और ठीक बाद एक अक्षर भी है?

- (a) None / कोई नहीं
- (b) One / एक
- (c) Two / दो
- (d) Three / तीन
- (e) Four / चार

Q96. Which of the following element is 8th from the right of the element which is 13th from the left end?

निम्नलिखित में से कौन सा तत्व उस तत्व के दायें से आठवां है जो बाएं छोर से 13वां है?

- (a) F
- (b) 7
- (c) D
- (d) 5
- (e) None of these/ इनमें से कोई नहीं

Q97. Which of the following element is 9th to the right of the element which is 20th from the right end?
निम्नलिखित में से कौन सा तत्व उस तत्व के दायें से 9वां है जो दायें छोर से 20वां है?

- (a) F
- (b) 9
- (c) D
- (d) T
- (e) None of these/ इनमें से कोई नहीं

Q98. How many such letters are there in the above arrangement each of which is immediately preceded and immediately followed by a symbol?

उपरोक्त व्यवस्था में ऐसे कितने अक्षर हैं जिनमें से प्रत्येक के ठीक पहले और ठीक बाद में एक प्रतीक है?

- (a) One / एक
- (b) Three / तीन
- (c) None / कोई नहीं
- (d) Two / दो
- (e) Four / चार

Directions (99-100): Study the following information carefully and answer the questions given below:

निम्नलिखित जानकारी का ध्यानपूर्वक अध्ययन करें और नीचे दिए गए प्रश्नों के उत्तर दें:

There are six members in a family. F and C are not females. B is the son of C. A and C are a married couple and they have more than two children. E is the brother of C. D is the only daughter of A.

एक परिवार में छह सदस्य हैं। F और C महिला नहीं हैं। B, C का पुत्र है। A और C एक विवाहित युगल हैं और उनकी दो से अधिक सन्तान हैं। E, C का भाई है। D, A की इकलौती पुत्री है।

Q99. How many male members are there in the family?

परिवार में कितने पुरुष सदस्य हैं

- (a) One / एक
- (b) Two / दो
- (c) Three / तीन
- (d) Four / चार
- (e) None of these / इनमें से कोई नहीं

Q100. Who is the mother of B?

B की माता कौन है?

- (a) D
- (b) F
- (c) E
- (d) A
- (e) None of these/ इनमें से कोई नहीं

