

All India Maha Mock: FCI AGM 15th May 2021

Directions (1-5): Study the following information carefully to answer the given questions.

Ten persons of a same family i.e. P, Q, R, S, T, U, V, W, X and Y are sitting around a rectangular table in such a way that three of them are sitting at each of the longer side of the table and faces towards the centre and two of them are sitting on each of the shorter side of the table and faces away from the centre. All the information is not necessarily in the same order.

P who is father of R sits third to the right of Q's daughter-in-law. W sits at the immediate left of Q's father-in-law who is married with V. P is the only child of V who sits opposite to the one who sits at the immediate left of R's wife. X is son of U who is a female member. S is paternal aunt of X and sits second to the right of Q's only sibling. W sits only with Y who is child of U. Y is not nephew of S. R has more than one child. W is not married and sits opposite to R. R's spouse sits on the same side with R. P's wife sits at the immediate left of Y sibling.

Q1. How T is related to the one who is sitting second to the left of Q?

- (a) Sister
- (b) Brother
- (c) Father
- (d) Grand father
- (e) Grand mother

Q2. Four of the following are alike in a certain way so form a group, which of the following does not belong to that group?

- (a) R
- (b) X
- (c) U
- (d) P
- (e) T

Q3. How many persons are sitting between S and V when counted from the right of V?

- (a) One
- (b) Two
- (c) Five
- (d) Three
- (e) Four

Q4. Which of the following statement is not true?

- (a) S, X and Q sits together on the same side of the table
- (b) Q sits opposite to P
- (c) Q sits at the immediate left of X.
- (d) T is father in law of Q
- (e) S sits opposite to T

NRA-CET Ready

**BANK
MAHA PACK**

Live Class, Video Course,
Test Series, eBooks

Bilingual (with eBooks)

12+12 Months Validity

Q5. How many female members are there in the family?

- (a) Can't be determined
- (b) Six
- (c) Seven
- (d) Five
- (e) Four

Directions (6-10): Study the following information carefully to answer the given questions:

A word and number arrangement machine when given an input line of words and numbers rearranges them following a particular rule. The following is an illustration of input and rearrangement.

Input: CURIOS SPIRAL VARIOUS CALCULATIVE AWARENESS

Step I: VaRiouS SPiRaL CuRiouS CaLCuLaTiVe aWaReNeSS

Step II: 34 42 34 65 45

Step III: 23 31 23 54 34

Step IV: 05 04 05 09 07

Step V: 04 05 05 07 09

Step V is the last step of the rearrangement. As per the rules followed in the above steps, find out in each of the following questions the appropriate steps for the given input.

Input: FLOATING PROPERTY INVASION MASSIVE AUTHORITY

Q6. What is the difference between the third element from the right end in step III and the fifth element from the left end in step IV?

- (a) 36
- (b) 26
- (c) 27
- (d) 24
- (e) None of these

Q7. What is the position of '05' in the penultimate step of the given input?

- (a) At the extreme left end
- (b) Fifth from the left end
- (c) Second from the right end
- (d) Second from the left end
- (e) None of these

Q8. In which of the following step '43 44 53 45' is given in the same order?

- (a) Step II
- (b) Step III
- (c) Step IV
- (d) There is no such step
- (e) Step I

Q9. What is the product of numbers which are second from the right end in step V and third from the left end in step III?

- (a) 187
- (b) 188
- (c) 198
- (d) 191
- (e) 190

Q10. How many letters (according to the English alphabetical series) are there in between the second letter of the third word from the left end and first letter of the third word from the right end in step I?

- (a) 9
- (b) 7
- (c) 8
- (d) 5
- (e) 4

Directions (11-13): Study the following information carefully and answer the questions given below.

A@B (6)- A is 10m in north of B

A\$B (10)- A is 14m in south of B

A%B (12)- A is 10m in east of B

A&B (15)- A is 13m in west of B

P%Q(16), R&S(12), T&U(20), U\$S(15), P@T(10), W\$R(17)

Q11. What is the shortest distance between point P and point U?

- (a) $2\sqrt{130}$ m
- (b) 520m
- (c) 130m
- (d) 260m
- (e) None of these

Q12. If M is the mid point of the line segment TU, then determine the distance between the point T and point M?

- (a) 9m
- (b) 10m
- (c) 8m
- (d) None of these
- (e) 7m

Q13. What is the shortest distance between the point U and point W?

- (a) 85m
- (b) 120m
- (c) None of these
- (d) $\sqrt{104}$ m
- (e) $\sqrt{130}$ m

Directions (14-16): Study the following information carefully to answer the given questions.

Seven plants are planted across the road at a particular distance in a row such that the distance between each of the two plants is a multiple of nine (successive multiple is taken). All the information is not necessarily in the same order.

The distance between the P2 and P6 is 135m. Not more than two plants are planted to the right of P6. P6 is planted to the right of P4. The distance between P1 and P4 is 45m. Only two plants are planted between P5 and P4. P4 is planted to the right of P2. The distance between the P6 and P7 is same as that of P2 and P6. P7 is planted just next to the P3.

Q14. How many plants are planted between P7 and P2?

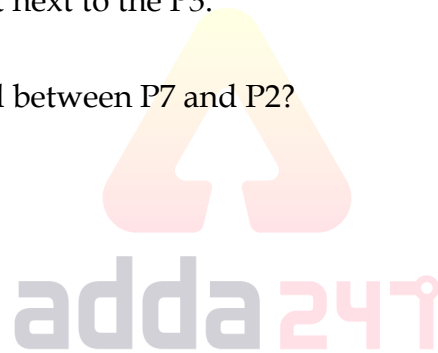
- (a) Four
- (b) Two
- (c) Three
- (d) Five
- (e) None of these

Q15. What is the total distance between the plants P1 and P5?

- (a) 62m
- (b) 65m
- (c) 64m
- (d) 63m
- (e) None of these

Q16. What is the distance between the plants P5 and P2?

- (a) 18m
- (b) 36m
- (c) 27m
- (d) 72m
- (e) None of these



Directions (17-20): In each of the questions below consists of a question and two statements numbered I and II given below it. You have to decide whether the data provided in the statements are sufficient to answer the question. Read both the statements and Give answer-

- (a) If the data in statement I alone are sufficient to answer the question, while the data in statement II alone are not sufficient to answer the question
- (b) If the data in statement II alone are sufficient to answer the question, while the data in statement I alone are not sufficient to answer the question
- (c) If the data either in statement I alone or in statement II alone are sufficient to answer the question
- (d) If the data given in both statements I and II together are not sufficient to answer the question and
- (e) If the data in both statements I and II together are necessary to answer the question.

Q17. Seven boxes i.e. A, B, C, D, E, F and G are placed one above the another but not necessarily in the same order. Which of the following box is placed just above the Box B?

Statements:

- I. One box is placed between box G and box D. Box D is placed below the box B.
- II. No box is placed between box D and box B. Only two boxes are placed above the box G.

Q18. Seven people P, Q, R, S, T, U and V live on the 7-floor building such that ground floor is numbered as 1st floor, just above floor is numbered as 2nd floor and so on until the topmost floor is numbered as 7th floor but not necessarily in the same order. Who among the following lives on the 3rd floor?

Statements:

- I. More than three floors gap between T and S's floors. Only one person lives between V and Q, who lives below the V's floor.
- II. The number of persons lives below R is same as the number of persons live above U. T lives just below R's floor. S lives just below Q and lives on an even numbered floor below the 6th floor. One person lives between U and Q.

Q19. Seven persons i.e. A, B, C, D, E, F and G are sitting around a circular table and facing towards the center but not necessarily in the same order. Who among the following sits 2nd to the left of D?

Statements :

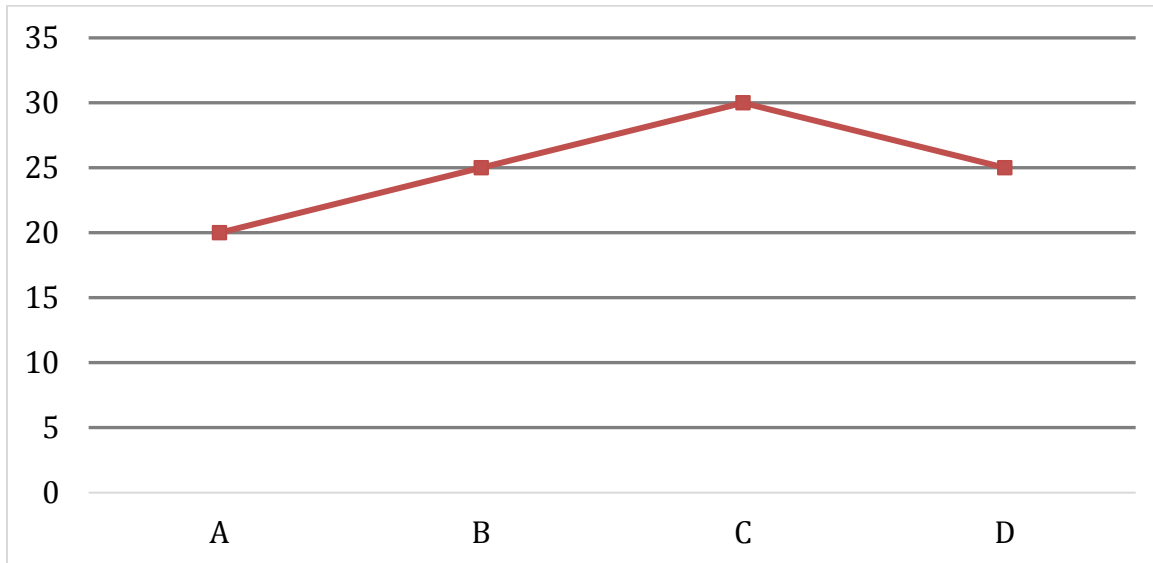
- I. A sits 2nd to the left of C. Two persons sit between A and B. The number of persons sit between A and D is same as the number of persons sit between A and E. Two persons sit between B and D when counted to the right of D.
- II. Only one person sits between E and D. B sits near to D. A sits to the immediate left of B.

Q20. What is the code for the word "Parrot"?

Statements: In a certain code language:

- I. "Certain rail prison" is coded as "dk mn ns" and "rail track drive" is coded as "dk pv sl".
- II. "Parrot prison track" is coded as "ns mr sl" and "certain prison" is coded as "ns mn"

Direction (21 - 25): Line graph shows marked up percentage of four articles above cost price and table shows marked price of these four articles. Read the data carefully and answer the questions.



Articles	Marked price (in Rs.)
A	720
B	500
C	1040
D	1500

Q21. If discounts allowed on A & D is $11\frac{1}{9}\%$ and $6\frac{2}{3}\%$ respectively, then find ratio of profit of A and D?

- (a) 1 : 4
- (b) 1 : 5
- (c) 2 : 5
- (d) 1 : 6
- (e) 3 : 5

Q22. If cost price of article 'E' is 50% more than that of B, then find at what price article 'E' should sale to make a profit of $16\frac{2}{3}\%$?

- (a) 700 Rs.
- (b) 1400 Rs.
- (c) 800 Rs.
- (d) 750 Rs.
- (e) None of these

Q23. If discount (in %) given on article B & D is in the ratio of 1 : 3 and ratio of profit on article B & loss on article D is same (in Rs) , then find discount allowed on article D?

- (a) 18%
- (b) 12%
- (c) 30%
- (d) 15 %
- (e) 24%

Q24. Cost price of A is what percent less than average cost price of B, C & D ?

- (a) 12%
- (b) 10%
- (c) 15%
- (d) 25%
- (e) 20%

Q25. Discount allowed on article C is 15% and selling price of article 'X' is Rs. 316 more than that of C. If profit made on 'X' is 20%, then find difference between cost price of D & X?

- (a) 300 Rs.
- (b) 600 Rs.
- (c) 400 Rs.
- (d) 200 Rs.
- (e) 100 Rs.



Direction (26-30). Following are the questions based on two statements and answer the following based on the given statements.

Q26. What will be respective ratio of saving of Veer & Deepak.

Statement:

I. Income of Veer is 4% less than that of Sameer and also expenditure of Veer is 12.5% less than that of Sameer. Deepak spend $\frac{3}{5}$ th of his income.

II. Sameer save Rs. 7000 & Veer save Rs. 7400. Income of Deepak is Rs. 1000 more than that of Sameer.

- (a) Only statement I is sufficient
- (b) Only statement II is sufficient
- (c) Statement I and II both together is sufficient
- (d) Either statement I or Statement II alone is sufficient
- (e) Neither statement I nor statement II is sufficient

Q27. What will be cost price of article, which marked 40% above.

Statement:

I. If article sold 25% discount profit will be Rs. 50.

II. If article sold two successive discounts of $14\frac{2}{7}\%$ and 10% profit will be Rs. 80.

- (a) Only statement I is sufficient
- (b) Either statement I or Statement II alone is sufficient
- (c) Statement I and II both together is sufficient
- (d) Only statement II is sufficient
- (e) Neither statement I nor statement II is sufficient

Q28. A bag contains total 12 balls in which there are 5 green balls and rest are blue and red balls. What is difference between blue & red balls.

Statement:

I. If one ball taken out from bag probability of being either red or blue is $\frac{7}{12}$.

II. If two balls taken out from bag probability of being either red or blue is $\frac{1}{6}$.

- (a) Only statement II is sufficient
- (b) Either statement I or Statement II alone is sufficient
- (c) Statement I and II both together is sufficient
- (d) Only statement I is sufficient
- (e) Neither statement I nor statement II is sufficient

Q29. Side of square is 3.5 cm more than radius of circle. What will be area of square?

Statement:

I. Difference between circumference and diameter of circle is 45 cm.

II. Radius of circle is 50% more than breadth of rectangle whose length is 15 cm. Ratio of circumference of circle & perimeter of rectangle is 3 : 2.

- (a) Only statement II is sufficient
- (b) Either statement I or Statement II alone is sufficient
- (c) Statement I and II both together is sufficient
- (d) Only statement I is sufficient
- (e) Neither statement I nor statement II is sufficient

Q30. What will be length of train A?

Statement:

I. Relative speed of train A & B is 10 meters/sec when both running in same direction and length of train B is 240 (Speed of train B is more than speed of train A).

II. Train B cross a pole in 8 sec and cross train A in 12 sec running in opposite direction.

- (a) Only statement II is sufficient
- (b) Either statement I or Statement II alone is sufficient
- (c) Neither statement I nor statement II is sufficient
- (d) Only statement I is sufficient
- (e) Statement I and II both together is sufficient

Q31. X is 40% more efficient than Y and Z takes $33\frac{1}{3}\%$ less time than X to complete a work. If all three together can complete a work in $6\frac{2}{9}$ days, then find X & Z can complete the two times of work in how many days?

- (a) 8 days
- (b) 16 days
- (c) 18 days
- (d) 32 days
- (e) 24 days

Q32. Relative speed of two trains A & B is $\frac{10}{3}$ m/s while running in same direction and ratio of speed of A to that of B is 6 : 7. If both train cross each other while running in opposite direction in $\frac{120}{13}$ sec and train A can cross a platform (length of platform is twice of length of train A) in 24 sec, then find length of train B?

- (a) 240 meters
- (b) 210 meters
- (c) 180 meters
- (d) 300 meters
- (e) 150 meters

Q33. A, B & C starts a newspaper distribution business with total capital of 2400 Rs. and ratio of investment of A to that of C is 4 : 3. If A & B withdrew their respective capital after 15 months & 18 months respectively and after two years profit sharing ratio of A, B & C is 10 : 15 : 12, then find difference between investment of B & C?

- (a) 600 Rs.
- (b) 480 Rs.
- (c) 440 Rs.
- (d) 360 Rs.
- (e) 400 Rs.

Q34. In a River there are two boats A and B, where boat A covers 240 km in downstream and boat B covers 240 km in upstream. Boat B takes equal time as boat A takes in covering the given distance. If sum of speed of boat A in still water and boat B in still water is 64 km/hr and speed of water current is 4 km/hr then find the speed of boat B in still water?

- (a) 32 km/hr
- (b) 36 km/hr
- (c) 40 km/hr
- (d) 42 km/hr
- (e) 48 km/hr

TEST SERIES
Bilingual
SBI CLERK 2021
PRIME
100+ TOTAL TESTS

Q35. Ram's age is $(3x+2y)$ years and his only son's age is 'x' years while his only daughter's age is 'y' years. Ram's son is 3 years elder than her sister. Find average age of family of Ram, if Ram's wife age who is 5 years younger than her husband is 29 years (in years).

- (a) 14.5
- (b) 19.0
- (c) 16.5
- (d) 22.5
- (e) 20.5

Q36. Glass 'A' contains 400 ml sprite & glass 'B' contains 220 ml coke. $4X$ ml sprite taken out from 'A' and mixed in 'B' and then $3X$ ml mixture from 'B' taken out and poured into a vacant glass 'C'. If ratio of coke to sprite in glass C is 11 : 4, then find remaining quantity of sprite in glass 'B'?

- (a) 240 ml
- (b) 60 ml
- (c) 64 ml
- (d) 80 ml
- (e) 48 ml

Q37. Diameter of a cylinder is $\frac{2}{3}$ rd of sum of its radius & height, while ratio of curved surface area to volume of cylinder is 1 : 7. If radius and height of a cone is same as that of cylinder, then find slant height of cone?

- (a) $21\sqrt{5}$ cm
- (b) $10\sqrt{5}$ cm
- (c) $7\sqrt{5}$ cm
- (d) $14\sqrt{5}$ cm
- (e) $16\sqrt{5}$ cm

Q38. A, B & C invested their respective savings in a scheme, which offered CI at 20% p.a. for two years and received total interest of Rs. 1694. If A & C invested double of their respective saving in another scheme, which offered SI at 10% p.a. for two years and received total interest of Rs. 1100, then find difference between saving of A & C together & saving of B?

- (a) 1250 Rs.
- (b) 1650 Rs.
- (c) 1150 Rs.
- (d) 1050 Rs.
- (e) 750 Rs.

Q39. Cost price of a jeans is Rs. 200 more than cost price of a shirt. If shirt is sold at 20% loss and jeans is sold at 25% profit, then shopkeeper gets a total profit of $5\frac{5}{7}\%$ on selling a shirt and a jeans. Find the overall profit or loss (in %) of shopkeeper, if shirt is sold at 25% profit and jeans is sold at 20% loss?

- (a) $\frac{5}{7}\%$
- (b) $\frac{4}{7}\%$
- (c) $\frac{3}{7}\%$
- (d) $\frac{2}{7}\%$
- (e) $\frac{6}{7}\%$

Q40. A bag contains 12 balls (Red & blue). Two balls are taken out randomly from the bag and probability of one ball being red and one ball being blue is $\frac{35}{66}$. If 'n' blue balls added in bag and then two balls are taken out randomly from bag, then minimum probability of remaining blue balls in bag is $\frac{9}{14}$, find 'n'? (blue balls are more than red balls in the bag initially).

- (a) 1
- (b) 2
- (c) 4
- (d) 6
- (e) 8

Direction (41 - 45): Table given below shows ratio of failed girls to failed boys and ratio of passed boys to passed girls and percentage of failed students out of total students in five schools (A, B C, D & E). Read the data carefully and answer the questions.

Note - All students in each school appeared in exam.

Schools	Ratio of failed girls to failed boys	Ratio of passed boys to passed girls	% of failed students
A	3 : 5	5 : 7	40%
B	4 : 5	4 : 5	30%
C	3 : 4	6 : 7	35%
D	2 : 3	5 : 3	20%
E	2 : 3	7 : 8	25%

Q41. If difference between passed boys & passed girls from A & E is 80 & 50 respectively, then find total failed girls from both schools together?

- (a) 220
- (b) 240
- (c) 260
- (d) 300
- (e) 200

Q42. If ratio of total failed students from B to that of C is 9 : 7 and total passed students from both the schools together are 1020, then find total students in these two schools together.

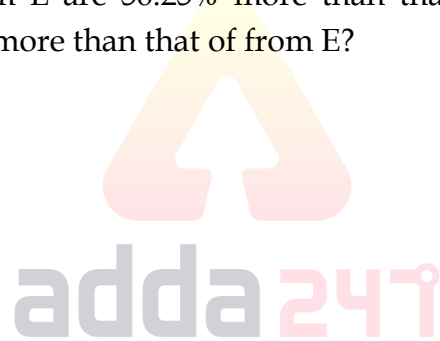
- (a) 1400
- (b) 1200
- (c) 1500
- (d) 1000
- (e) 800

Q43. If difference between passed girls and passed boys from D is 100 and total failed students from E are 150% more than that of from D, then find ratio of total students from D to that of from E?

- (a) 2 : 1
- (b) 1 : 4
- (c) 2 : 3
- (d) 1 : 3
- (e) 1 : 2

Q44. If total passed students from E are 56.25% more than that of from A, then find total failed students from A are what percent more than that of from E?

- (a) 24%
- (b) 28%
- (c) 32%
- (d) 30%
- (e) 20%



Q45. If total students from C are 25% less than that of from A and total failed students from both schools together are 530, then find average number of passed boys from both schools?

- (a) 120
- (b) 170
- (c) 190
- (d) 180
- (e) 160

Q46. What is the name of the mobile app launched by Max Life Insurance Company Limited as an initiative of its comprehensive wellness programme?

- (a) FIT India
- (b) Healthy Life
- (c) MAX Fit
- (d) MAX Health
- (e) MAX Wellness

Q47. Which Union Territory (UT) has become India's first 100% organic under the Centre's Paramparagat Krishi Vikas Yojana (organic farming improvement programme)?

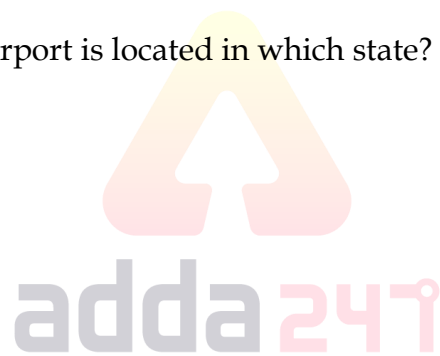
- (a) Lakshdweep
- (b) Ladakh
- (c) Chandigarh
- (d) Dadra and Nagar Haveli
- (e) Jammu and Kashmir

Q48. Poba Reserve Forest would be upgraded to a wildlife sanctuary is located in which state of India?

- (a) Assam
- (b) Sikkim
- (c) Manipur
- (d) Meghalaya
- (e) Arunachal Pradesh

Q49. Bhogapuram International Airport is located in which state?

- (a) Odisha
- (b) Andhra Pradesh
- (c) Maharashtra
- (d) Madhya Pradesh
- (e) Arunachal Pradesh



Q50. What is the theme of 4th edition of India Mobile Congress (IMC) 2020, organised by the Department of Telecommunications (DoT) and Cellular Operator Association of India (COAI)?

- (a) NEW DIGITAL HORIZONS: Connect. Create. Innovate.
- (b) Imagine a new CONNECTED world: Intelligent. Immersive. Inventive
- (c) Telecom for Communication and Innovation
- (d) Innovation on Pandemic: Intelligent Immersive. Inventive.
- (e) Inclusive Innovation - Smart I Secure I Sustainable

Q51. Pangong Tso is situated in which state/UTs?

- (a) Sikkim
- (b) Uttarakhand
- (c) Arunachal Pradesh
- (d) Manipur
- (e) Ladakh

Q52. Which bank has launched 'InstaFX' App for Forex Partners to help customers of any bank to obtain Forex Prepaid Card?


- (a) HDFC Bank
- (b) ICICI Bank
- (c) Yes Bank
- (d) Axis Bank
- (e) IndusInd Bank

Q53. Which bank has entered into a co-lending arrangement with IIFL Home Finance Ltd to extend credit to MSME loans?

- (a) HSBC India
- (b) Deutsche Bank
- (c) Standard Chartered Bank
- (d) DBS Bank
- (e) Barclays Bank

Q54. Maximum contribution in India's National Income is coming from which of the following sectors?

- (a) Primary Sector
- (b) Secondary Sectors
- (c) Tertiary Sectors
- (d) Quaternary Sectors
- (e) Industrial Sectors



Q55. The Global Risk Report is published by which of the following organizations?

- (a) International Monetary Fund
- (b) World Bank
- (c) United Nation Office of Sustainable Development
- (d) World Economic Forum
- (e) United Nations Development Program

Q56. Which of the following institutions has been given the responsibility of promoting the micro-enterprises in the aspirational districts across the country?

- (a) RBI
- (b) NABARD
- (c) SEBI
- (d) CRISIL
- (e) SIDBI

TEST SERIES

ENGLISH



FCI 2021

ASST. GENERAL MANAGER
(General Administration)

20 TOTAL TESTS

Q57. What river does Rome stand on?

- (a) Seine
- (b) Amazon
- (c) Congo
- (d) Tiber
- (e) Nile

Q58. Where has the Reserve Bank of India (RBI) decided to set up an Automated Banknote Processing Centre (ABPC) for receipt, storage and dispatch of currency notes?

- (a) Bhopal
- (b) Surat
- (c) Noida
- (d) Gurugram
- (e) Jaipur

Q59. Which of the following launched an electronic spot platform for agricultural commodities called BEAM?

- (a) National Commodity and Derivatives Exchange
- (b) Calcutta Stock Exchange
- (c) National Stock Exchange
- (d) Multi Commodity Exchange
- (e) Bombay Stock Exchange

Q60. The general decrease in the prices of goods and services is termed as _____.

- (a) Inflation
- (b) Deflation
- (c) Stagflation
- (d) Hyperinflation
- (e) Annulation

Q61. NSSO comes under the jurisdiction of which of the central ministries?

- (a) Ministry of Home Affairs
- (b) Ministry of Statistics and Programme Implementation
- (c) Ministry of Social Justice
- (d) Ministry of Law
- (e) Ministry of Information and Broadcasting

Q62. Who won the Abu Dhabi Grand Prix 2020?

- (a) Max Verstappen
- (b) Daniel Ricciardo
- (c) Lewis Hamilton
- (d) Charles Leclerc
- (e) Valtteri Bottas

Q63. Vidyavachaspati Bannanje Govindacharya who passed away was related with?

- (a) Sanskrit
- (b) Hindi
- (c) Tamil
- (d) Odia
- (e) Malayalam

Q64. In which state Haldia port is situated?

- (a) Tamil Nadu
- (b) Karnataka
- (c) West Bengal
- (d) Maharashtra
- (e) Odisha

Q65. What is full form of IFSC code?

- (a) Indian France system code
- (b) Indian France system code
- (c) India finance system code
- (d) Indian financial system code
- (e) India finance system core

Q66. Where did the ninth edition of the Sustainable Mountain Development Summit (SMDS) held?


- (a) Ranchi
- (b) Dehradun
- (c) Bhopal
- (d) Kolkata
- (e) Lucknow

Q67. Which city is known as city of castles in India?

- (a) Amritsar
- (b) Bhopal
- (c) Kolkata
- (d) Hyderabad
- (e) Bengaluru

Q68. Export-Import Bank of India (Exim Bank) extended a Line of Credit (LOC) of \$448 million to which country?

- (a) Albania
- (b) Kazakhstan
- (c) Uzbekistan
- (d) Mozambique
- (e) Kyrgyzstan



Q69. Corporation Bank is a public-sector bank located in _____.

- (a) Kolkata
- (b) Mangalore
- (c) Chennai
- (d) Bengaluru
- (e) Mumbai

Q70. Which of the following is a form of money with an intrinsic value?

- (a) Representative Money
- (b) Commodity Money
- (c) Call Money
- (d) Fiat Money
- (e) All of these

Q71. Who won the 10m air rifle event at the 6th edition of the International Online Shooting Championship (IOSC)?

- (a) Vijay Kumar
- (b) Samresh Jung
- (c) Yash Vardhan
- (d) Gagan Narang
- (e) Yashaswini Singh Deswal

Q72. When is Vijay Diwas celebrated in India?

- (a) December 16
- (b) December 13
- (c) December 14
- (d) December 17
- (e) December 15

Q73. Nana Akufo-Addo has been re-elected as the president of which country?

- (a) Nigeria
- (b) Senegal
- (c) Kenya
- (d) Accra
- (e) Ghana

Q74. With which of the following did BSE Ebix Insurance Broking tied up to beta launch its term insurance products on its platform?

- (a) ICICI Prudential Life Insurance
- (b) IDBI Federal Life Insurance
- (c) ICICI Lombard General Insurance Company
- (d) Kotak Life Insurance
- (e) Tata AIA Life Insurance



Q75. What is the target year set by Indian Government to produce 175 GW Renewable Energy in the country?


- (a) 2028
- (b) 2030
- (c) 2022
- (d) 2026
- (e) 2021

Q76. Global financial services major HSBC has inaugurated its International Banking Unit (IBU) branch in which state?

- (a) Maharashtra
- (b) Goa
- (c) Kerala
- (d) Gujarat
- (e) Karnataka

Q77. J K Shivan has been appointed as the Managing Director and Chief Executive Officer (MD & CEO) of which bank?

- (a) Bandhan Bank
- (b) Dhanlaxmi Bank
- (c) South Indian Bank
- (d) IDFC Bank
- (e) Karur Vysya Bank



Q78. PhonePe in partnership with which life insurer launched Term Life Insurance plans on its platform?

- (a) Bajaj Allianz Life Insurance
- (b) Bharti AXA Life Insurance
- (c) ICICI Prudential Life Insurance
- (d) Birla Sun Life Insurance
- (e) Edelweiss Tokio Life Insurance

Q79. Who has authored the book titled 'Right Under Your Nose'?

- (a) Raghuram Rajan
- (b) BP Kanoongo
- (c) Urjit Patel
- (d) R Giridharan
- (e) MK Jain

An advertisement for 'Bank Prime Test Pack' by Adda247. It features a dark blue background with white and yellow text. The text includes 'BILINGUAL' in a red box, 'Bank Prime Test Pack' in large white letters, 'IBPS | SBI | LIC | RBI | Others' in a black box, '1200+ Total Tests' in yellow, and '12 Months Validity' in white.

Q80. Who has been appointed as the first Additional Director General-ADG (Human Rights-HR) in the newly created Human Rights cell in the Indian Army?

- (a) Major General Raj Shukla
- (b) Major General Gautam Chauhan
- (c) Major General Alok Singh Kler
- (d) Major General Manoj Pande
- (e) Major General Anil Chauhan

Q81. Who has been named as the captain of the ICC ODI Team of the Decade by International Cricket Council?

- (a) Virat Kohli
- (b) Eoin Morgan
- (c) M. S. Dhoni
- (d) Chris Gayle
- (e) AB de Villiers

Q82. Which of the following Tiger Reserve has introduced India's first hot air balloon wildlife safari?

- (a) Bandhavgarh Tiger Reserve, Madhya Pradesh
- (b) Buxa Tiger Reserve, West Bengal
- (c) Bandipur Tiger Reserve, Karnataka
- (d) Ranthambore Tiger Reserve, Rajasthan
- (e) Manas Tiger Reserve, Assam

Q83. Over which river the 1.5 km long Koilwar Bridge was constructed that recently got inaugurated by Union Minister of Road Transport and Highways, Nitin Gadkari on December, 2020?

- (a) Sone river
- (b) Betwa river
- (c) Koshi river
- (d) Narmada river
- (e) Tapi river

Q84. PricewaterhouseCoopers (PWC) India has partnered with which two companies to train 300 million young people in India over the next 10 years?

- (a) UNESCO and Save the Children
- (b) Greenpeace India
- (c) Amnesty International
- (d) Save the Children
- (e) UNICEF and YuWaah

Q85. Raja Bhoj Airport is located in which of the following cities?

- (a) Indore
- (b) Bhopal
- (c) Dumna
- (d) Gwalior
- (e) Satna

Q86. Who has been appointed as the CEO of the proposed National Asset Reconstruction Company Ltd?

- (a) Padmakumar M Nair
- (b) Ganesh Natarajan
- (c) Ashwani Bhatia
- (d) Mrugank M Paranjape
- (e) Roshni Singh

Q87. Which of the following bank has announced the launch of the "I choose my number" feature for all its customers across India?

- (a) Ujjivan Small Finance Bank
- (b) Jana Small Finance Bank
- (c) Equitas Small Finance Bank
- (d) Utkarsh Small Finance Bank
- (e) A U Small Finance Bank

Q88. Which of the following institute has been conferred with the "Green Urja Award"?

- (a) IREDA
- (b) SEBI
- (c) LIC
- (d) IRDAI
- (e) THPC

Q89. When is the International Nurses Day celebrated?

- (a) May 10
- (b) May 11
- (c) May 12
- (d) May 09
- (e) May 08

Q90. London-based property consultant Knight Frank has ranked _____ and _____ in 32nd and 36th positions respectively in the Global Prime Residential Index.

- (a) New Delhi and Mumbai
- (b) Bengaluru and Mumbai
- (c) Bengaluru and New Delhi
- (d) New Delhi and Kanpur
- (e) Kanpur and Bengaluru

Q91. Name the characteristics of management?

- (a) It is continuous process
- (b) It is composite process
- (c) It is social process
- (d) All the above

Q92. Principal of scientific management was develop by

- (a) H.s Pearson
- (b) Peter f drucker
- (c) F.W Taylor
- (d) Henri fatol

Q93. What is meaning of centralization?

- (a) Right man in right place
- (b) Performance based reward. System
- (c) Unity among employees is emphasized
- (d) Concentration of authority at one place or at one level in the organisation

Q94. Which is the process of establishing relationships among the member of enterprise?

- (a) Planning
- (b) Staffing
- (c) Directing
- (d) Organising

Q95. Sub function of directing is?


- (a) Controlling.
- (b) Coordination
- (c) Recruitment
- (d) Leadership

Q96. Which of the following are objective of marketing management?

- (a) For creating demand for the product
- (b) For creating product differentiation
- (c) To satisfy need of the customer
- (d) All the above

Q97. What are the main aspects of financial management?

- (a) Financing decision
- (b) Investment decision
- (c) Tax planning
- (d) All the above



Q98. What are source of recruitment of employees?

- (a) By interviewing
- (b) By advertising
- (c) By taking aptitude test
- (d) By behavior

Q99. Strategy is a ____ of an organisation's desired image, direction and destination.

- (a) Long-range blueprint
- (b) Game plan
- (c) Short-range blueprint
- (d) Index

Q100. _____ is the use of various tools to prepare business strategies by evaluating the opportunities and challenges faced by the company as it moves forward

- (a) Competitive analysis
- (b) Strategic analysis
- (c) SWOT analysis
- (d) Portfolio analysis

Q101. _____ is the process of determining the objectives of the firm, resources required to obtain these objectives and formulation of policies to govern the acquisition, use and disposition of resources.

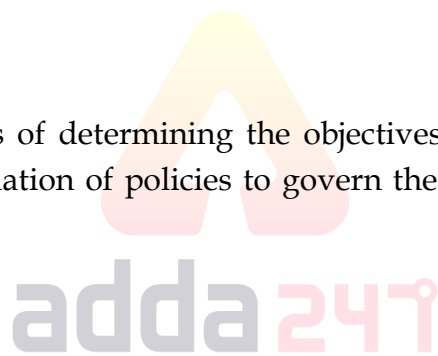
- (a) Strategic planning
- (b) Strategic Intent
- (c) Strategic Vision
- (d) Stability Strategy.

Q102. Which of the following is a maintenance factor according to Herzberg theory?

- (a) Salary
- (b) Work itself
- (c) Responsibility
- (d) Recognition

Q103. A Strategic leader is a/an ____ to initiate strategic change in the organisation and ensure that changes are successfully implemented.

- (a) Change agent
- (b) Middlemen
- (c) Authorized person
- (d) Chairperson



BILINGUAL

SBI CLERK
Target Batch
For Prelims
Starts May 25, 2021

The advertisement features a blue background with a white circular frame containing three Adda247 staff members. The text is in white and yellow, with 'SBI CLERK' in large white letters, 'Target Batch For Prelims' in yellow, and 'Starts May 25, 2021' in white.

Q104. Which is an examination and evaluation of areas affected by the operation of strategic management process within an organization?

- (a) Strategic Intent
- (b) Strategic Analysis
- (c) Strategic Control
- (d) Strategic Audit

Q105. _____ is an approach of setting goals and measuring productivity based on best industry practices.

- (a) Business Process Re-engineering
- (b) Turnaround Strategy
- (c) Benchmarking
- (d) Retrenchment

Q106. Which of demographic issues represents a challenge for human resource managers?

- (a) increasingly diverse workforce
- (b) aging workforce
- (c) increasing use of contingent workers
- (d) both a and b

Q107. What tactic should the employers likely have to take to fill openings left by retiring employees?

- (a) instituting flexible work hours
- (b) providing elder care
- (c) hiring more women
- (d) rehiring retirees

Q108. A _____ is a company's plan for how it will balance its internal strengths and weaknesses with external opportunities and threats in order to maintain a competitive advantage.

- (a) SWOT analysis
- (b) mission statement
- (c) strategy
- (d) tactic

Q109. The human resource departments' performance is evaluated based on _____.

- (a) Measurable evidence of efficiency
- (b) measurable evidence of effectiveness
- (c) anecdotal evidence
- (d) both a and b

Q110. What does Managers use to measure the HR function's effectiveness and efficiency in producing employee behaviors the company needs to achieve its strategic goals.

- (a) metric
- (B) HR Scorecard
- (C) benchmark
- (D) high performance work system

Q111. What metric evaluates retention efforts by an organization?

- (a) turnover costs
- (b) turnover rate
- (c) cost per hire
- (d) both a and b

Q112. What is the leadership prototype

- (a) is useful primarily for selection and training of employees
- (b) Uses LPC (Least Preferred Co-worker) as an important component
- (c) Depicts the image of a model leader
- (d) Emphasizes leadership development

Q113. In an SWOT matrix there are how many cells

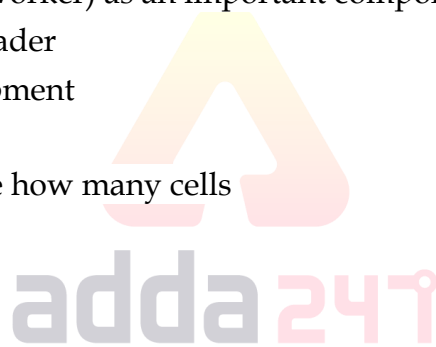
- (a) 6
- (b) 7
- (c) 8
- (d) 9

Q114. _____ activity does not comes under the primary activities of value Chain analysis

- (a) Operations
- (b) Technology development
- (c) Marketing and sales
- (d) Services

Q115. _____ requires a firm to establish annual objectives, devise, policies, motivates employees and allocate resources for the execution of strategies

- (a) Strategy formulation
- (b) Strategy evaluation
- (c) Strategy implementation
- (d) Strategy estimation



Q116. What does Industry/sector benchmarking compare

- (a) Organisational performance between firms/public sector organisations in different industries or sectors
- (b) Organisational performance between firms/public sector organisations in the same industry or sector
- (c) Organisational performance between firms/public sector organisations in different countries
- (d) Organisational performance between different divisions of the firm

Q117. What does the term corporate strategy concerns strategy and strategic decisions mean

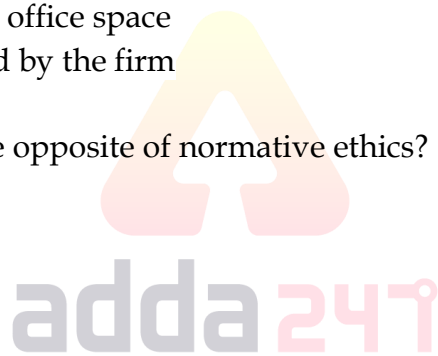
- (a) In certain types of organization
- (b) At all levels in an organization
- (c) Developed by the senior management in an organization
- (d) In the private sector only

Q118. What does Organization structure primarily refers to _____?

- (a) how activities are coordinated & controlled
- (b) how resources are allocated
- (c) the location of departments and office space
- (d) the policy statements developed by the firm

Q119. Which of the following is the opposite of normative ethics?

- (a) Micro ethics
- (b) Meta ethics
- (c) Beta ethics
- (d) Virtue ethics
- (e) None of the above



Q120. The area where law and ethics overlap is called:

- (a) Yellow area
- (b) Grey area
- (c) Green area
- (d) White area
- (e) Black area

Q121. A problem, situation, or opportunity requiring an individual, group or organisation to choose among several actions that must be evaluated as right or wrong, is called:

- (a) Crisis
- (b) Fraud
- (c) Ethical issue
- (d) Ethical dilemma
- (e) Indictment

Q122. In business ethics, compliance generally refers to a company' or business person's conformity with relevant laws and regulations. Which of the following is/are not a disadvantage of an ethical compliance in an organisation?

- (a) It provides competitive advantages in terms of customers
- (b) It is time-consuming and costly process
- (c) It reduces company's ability to maximise profit
- (d) Both (a) and (c)
- (e) Only (a)

Q123. For a business to be successful, business ethics training programs are required to:

- (a) Promote the use of emotions in making decisions
- (b) Be restricted to upper level executives
- (c) Focus on personal opinions of employees
- (d) Educate and aware employees regarding formal ethical frameworks and models of ethical decision making
- (e) Both (c) and (d)

Q124. Which of the following is the first step in the process of establishing organisational ethics programme?

- (a) Ethical training programme
- (b) Code of conduct
- (c) Hidden agendas
- (d) Ethics enforcement mechanisms
- (e) Ethical principles

Q125. What is the term related to the practice when a firm charges different prices to different groups of customers and is accused of doing so?

- (a) Money laundering
- (b) Culture relativism
- (c) Price discrimination
- (d) Price sensitivity
- (e) None of the above

Q126. Business ethics refers to contemporary organizational standards, principles, sets of values and norms that govern the actions and behaviour of an individual in the business organization. What are the factors influencing business ethics in an organisation?

- (a) Manager's and co-worker's influence
- (b) Codes and compliance requirements
- (c) Personal code of ethics
- (d) Only (b) and (c)
- (e) All of the above

NRA-CET Ready

**BANK
MAHA PACK**

Live Class, Video Course,
Test Series, eBooks

Bilingual (with eBooks)

12+12 Months Validity

Q127. Which model of managerial ethics do not consider the ethical implications of an action or belief that ethics are irrelevant?

- (a) Moral managerial model
- (b) Immoral managerial model
- (c) Amoral managerial model
- (d) There is no such model exists
- (e) None of the above

Q128. An Indian company wants to open a franchise in the foreign country but to establish fully it have to pay bribe to government officials to get a permit to obtain materials required to build its headquarters. Which of the following is an example of an ethical response?

- (a) Not paying the bribe and convincing a local company to illegally sell materials to them, since demanding bribe is an unethical behaviour
- (b) Pay the bribe because company's first obligation is towards the shareholders
- (c) Pay the bribe because it is customary in the country where the business is to be constructed
- (d) Paying the bribe because company only has to comply with the community standards in the community where it will be opening
- (e) Not paying the bribe and bringing the outside materials from a foreign country to complete the construction

Q129. How do law and ethics are relatable to each other? Choose among the following options:

- (a) The laws establishes what is ethical and anything which is legal is automatically ethical
- (b) Laws and ethics both serves similar purpose for guiding human conduct to make it conducive to civilised social existence
- (c) Law and ethics serves as an interactive systems, informing and assessing each other
- (d) Both (c) and (d)
- (e) All of the above

Q130. Virtue ethics is a class of normative ethical theories which treat the concept of moral virtue as central to ethics. What is the relationship between duty and virtue according to virtue ethics?

- (a) These two concepts are interdependent on each other
- (b) If one does one's duty, virtue is unnecessary
- (c) Virtue is a defined as a character trait that leads us to do our duty
- (d) Duty is defined as what a virtuous person would do
- (e) Duty and virtue are not related to each other at all

Q131. Which of the following is not a theory of business ethics?

- (a) Deontology
- (b) Ethical relativism
- (c) Absolutism
- (d) Consequentialism
- (e) Profit motive

Q132. Which ethical theory emphasises the importance of response to the individual rather on generalizable standards and impartiality?

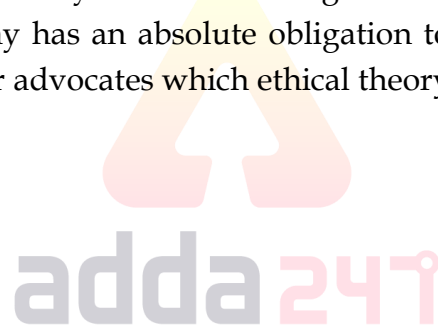
- (a) Consequentialist
- (b) Deontological
- (c) Ethics of care
- (d) Absolutism
- (e) None of the above

Q133. Virtue ethics treats the concept of moral virtue as central to ethics. What can be the difficulty in the application of virtue ethics?

- (a) The applicable categorical imperatives
- (b) The applicable principle of rights
- (c) The ethics of care analysis
- (d) Do not provide guidance on how we should act
- (e) Both (b) and (d)

Q134. In an organisation a manager may think it is wrong to terminate a person whose spouse has a terminal illness because a company has an absolute obligation to support its employees when they are vulnerable. This act of manager advocates which ethical theory?

- (a) Rule utilitarianism
- (b) Deontology
- (c) Ethical fundamentalism
- (d) Act utilitarianism
- (e) Ethical relativism



Q135. Which concept is termed as a set of universal moral principles that apply to all human beings irrespective of context or situation?

- (a) Kantian theory
- (b) Situational ethics
- (c) Deontology
- (d) Utilitarianism
- (e) None of these

Q136. NABARD was set up on the recommendation of which committee?

- (a) Swaminathan committee
- (b) B.P. Pal committee
- (c) Shiva Raman committee
- (d) Narasiman committee
- (e) None of these

Q137. Proportion of sand, silt and clay is called

- (a) Pedology
- (b) Structure
- (c) Soil density
- (d) Texture
- (e) None of these

Q138. Food safety standards are decided by in India

- (a) APEDA
- (b) NAFED
- (c) FSSAI
- (d) NABARD
- (e) FCI

Q139. Which of following insect attack both in the field and store of Pulses?

- (a) Gram pod borer
- (b) Pulse Beetle
- (c) Pod borer
- (d) Potato tuber moth
- (e) None of these

Q140. Maximum area under a crop in India is occupied by?

- (a) Wheat
- (b) Rice
- (c) Cotton
- (d) Maize
- (e) None of these

Q141. The production system where high diversity renewable and bio-degradable inputs are being used is called

- (a) Diversified agriculture
- (b) Sustainable agriculture
- (c) Organic farming
- (d) Hydroponics agriculture
- (e) None of these

Q142. Presently cropping intensity in India about

- (a) 140%
- (b) 150%
- (c) 138%
- (d) 137%
- (e) None of these



Q143. Which soil has the highest water holding capacity?

- (a) Sandy soil
- (b) Alluvial soil
- (c) Clay soil
- (d) Black cotton soil
- (e) None of these

Q144. Which of following state is used Utera technique in rice?

- (a) West Bengal
- (b) Madhya Pradesh
- (c) Arunachal Pradesh
- (d) Chhattisgarh
- (e) None of these

Q145. The water erosion in India maximum in which zone

- (a) Southern region
- (b) Northern region
- (c) North-East region
- (d) Middle gangetic plane
- (e) None of these

Q146. The water logged area in India is (million hectare)


- (a) 20.2 mha
- (b) 11.6 mha
- (c) 13.0 mha
- (d) 0.99 mha
- (e) None of these

Q147. A recorded rainfall of 2.5 cm or more within a period of 24 hrs is called.

- (a) Dry day
- (b) Rainy day
- (c) Frost day
- (d) Fog day
- (e) None of these

Q148. The pH of saline soil is

- (a) >8.5
- (b) <8.5
- (c) 4.0 to 5.5
- (d) 6.5
- (e) None of these



Q149. Which of following institution get maximum credit in agriculture sector?

- (a) NABARD
- (b) Cooperative Bank
- (c) RRB
- (d) Commercial Bank
- (e) None of these

Q150. Land holding of marginal farmer

- (a) 1-2 ha
- (b) 10 ha or above
- (c) Less than 1 ha
- (d) 4-10 ha
- (e) None of these

Q151. What is the minimum support price of Paddy grade A for year 2020-21 ? (per quintal)

- (a) 1850
- (b) 1900
- (c) 1868
- (d) 1888
- (e) None of these

Q152. First man made cereal is

- (a) Triticale
- (b) Raphanobrasica
- (c) Pomato
- (d) All of the above
- (e) None of these



Q153. Per cent content of sulphur in single super phosphate is

- (a) 10
- (b) 11
- (c) 13
- (d) 12
- (e) None of these

Q154. The highest per capita income of farmers in in

- (a) Maharashtra
- (b) Punjab
- (c) Haryana
- (d) Tamil Nadu
- (e) None of these

Q155. Major paddy procuring states in KMS 2020-21

- (a) West Bengal
- (b) UP
- (c) Punjab
- (d) Bihar
- (e) None of these

Q156. Sweet Revolution related to

- (a) Sugarcane Production
- (b) Honey Production
- (c) Beetroot Production
- (d) Sweet Potato Production
- (e) None of these

Q157. Which of the following is secondary nutrient?

- (a) Mg
- (b) Zn
- (c) N
- (d) P
- (e) None of these

Q158. The cost involved in moving the product from the point of production to point of consumption is called


- (a) Production cost
- (b) Marketing cost
- (c) Labour cost
- (d) Fixed cost
- (e) None of these

Q159. In the monopoly market there is/are

- (a) One seller of the produce
- (b) Two sellers of the produce
- (c) Three sellers of the produce
- (d) Four sellers of the produce
- (e) None of these

Q160. Which agency engaged in constructing large scale warehouse at national level ?

- (a) Food Corporation of India
- (b) Central Warehouse Corporation
- (c) APEDA
- (d) NABARD
- (e) None of these



Q161. National markets are found for

- (a) Perishable goods
- (b) Durable Goods
- (c) Dairy Products
- (d) All of the above
- (e) None of these

Q162. The Agricultural Produce (Grading and Marketing) Acts passed in the year

- (a) 1940
- (b) 1955
- (c) 1937
- (d) 1904
- (e) None of these

Q163. According to law of diminishing return the economically relevant zone is

- (a) Zone - III
- (b) Zone - II
- (c) Zone - I
- (d) Zone - V
- (e) None of these

Q164. Commission for Agriculture Costs & Prices - CACP established in the year

- (a) 1990
- (b) 1988
- (c) 1965
- (d) 1935
- (e) None of these

Q165. Presently the chairman of Commission for Agriculture Cost & Price - CACP

- (a) Vijay Paul Sharma
- (b) G R Chintala
- (c) Harsh Kumar Bhanwala
- (d) Narendra Singh Tomer
- (e) None of these

Q166. Plants grow in saline soil are called

- (a) Halophytes
- (b) Xerophytes
- (c) Hydroponics
- (d) Contour farming
- (e) None of these


BILINGUAL

Bank Prime Test Pack

IBPS | SBI | LIC | RBI | Others

1200+ Total Tests

12 Months Validity



Q167. The smallest size of soil separate is

- (a) Loam
- (b) Sand
- (c) Silt
- (d) Clay
- (e) None of these

Q168. Which of the following correct sequence of soil erosion?

- (a) Gully-Rill-Sheet
- (b) Splash-Rill-Sheet
- (c) Sheet-Rill-Gully
- (d) Sheet-Gully-Rill
- (e) None of these

Q169. Revamping Public Distribution System (RPDS) aimed to provide benefits to

- (a) Urban areas
- (b) Remote and Backward areas
- (c) Poor Farmers
- (d) Self-help women groups
- (e) None of these

Q170. The Public Distribution System (PDS) is an Indian food security system under the ministry

- (a) Ministry of Agriculture and Farmers Welfare
- (b) Ministry of Consumer Affairs, Food and Public Distribution
- (c) Ministry of Rural Development
- (d) Ministry of Health and Family Welfare
- (e) None of these

Q171. The Central government, through Food Corporation of India (FCI) has assumed the responsibility

- (a) Procurement
- (b) Storage
- (c) Transportation
- (d) Bulk allocation of food grains to the states
- (e) All of the above

Q172. The Revamping Public Distribution System (RPDS) was launched in

- (a) March 1990
- (b) June 1992
- (c) April 1991
- (d) May 1999
- (e) None of these

Q173. Antyodaya Anna Yojana launched in the year

- (a) 2000
- (b) 2001
- (c) 2005
- (d) 2003
- (e) None of these

Q174. Integrated watershed Management Programme (IWMP) is implemented by

- (a) Department of Land Resources
- (b) Department of Agriculture
- (c) Department of Animal Husbandry
- (d) All of the above
- (e) None of these

Q175. Which of the followings are the methods of soil conservation?

- (a) Afforestation
- (b) Constructing Dams
- (c) Crop rotation
- (d) Contour Ploughing
- (e) All of the above

Q176. Which is the command used to remove text or graphics from a document and the information is then stored on a clipboard, so you can paste it later on?

- (a) Cut
- (b) Clip
- (c) Chop
- (d) Chew
- (e) Chunk

Q177. Which of the following groups contains graphical file extensions?

- (a) JPG, GIF, BMP
- (b) GIF, TCF, WMF
- (c) TCP, JPG, BMP
- (d) ADP, GIF, PPT
- (e) JPG, CPX, GCM

Q178. Which of the following technologies is used in answer sheets to check them electronically?

- (a) MICR
- (b) OMR
- (c) OCR
- (d) Bar code
- (e) None of these

Q179. Which of the following mouse can work on any surface from a granite countertop to a carpet?

- (a) Mechanical mouse
- (b) Optical mouse
- (c) Laser mouse
- (d) Blue Track mouse
- (e) None of these

Q180. Which of the following programs is used to restrict access to selected websites?

- (a) Channels
- (b) Filters
- (c) Browsers
- (d) Telnet
- (e) None of these

TEST SERIES

ENGLISH



FCI 2021

**ASST. GENERAL MANAGER
(General Administration)**

20 TOTAL TESTS



BOOKS

50+ BANK PO CLERK 2016-2021 PREVIOUS YEARS' Memory Based Papers Edition 3.0 500+ Questions 6500+ Detailed Solutions of English Grammar & Reasoning	50+ बैंक पीओ/ क्लर्क 2016-2021 पिछले वर्षों की याददाश्त आधारित प्रश्नपत्रिका Edition 3.0 300 कठिन प्रश्नों के विस्तृत समाधान	20+ SBI CLERK PRELIMS MOCK PAPERS Based on Latest Pattern 17 Prelims Mock Papers 2100 Questions with 100% Solutions	A Complete Book of PUZZLE & SEATING ARRANGEMENT Useful for Banking & Insurance Examinations for IBPS, SBI, LIC, LIC & Others 3200+ Questions	20+ IBPS CLERK PRELIMS MOCK PAPERS Based on Latest Pattern 20 Mock Papers 2100 Questions with 100% Solutions	"THE CRACKER" BANK MAINS EXAMS Bank mains for IBPS SBI RRB PO-CLERK 2000+ Questions 3500+ Detailed Solutions	COMPREHENSIVE GUIDE FOR INTELLIGENCE BUREAU ACIO GRADE-II 3500+ Questions
A COMPLETE BOOK OF DATA INTERPRETATION & ANALYSIS Useful for Banking & Insurance Examinations for IBPS, SBI, LIC, LIC & Others 2000+ Questions	25+ IBPS RRB PO & CLERK PRELIMS MOCK PAPERS Based on Latest Pattern English Medium 2240 Questions with 100% Solutions	Ace QUANT A Complete Guide for Quantitative Aptitude for Banking & Insurance Examinations 1000+ Questions with 100% Solutions	ऐस क्वान्ट बैंकिंग और बीमा परीक्षाओं के लिए 1000+ प्रश्नों के साथ 100% समाधान	Ace REASONING A Complete Guide for Reasoning for Banking & Insurance Examinations 1000+ Questions with 100% Solutions	ऐस रीजनिंग बैंकिंग और बीमा परीक्षाओं के लिए 1000+ प्रश्नों के साथ 100% समाधान	Ace BANKING & STATIC AWARENESS A Complete Guide for Banking & Static Awareness for Banking & Insurance Examinations 1000+ Questions with 100% Solutions
Ace IT OFFICER Professional Knowledge 1000+ Questions with 100% Solutions	COMPUTER APTITUDE For Banking & Insurance Examinations 1000+ Questions with 100% Solutions	BANK EXAMS INTERVIEWS A Guide to Crack Bank Exams Interviews Useful for IBPS, SBI, RRB, PO, Clerk, IBPS & Other Bank Exams 1000+ Questions with 100% Solutions	100+ SSC CGL TIER-I / PRELIMS Previous Years' Papers & Mock Tests Practice Book English Medium 1000+ Questions with 100% Solutions	A Comprehensive Guide for RRC GROUP 'D' 4000+ Questions with 100% Solutions	A COMPLETE BOOK OF LOGICAL REASONING Useful for IBPS SBI LIC Insurance & Other Exams 550+ Questions	"THE CRACKER" PRACTICE BOOK FOR GEOMETRY Useful for SSC CGL CPO CHSL & Other Exams 800+ Questions 3500+ Detailed Solutions
उत्तर प्रदेश पुलिस उत्तर प्रदेश पुलिस का पिछले वर्षों का प्रश्नपत्रिका (SI & ASI) 3500+ Questions with 100% Solutions	A Comprehensive Guide for DELHI POLICE CONSTABLE Useful for UP Police, Bihar Police, Forest Guard & Other Exams 3000+ Questions with 100% Solutions	50+ SSC CGL TIER - I MOCK PAPERS PRACTICE BOOK Useful for SSC CGL, CHSL, and CPO 500 Questions with 100% Solutions	20+ SSC CGL TIER-I PREVIOUS YEAR MOCK PAPERS PRACTICE BOOK Useful for SSC CGL, CHSL & CPO 200 Questions with 100% Solutions	"THE CRACKER" PRACTICE BOOK FOR ALGEBRA & NUMBER SYSTEM 1300+ Questions	"THE CRACKER" PRACTICE BOOK FOR MENSURATION 850+ Questions	Ace SSC ARITHMETIC Useful for SSC CGL, CHSL, and CPO 1000+ Questions with 100% Solutions
ऐस एसएससी अंक गणित अंक गणित का पिछले वर्षों का प्रश्नपत्रिका	Ace SSC ENGLISH LANGUAGE & COMPREHENSION BOOK 1000+ Questions with 100% Solutions	Ace SSC ADVANCED MATHS 1000+ Questions with 100% Solutions	ऐस एसएससी एवरेज मैथ अंक गणित का पिछले वर्षों का प्रश्नपत्रिका	Ace SSC GENERAL AWARENESS History Geography Polity Economics Sports Awards Festivals Bankings 1000+ Questions with 100% Solutions	ऐस एसएससी सामान्य ज्ञान इतिहास भूगोल राजनीति अर्थशास्त्र खेल पुरस्कार त्योहार बैंकिंग	Ace SSC GENERAL INTELLIGENCE & REASONING 1000+ Questions with 100% Solutions

Visit: adda247.com
 For any information, mail us at support.publication@adda247.com