

# All India Maha Mock Bihar State Co-operative Bank Assistant Prelims 15th May 2021

**Direction (1-7):** Read the following passage carefully and answer the questions given below it. Certain words are given in bold to help you locate them while answering some of the questions.

Walking into S Saravanan's ongoing exhibition at Artworld: Sarala's Art Centre, is like entering a sandstorm; shades of yellow ochre engulf you. In what he considers his 'Tryst With Forms', the show is his first one-man exhibit that largely consists of paintings and metal reliefs put together over the last year. At first glance – and even more so on close inspection – his abstract sensibility confounds the viewer. Only by standing afar can one really see the figures – all angular and Picasso-esque – that comprise his works. Dream for instance, is one of the larger works in this show, depicting the full frontal face of a figure, the long eyelashes and circular patterns near the earlobes hinting at a feminine **disposition**. The figure however, is more of an outline, a contour – skeletal in its inclination and not possessing the weight that is commonly accorded to skin. Be it the kaleidoscopic patterns that permeate the piece or the rendering of the figure in itself, there is a Cubist inclination to break the form – perhaps even reveal what is under.

Yet, there is an insistence, an overpowering urge to touch the surface, like an old wound that demands to be caressed in order to aid memories. Made with texture white – a multipurpose resin medium that aids in the development of textures – on canvas, the piece helps compose a movement, a back and forth, between two sensibilities; that of sight (the figure itself) and touch (the medium). This dance that pushes the viewer to physically engage with the works is mostly experienced with Saravanan's paintings in the exhibition. Tribal Woman is another piece that depicts the full frontal face of a figure. Made with crumpled rice paper, the painting prompts the viewer to take note of its textural complexity.

The ochres here are however blended with deep browns and rusty reds and emit a fiery glow that **emanates** from the centre of the woman's face. "The color yellow ochre is the first thing that you would notice when you visit places that are occupied by tribal folks. "The forests and sand take on such a tone at around four or five in the evening," he said. The piece's tactility is further enhanced by the decorative patterns that crowd the background of the otherwise softly contoured figure.

Whether through the forms themselves or through what they exemplify, Saravanan has portrayed generic aspects of tribal life. His paintings Tribals, Love, and Mother and Daughter among others, all **delineate** figures that are reflected in the metal relief works displayed at the other end of the gallery. Here, religious and mythological figures are given due consideration: Radha, Krishna, Ganesha and Buddha all form part of the artist's pantheon of tribal deities, in line with the general theme of the show. The works as such, deal more with forms – as they are meant to – rather than content. What would have bolstered Saravanan's remarkable tryst with forms is an anchoring into specificities of the regions that undoubtedly inspire him.

**NRA-CET Ready**

**BANK**

**MAHA PACK**

Live Class, Video Course,  
Test Series, eBooks

**Bilingual (with eBooks)**

**12+12 Months Validity**

**Q1.** Why has the author called walking into S Saravanan's ongoing exhibition at Artworld is like entering into a sandstorm?

- (a) As the ochres here are blended with deep browns and rusty reds and emit a fiery glow that emanates from the centre of the woman's face.
- (b) Shades of yellow ochre engulf you.
- (c) The color yellow ochre is the first thing that you would notice when you visit places that are occupied by tribal folks.
- (d) Both (b) and (c)
- (e) None of these

**Q2.** According to the passage, which of the following statements supports the 'Tactile beauty' term for the work done by S Saravanan?

- (a) The piece's tactility is further enhanced by the decorative patterns that crowd the background of the otherwise softly contoured figure.
- (b) The piece helps compose a movement, a back and forth, between two sensibilities; that of sight and touch. This pushes the viewer to physically engage with the works.
- (c) An overpowering urge to touch the surface, like an old wound that demands to be caressed in order to aid memories.
- (d) All (a), (b) and (c)
- (e) None of these

**Q3.** According to the passage how S Saravanan's abstract sensibility confounds the viewer?

- (a) The show is his first one-man exhibit that largely consists of paintings and metal reliefs put together over the last year.
- (b) The full frontal face of a figure, the long eyelashes and circular patterns near the earlobes hinting at a feminine disposition, one can dream of for instance, is one of the larger works in this show.
- (c) Here, religious and mythological figures are given due consideration all form part of the artist's pantheon of tribal deities, in line with the general theme of the show.
- (d) Only by standing afar can one really see the figures – all angular and Picasso-esque – that comprise his works
- (e) None of these

**Q4.** What are the characteristic features of the S Saravanan's portraits?

- (a) They exemplify generic aspects of tribal life.
- (b) Religious and mythological figures are given due consideration: Radha, Krishna, Ganesha and Buddha all form part of the artist's pantheon of tribal deities, in line with the general theme of the show.
- (c) Tribal Woman is another piece that depicts the full frontal face of a figure. Made with crumpled rice paper, the painting prompts the viewer to take note of its textural complexity.
- (d) Both (a) and (b)
- (e) None of these

**Q5.** What has supported Saravanan's remarkable love with this tribal art form?

- (a) An anchoring into specificities of the regions.
- (b) His love for the tribal people.
- (c) He is one of the people from the same tribe .
- (d) Both (a) and (c)
- (e) None of these

**Q6.** Choose the word which is most similar in meaning to the word '**Disposition**' printed in bold as used in the passage.

- (a) Nature
- (b) Distribution
- (c) Transfer
- (d) Allocation
- (e) Disposal

**Q7.** Choose the word which is most similar in meaning to the given word '**Emanates**' printed in bold as used in the passage.

- (a) Neglect
- (b) Halt
- (c) Disregard
- (d) Ensnare
- (e) Repress

**Q8.** Choose the word which is most similar in meaning to the given word '**delineate**' printed in bold as used in the passage.

- (a) portray
- (b) rendered
- (c) survived
- (d) standard
- (e) limited

**Directions (9-14):** In each of the questions given below a sentence is given with one blank. Below each sentence FOUR words are given out of which two can fit the sentence. Five options are given with various combinations of these words. You must choose the combination with the correct set of words which can fit in the given sentence.

**Q9.** The Trump administration worked to move ahead on its top \_\_\_\_\_ priority.

- (A) Diplomatic
- (B) Rough
- (C) Consular
- (D) Obsessed

- (a) A-B
- (b) B-C
- (c) A-D
- (d) A-C
- (e) B-D

**Q10.** The high level of asset prices today \_\_\_\_\_ the earlier trend in house prices.


- (A) Mockerie
- (B) Mirrors
- (C) Reflects
- (D) Refracts
- (a) C-D
- (b) B-C
- (c) A-D
- (d) A-C
- (e) B-D

**Q11.** The rights of a citizen who has not been charged with a criminal act ought to be \_\_\_\_\_ at all costs.

- (A) Marred
- (B) Protected
- (C) Sabotage
- (D) Safeguarded
- (a) B-D
- (b) A-D
- (c) A-B
- (d) A-C
- (e) B-C

**Q12.** Some laws are considered to be harmful to economic growth as they breed \_\_\_\_\_.

- (A) Inadequacy
- (B) Artifice
- (C) imitation
- (D) Inefficiency
- (a) A-B
- (b) B-C
- (c) A-D
- (d) A-C
- (e) B-D



**Q13.** The \_\_\_\_\_ over the proposed Foreign Ministers' meeting has brought setback to India-Pakistan ties.

- (A) regulatory
- (B) Acrimony
- (C) Animosity
- (D) revenge
- (a) B-C
- (b) A-B
- (c) B-D
- (d) A-C
- (e) C-D

**Q14.** In Delhi, pollution levels, every winter, is \_\_\_\_\_ reaching a stage of calamity.

- (A) Apace
- (B) Gradually
- (C) Slowly
- (D) Forcibly
- (a) A-B
- (b) C-D
- (c) A-C
- (d) B-D
- (e) B-C

**Direction (15-20):** In each of the questions given below a sentence is given which is then divided into five parts out of which last part is correct. There are errors in some parts of the sentence out of which only one part is correct. You must choose the part as your answer.

**Q15.** One of biggest (A) / problem we face at (B) / our country is our(C) / inability for (D) / **work in teams(E).**

- (a) One of biggest
- (b) problem we face at
- (c) our country is our
- (d) inability for
- (e) All are incorrect

**Q16.** The market condition when (A) / good and services are (B) / not free available(C) / and thus the prices is(D) / **relatively high is seller's market. (E)**

- (a) The market condition when
- (b) good and services are
- (c) not free available
- (d) and thus the prices is
- (e) All are incorrect



**BILINGUAL**

**SBI CLERK  
TARGET BATCH**

**Starts May 4, 2021**

**Q17.** The Head of Government (A) /of countries (B) /which are member (C) /of the Commonwealth meet for the (D) /**awareness on social issues.** (E)

- (a) The head of Government
- (b) of countries
- (c) which are member
- (d) of the Commonwealth meet for the
- (e) All are incorrect

**Q18.** New knowledge and new ways (A) / for understanding the world (B) /, of good or bad(C) /, have always been (D) /**part of every society.**(E)

- (a) New knowledge and new ways
- (b) for understanding the world
- (c) of good or bad
- (d) have always been
- (e) All are incorrect

**Q19.** The Partition and the (A) /bloodletting who accompanied (B) /our Independence take up(C) / many of the(D) /**energy of our founders.**(E)

- (a) The partition and the
- (b) bloodletting who accompanied
- (c) our Independence take up
- (d) many of the
- (e) All are incorrect

**Q20.** Giving unresponsive political parties (A) /, citizens can access (B) /centres for power(C) /and privilege by (D) /**through a vibrant civil society.**(E)

- (a) Giving unresponsive political parties
- (b) citizens can access
- (c) centres for power
- (d) and privilege by
- (e) All are incorrect

**Directions (21-25):** Which of the following phrases given below each sentence should replace the phrase printed in bold letters to make the sentence grammatically correct? Choose the best option among the five given alternatives that reflect the correct use of phrase in the context of the grammatically correct sentence. If the sentence is correct as it is, mark (e) i.e. "No correction required" as the answer.

**Q21. Despite of having** required ability, he could not succeed.

- (a) Despite of being
- (b) Despite having
- (c) Despite having of
- (d) In spite of being
- (e) No correction required

**Q22.** The leader repeatedly mentioned that his mission was not **by merely to achieve** freedom.

- (a) To more achieving
- (b) For merely to achieve
- (c) Merely to achieve
- (d) In order for achieving
- (e) No correction required

**Q23.** The advocate declared in the court that his client **has prepared to** surrender.

- (a) Was prepared to
- (b) Has been preparing for
- (c) Was prepared at
- (d) Has prepared for
- (e) No correction required

**Q24.** Late in the afternoon, **feeling exhausted and humiliated**, the impetuous warrior withdrew.

- (a) felting exhaust and humiliate
- (b) feeling exhausting and humiliate
- (c) feel exhaust and humiliated
- (d) feel exhausted with humiliate
- (e) No correction required

**Q25.** There is full justification to close down the units **which are neither profitable or serving** any social cause.

- (a) Which are not profitable or serve
- (b) Which are neither profiting nor serving
- (c) Which have neither profitable nor serve
- (d) Which are neither profitable nor serve
- (e) No correction required.

**Directions (26-30):** In the following passage, some of the words have been left out, each of which is indicated by a number. Find the suitable word from the options given against each number and fill up the blanks with appropriate words to make the paragraph meaningfully complete.

Over the last twenty-five years, a different \_\_\_\_\_ (26) to economics has been slowly birthing, and slowly growing—complexity economics. Complexity economics holds that the economy is not necessarily in equilibrium, that computation as well as mathematics is useful in economics, that increasing as well as \_\_\_\_\_(27) returns may be present in an economic situation, and that the economy is not something given and existing but forms from a \_\_\_\_\_(28) developing set of institutions, arrangements, and technological \_\_\_\_\_(29). The economy is a vast and complicated set of arrangements and actions wherein agents—consumers firms, banks, investors government agencies—buy and sell, speculate, trade, oversee, bring products into being, offer services, invest in companies, strategize, explore, forecast, compete, learn, innovate and \_\_\_\_\_(30).



- Q26.** (a) Act  
(b) Restrain  
(c) Agreement  
(d) Approach  
(e) Judgment

- Q27.** (a) Adding  
(b) Nurturing  
(c) Diminishing  
(d) Glorifying  
(e) Approving

- Q28.** (a) Defectively  
(b) Constantly  
(c) Worthlessly  
(d) Disloyally  
(e) Arranged

- Q29.** (a) Innovations  
(b) Reductions  
(c) Drawings  
(d) Affirmation  
(e) Distractions

- Q30.** (a) Anger  
(b) Clash  
(c) Argue  
(d) Annoy  
(e) Adapt

**Direction (31-35):** Study the following information carefully and answer the questions given below:

Nine people viz. P1, P2, P3, P4, P5, P6, P7, P8 and P9 live in a building on nine different floors. The ground floor is numbered 1, the floor just above it is numbered 2 and so on till top floor which is numbered as 9 (but not necessarily in the same order). More than four persons are living above P4. Three persons are living between P6 and P1 who is living below P8. P2 lives immediately above P9 and immediately below P8. P3 lives below P4 and above P5. Only one person is living between P5 and P7.

TEST SERIES

Bilingual



**SBI CLERK 2021**

**PRIME**

**100+ TOTAL TESTS**





**Q31.** Which of the following is true regarding P1?

- (a) Three persons are living below P1
- (b) Only One person is living between P1 and P9
- (c) P1 is living on an even numbered floor
- (d) All are true
- (e) Four persons are living above P1

**Q32.** Four of the following five are alike in a certain way and hence form a group, which of the following does not belong to the group?

- (a) P6-P8
- (b) P1-P9
- (c) P4-P7
- (d) P2-P9
- (e) P3-P5

**Q33.** Who among the following is living on the topmost floor?

- (a) P1
- (b) P6
- (c) P9
- (d) P8
- (e) None of these

**Q34.** How many persons are living between P4 and P5?

- (a) Two
- (b) Three
- (c) One
- (d) More than four
- (e) Four

**Q35.** Number of persons living above P8 is same as the number of persons living below \_\_\_\_\_?

- (a) P4
- (b) P2
- (c) P1
- (d) P3
- (e) None of these

**Directions (36-40):** Study the following sequence and answer the given questions.

**B @ 9 # C 1 £ 2 8 D μ 7 K 5 L E % U & F € M G 4 ! 3 Z ? 6 X ¥ P 5 A © 6**

**Q36.** Which of the following element is sixth to the left of the eighth element from the right end of the given arrangement?

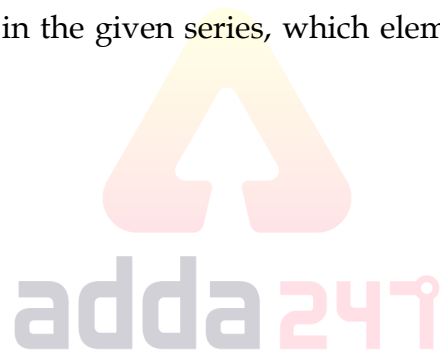
- (a) G
- (b) 4
- (c) M
- (d) 3
- (e) None of these

**Q37.** How many such letters are there in the given series which are immediately preceded by a symbol but not immediately followed by a number?

- (a) Two
- (b) Four
- (c) None
- (d) Three
- (e) More than four

**Q38.** If all the letters are dropped in the given series, which element will be eleventh from the right end?

- (a) U
- (b) F
- (c) &
- (d) M
- (e) None of these



**Q39.** Which of the following is odd one out?

- (a) B#£
- (b) 2μK
- (c) 5%&
- (d) FG!
- (e) 6PA

**Q40.** How many such symbols are there in the given series which are immediately preceded by a vowel and immediately followed by a number?

- (a) None
- (b) One
- (c) Two
- (d) Three
- (e) More than three

**Directions (41-45):** Study the following information carefully and answer the questions given below:

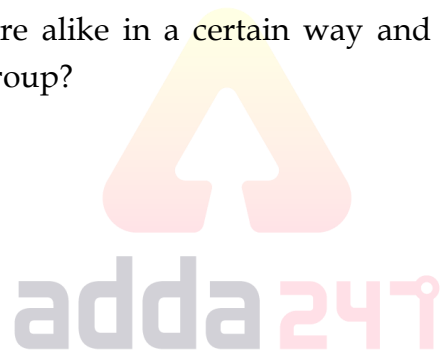
Eight persons are sitting around a square table in such a way that four persons sit at the corner of the table and other four persons sit at the middle of the table. The persons who sit at the corner are facing towards the center and the one who are sitting at the middle are facing away from the center. Ana sits second to the right of Danny. Fredrick sits immediate right of Bony who does not sit at the corner. Garry sits second to the left of Emma who sits at the middle of the table. Two persons sit between Danny and Charlie. Henry is an immediate neighbor of Charlie.

**Q41.** Who among the following sits second to the left of the person who is third to the right of Garry?

- (a) Fredrick
- (b) Danny
- (c) Charlie
- (d) Henry
- (e) None of these

**Q42.** Four of the following five are alike in a certain way and hence form a group, which of the following does not belong to the group?

- (a) Henry
- (b) Garry
- (c) Fredrick
- (d) Danny
- (e) Ana



**Q43.** Number of persons sitting between Charlie and Ana when counting from right of Ana is same as the number of persons sitting between Bony and \_\_\_\_\_ when counting from right of \_\_\_\_\_?

- (a) Garry
- (b) Emma
- (c) Fredrick
- (d) Henry
- (e) Danny

**Q44.** Which of the following is not true?

- (a) Charlie sits second to the left of Garry
- (b) Emma sits immediate right of Danny
- (c) Fredrick faces Ana
- (d) Bony faces outside the center
- (e) All are true

**Q45.** How many persons are sitting between Emma and Henry when counting from the left of Emma?

- (a) One
- (b) None
- (c) Three
- (d) Two
- (e) More than three

**Directions (46-48):** Study the following information carefully and answer the questions given below:

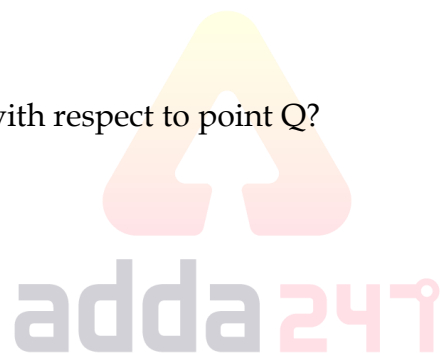
Point P is 7m north of point R which is 21m east of point Q. Point L is 7m south of point J which is 21m west of point N. Point N is 14m north of point Q. Point S is 28m east of point L. M is the midpoint between N and Q.

**Q46.** How far and in which direction is point S with respect to point M?

- (a) 7m, west
- (b) 7m, east
- (c) 14m, east
- (d) 14m, west
- (e) None of these

**Q47.** Point J is in which direction with respect to point Q?

- (a) North
- (b) North-west
- (c) North-east
- (d) South
- (e) South-west



**Q48.** If B is 7m south of S, then what is the shortest distance between the point B and point R?

- (a) 14m
- (b) 35m
- (c) 21m
- (d) 28m
- (e) 7m

**Directions (49-53):** Study the following information carefully and answer the questions given below:

Eight persons are sitting in a straight line equidistant from each other. Some of them are facing north and some of them are facing south. Not more than two persons having same direction are sitting adjacent to each other. Three persons are sitting to the left of U. Only one person sits between Z and W and both of them faces in the same direction. Z does not sit at the extreme end of the line. Y who is not an immediate neighbor of S sits second to the right of X who sits at one of the extreme ends of the line. V sits fifth to the left of T who faces in the south direction. S sits immediate right of U and both faces in opposite directions to each other. Persons sitting at the extreme ends are facing in the same direction. Y faces north direction.

**Q49.** How many persons are facing in the south direction?

- (a) Four
- (b) Five
- (c) Three
- (d) Two
- (e) Six

**Q50.** Who sits second to the left of S?

- (a) T
- (b) V
- (c) X
- (d) Z
- (e) None of these

**Q51.** Four of the following five are alike in a certain way and hence form a group, which of the following does not belong to the group?

- (a) S
- (b) U
- (c) Z
- (d) W
- (e) X

**Q52.** How many persons sit between Z and Y?

- (a) One
- (b) None
- (c) Three
- (d) Two
- (e) More than three

**Q53.** Which of the following is true?

- (a) No one sits to the left of W
- (b) U sits second to the right of T.
- (c) Z is facing in north direction
- (d) Both (b) and (c) are true
- (e) All are true

**Directions (54-55):** Study the following information carefully and answer the questions given below

In a family there are seven persons and four generations. A is married to the only daughter of D who is the only son of Q. E is the brother-in-law of A who has only one child. C is the grandson of M who is the mother of A. D has only two children. Q is a female member of the family. B is one of the members of the family. A has no siblings.

TEST SERIES

BILINGUAL




**BSCB 2021**

**Assistant (Multipurpose)**

**PRELIMS**

**25 TOTAL TESTS**



**Q54.** If E is married to L, how is D related to L?

- (a) Daughter-in-law
- (b) Mother-in-law
- (c) Father-in-law
- (d) Mother
- (e) Son-in-law

**Q55.** How many male members are there in the family?

- (a) Three
- (b) Four
- (c) Five
- (d) Two
- (e) More than five

**Directions (56-60):** Study the following information carefully and answer the questions given below:

Seven students A, B, C, D, E, F and G takes admission in a study course in Adda 247 but not necessarily in the same order. They take admissions in seven different months i.e. January, March, April, July, August, October and November of the same year. Two students take admission between B and E. B takes admission before E. F take admission in one of the month after D. A takes admission in April. Only one student takes admission between A and D. C takes admission before D and after B. G does not take admission in November.

**Q56.** Which of the following is not true?

- (a) B takes admission in January
- (b) E takes admission immediately after A
- (c) Three persons take admission after D
- (d) Both (a) and (b) are not true
- (e) All are not true

**Q57.** Which of the following combination is true?

- (a) B-January
- (b) C-November
- (c) D-October
- (d) E-August
- (e) F-March

**Q58.** Who takes admission in August?

- (a) B
- (b) C
- (c) D
- (d) E
- (e) None of these

**Q59.** How many persons take admission between B and F?

- (a) Three
- (b) Two
- (c) None
- (d) One
- (e) More than three

**Q60.** E takes admission in which of the following months?

- (a) January
- (b) April
- (c) July
- (d) October
- (e) None of these

**Directions (61-63):** Study the following information carefully and answer the questions given below

Six cars P, Q, R, S, T and U have different prices. Only two cars are more expensive more than R. T is less expensive than R but more expensive than W. P is more expensive than S but less expensive than Q. S is more expensive than W and less expensive than R. S is not the second lowest expensive car. Car which has is second most expensive costs 65lakh and the one which is third lowest expensive costs 55lakh.

**Q61.** Which car is the second most expensive?

- (a) P
- (b) Q
- (c) R
- (d) S
- (e) T

**Q62.** Which of the following is true?

- (a) Q is the second most expensive car
- (b) Only three cars are less expensive than P
- (c) W is the more expensive than P
- (d) None is true
- (e) All are true

**Q63.** What could be the possible price of R?

- (a) 66lakh
- (b) 54lakh
- (c) 67lakh
- (d) 57lakh
- (e) 53lakh



**Directions (64-65):** In each of the question, relationships between some elements are shown in the statements. These statements are followed by conclusions numbered I and II. Read the statements and give the answer.

- (a) If only conclusion I follows.
- (b) If only conclusion II follows.
- (c) If either conclusion I or II follows.
- (d) If neither conclusion I nor II follows.
- (e) If both conclusions I and II follow.

**Q64. Statements:**  $X \geq Y < Z$ ,  $X = T \leq U > W$

**Conclusions:** I.  $Z > W$       II.  $Y \leq T$

**Q65. Statements:**  $A > B \geq C = D < E$ ,  $F \leq G \geq C$

**Conclusions:** I.  $F \leq A$       II.  $F > A$

**Directions (66 - 70):** Given table shows the no. of patients who have visited to a hospital on three different days and no. of patients who were referred to higher hospital. Read the data carefully and answer the following questions.

Days	No. of Patients Visited	No. of patients referred
Monday	500	300
Tuesday	400	250
Wednesday	450	200

**Q66.** How many patients were not referred on all 3 days together?

- (a) 450
- (b) 600
- (c) 550
- (d) 650
- (e) 580

**Q67.** By what percent, no. of patients who were referred on Monday is more than those on Wednesday?

- (a) 55%
- (b) 60%
- (c) 40%
- (d) 50%
- (e) 45%

**BILINGUAL**

# Bank Prime Test Pack

IBPS | SBI | LIC | RBI | Others

**1200+ Total Tests**

**12 Months Validity**

**Q68.** What is the ratio of no. of patients who visited on Tuesday to the number of patients who were not referred on Wednesday?

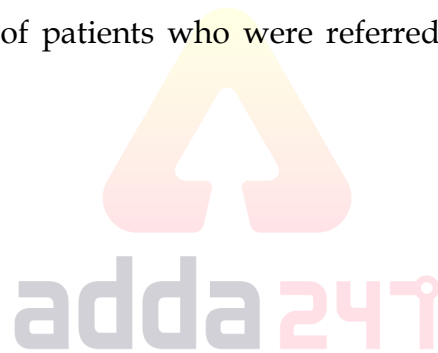
- (a) 8 : 5
- (b) 2 : 1
- (c) 1 : 2
- (d) 5 : 8
- (e) 3 : 1

**Q69.** If on Friday 20% more patients than on Monday visited to the hospital and 80% of total patients were not referred on Friday, then what is the difference between no. of patients who were referred on Tuesday and Friday?

- (a) 120
- (b) 110
- (c) 125
- (d) 115
- (e) 130

**Q70.** On which days, percentage of patients who were referred out of who visited on that day is maximum?

- (a) Wednesday
- (b) Monday
- (c) Tuesday
- (d) Monday & Tuesday
- (e) Monday & Wednesday



**Q71.** A person earns a profit of 17% after allowing a discount of 10%. Find the cost price if the marked price is Rs 520?

- (a) Rs 460
- (b) Rs 400
- (c) Rs 440
- (d) Rs 420
- (e) Rs 470

**Q72.** In how many ways can 8 persons be arranged in a linear row if all are facing north and 2 specific people never sit together?

- (a) 50400
- (b) 20360
- (c) 40480
- (d) 10080
- (e) 30240

**Q73.** A alone can do a work in 5 days while B & C together can do it in 4 days. In how many days all together can complete the work?

- (a)  $2\frac{2}{9}$  days
- (b)  $5\frac{2}{9}$  days
- (c)  $4\frac{2}{9}$  days
- (d)  $2\frac{4}{9}$  days
- (e)  $4\frac{4}{9}$  days

**Q74.** Veer can cover a certain distance in 5 hours while Ayush can cover same distance in 4 hours. Find ratio of distance covered by Veer to that of Ayush in 3 hours at their respective actual speed.

- (a) None of these
- (b) 5 : 4
- (c) 1 : 1
- (d) 4 : 5
- (e) Cannot be determined

**Q75.** Side of a square is equal to height of the cone having radius 6 cm and volume 792 cu.cm. find area of square?

- (a) 484 sq. cm.
- (b) 441 sq. cm.
- (c) 400 sq.cm.
- (d) 529 sq.cm.
- (e) 361 sq.cm.

**Q76.** Salary of A is 40% more than that of B while that of C is 15% less than that of B. By what percent salary of C is more/less than that of A?

- (a)  $64\frac{12}{17}$  %
- (b)  $36\frac{2}{7}$  %
- (c)  $39\frac{2}{7}$  %
- (d)  $67\frac{12}{17}$  %
- (e)  $43\frac{2}{7}$  %

**Q77.** A bag contains 10 bulbs of which 4 are defective. If 2 bulbs are drawn at random then what is the probability of getting at least a defective bulb?

- (a)  $\frac{2}{5}$
- (b)  $\frac{2}{15}$
- (c)  $\frac{8}{15}$
- (d)  $\frac{2}{3}$
- (e)  $\frac{2}{9}$

**Q78.** In what ratio, tea costing Rs 35 per kg should be mixed with tea costing Rs 28 per kg so that a profit of 20% is earned when the mixture is sold at Rs 36 per kg?

- (a) None of these
- (b) 3 : 4
- (c) 5 : 2
- (d) 3 : 5
- (e) 2 : 5

**Q79.** A train can cross a platform of length 450 m in 15 sec while a tree in 3.75 sec. In what time the train can cross a platform of length 150 m ?

- (a) 7.5 sec
- (b) 9 sec
- (c) 6 sec
- (d) 10 sec
- (e) 12 sec

**Q80.** The average temperature of first 3 days of a week is  $35^{\circ}\text{C}$  while that of last 3 days is  $38^{\circ}\text{C}$ . What is temperature of fourth day if average temperature of whole week  $36^{\circ}\text{C}$ ?

- (a)  $35^{\circ}\text{C}$
- (b)  $33^{\circ}\text{C}$
- (c)  $38^{\circ}\text{C}$
- (d)  $32^{\circ}\text{C}$
- (e)  $37^{\circ}\text{C}$

**Directions (81 - 85):** Each question consists of two equations I & II. You have to solve each equations and mark answer as per instructions.

- (a)  $x > y$
- (b)  $x \leq y$
- (c)  $x = y$  or no relation can be established
- (d)  $x < y$
- (e)  $x \geq y$

**Q81.** I.  $x^2 + 5x + 6 = 0$     II.  $y^2 + 7y + 12 = 0$

**Q82.** I.  $2x^2 + 5x - 3 = 0$     II.  $3y^2 - 2y - 1 = 0$

**Q83.** I.  $2x + 3y = 7$     II.  $4x - 3y = 5$

**Q84.** I.  $x^2 - 13x + 42 = 0$     II.  $y^2 - 17y + 72 = 0$

**Q85.** I.  $x^2 - 19x - 92 = 0$     II.  $2x + y = 72$

**Directions (86-95):** - What will come in place of (?) question mark in the following questions?

**Q86.** (?)% of 350 – (19)<sup>2</sup> + 28 × 45 = 1032

- (a) 48
- (b) 38
- (c) 26
- (d) 44
- (e) 56

**Q87.** (?)<sup>2</sup> – 31 × 7 =  $\sqrt{1521}$  + 12 × 35

- (a) 26
- (b) 38
- (c) 21
- (d) 24
- (e) 18

**Q88.** 46% of 1500 + 36% of 750 = ? + 28 × 15

- (a) 570
- (b) 500
- (c) 450
- (d) 540
- (e) 640

**Q89.** ? × 13 =  $26\frac{5}{6} \times 6\frac{18}{23}$

- (a) 20
- (b) 18
- (c) 21
- (d) 14
- (e) 15

**Q90.** (? + 26)% of 1200 + 375 ÷ 75 × 4 = 500

- (a) 18
- (b) 12
- (c) 14
- (d) 16
- (e) 10

**Q91.** 512 ÷ ? × 6 = 192

- (a) 11
- (b) 18
- (c) 12
- (d) 16
- (e) None of these



**BILINGUAL**

**REASONING  
MATHS + ENGLISH**

**BASICS**

**2000+ MCQs**

**Q92.**  $432 \div 48 \times 602 \div 86 = ?$

- (a) 63
- (b) 58
- (c) 53
- (d) 42
- (e) 54

**Q93.**  $37\frac{1}{2}\%$  of ? -  $\sqrt{784} = 89$

- (a) 320
- (b) 312
- (c) 325
- (d) 340
- (e) 310

**Q94.**  $1\frac{3}{5} \times \frac{5}{6} \times \frac{5}{8}$  of  $\frac{3}{2} \times ? = 150$

- (a) 120
- (b) 108
- (c) 100
- (d) 80
- (e) 132

**Q95.**  $(2.16 \times 31.25) \div ? = 27$

- (a) 2.25
- (b) 2.5
- (c) 2
- (d) 1.75
- (e) 1.5



**Directions (96-100):** What will come in place of (?) in the following number series?

**Q96.** 70, 90, ?, 154, 198, 250

- (a) 112
- (b) 130
- (c) 124
- (d) 118
- (e) 106

**Q97.** 88, ?, 130, 196, 316, 508

- (a) 94
- (b) 100
- (c) 104
- (d) 118
- (e) 98

Q98. ?, 90, 126, 207, 351, 576

- (a) 81
- (b) 75
- (c) 72
- (d) 78
- (e) 84

Q99. 100, 101, 98, 107, 80, ?

- (a) 150
- (b) 161
- (c) 145
- (d) 132
- (e) 144

Q100. 2, 2, 3, 8, 35, ?

- (a) 170
- (b) 185
- (c) 204
- (d) 156
- (e) 144



TEST SERIES

BILINGUAL



**BSCB 2021**

**Assistant (Multipurpose)**

**PRELIMS**

**25 TOTAL TESTS**



# BOOKS

<b>50+ BANK PO   CLERK</b> 2016-2021 PREVIOUS YEARS' Memory Based Papers Edition 3.0 500+ Questions 6500+ Detailed Solutions of English Grammar & Reasoning	<b>50+ बैंक पीओ/ क्लर्क</b> 2016-2021 पिछले वर्षों की याददाश्त आधारित परीक्षाओं के लिए Edition 3.0 300 प्रश्नों के साथ 6000+ विस्तृत समाधान	<b>20+ SBI CLERK PRELIMS MOCK PAPERS</b> Based on Latest Pattern 17 Prelims Mock Papers 2100 Questions with 100% Solutions	<b>A Complete Book of PUZZLE &amp; SEATING ARRANGEMENT</b> Useful for Banking & Insurance Examinations for IBPS, SBI, LIC, LIC & Others 3200+ Questions	<b>20+ IBPS CLERK PRELIMS MOCK PAPERS</b> Based on Latest Pattern 20 Mock Papers 2100 Questions with 100% Solutions	<b>"THE CRACKER" BANK MAINS EXAMS</b> Bank mains for IBPS   SBI   RRB PO-CLERK 2000+ Questions 3500+ Detailed Solutions	<b>COMPREHENSIVE GUIDE FOR INTELLIGENCE BUREAU ACIO GRADE-II</b> 3500+ Questions
<b>A COMPLETE BOOK OF DATA INTERPRETATION &amp; ANALYSIS</b> Useful for Banking & Insurance Examinations for IBPS, SBI, LIC, LIC & Others 2000+ Questions	<b>25+ IBPS RRB PO &amp; CLERK PRELIMS MOCK PAPERS</b> Based on Latest Pattern English Medium 2240 Questions with 100% Solutions	<b>Ace QUANT</b> A Complete Guide for Quantitative Aptitude 1000+ Questions with 100% Solutions	<b>ऐस क्वॉंट</b> एक पूर्ण गाइड क्वांटिटेटिव अप्टीट्यूड के लिए 1000+ प्रश्नों के साथ 100% समाधान	<b>Ace REASONING</b> A Complete Guide for Reasoning Aptitude 1000+ Questions with 100% Solutions	<b>ऐस रीजनिंग</b> एक पूर्ण गाइड रीजनिंग अप्टीट्यूड के लिए 1000+ प्रश्नों के साथ 100% समाधान	<b>Ace BANKING &amp; STATIC AWARENESS</b> 1000+ Questions with 100% Solutions
<b>Ace IT OFFICER</b> Professional Knowledge 1000+ Questions with 100% Solutions	<b>COMPUTER APTITUDE</b> For Banking & Insurance Examinations 1000+ Questions with 100% Solutions	<b>BANK EXAMS INTERVIEWS</b> A Guide to Crack 1000+ Questions with 100% Solutions	<b>100+ SSC CGL TIER-I / PRELIMS</b> Previous Years' Papers & Mock Tests Practice Book English Medium 1000+ Questions with 100% Solutions	<b>A Comprehensive Guide for RRC GROUP 'D'</b> 4000+ Questions with 100% Solutions	<b>A COMPLETE BOOK OF LOGICAL REASONING</b> Useful for IBPS   SBI   LIC   Insurance & Other Exams 550+ Questions	<b>"THE CRACKER" PRACTICE BOOK FOR GEOMETRY</b> Useful for SSC CGL   CPO   CHSL & Other Exams 800+ Questions 3500+ Detailed Solutions
<b>उत्तर प्रदेश पुलिस</b> उत्तर प्रदेश पुलिस की परीक्षा (SI & ASI) के लिए एक व्यापक गाइड 3500+ Questions with 100% Solutions	<b>A Comprehensive Guide for DELHI POLICE CONSTABLE</b> Useful for UP Police, Bihar Police, Forest Guard & Other Exams 3000+ Questions with 100% Solutions	<b>50+ SSC CGL TIER - I</b> MOCK PAPERS PRACTICE BOOK Useful for SSC CGL, CHSL, and CPO 500 Questions with 100% Solutions	<b>20+ SSC CGL TIER-I PREVIOUS YEAR</b> MOCK PAPERS PRACTICE BOOK Useful for SSC CGL, CHSL & CPO 200 Questions with 100% Solutions	<b>"THE CRACKER" PRACTICE BOOK FOR ALGEBRA &amp; NUMBER SYSTEM</b> 1300+ Questions	<b>"THE CRACKER" PRACTICE BOOK FOR MENSURATION</b> Useful for SSC CGL   CPO   CHSL & Other Exams 850+ Questions	<b>Ace SSC ARITHMETIC</b> Useful for SSC CGL, CHSL, and CPO 1000+ Questions with 100% Solutions
<b>ऐस एसएससी अंक गणित</b> एक पूर्ण गाइड अंकगणित के लिए 1000+ प्रश्नों के साथ 100% समाधान	<b>Ace SSC ENGLISH LANGUAGE &amp; COMPREHENSION BOOK</b> 1000+ Questions with 100% Solutions	<b>Ace SSC ADVANCED MATHS</b> 1000+ Questions with 100% Solutions	<b>ऐस एसएससी एवरेज मैथ</b> एक पूर्ण गाइड एवरेज मैथ के लिए 1000+ प्रश्नों के साथ 100% समाधान	<b>Ace SSC GENERAL AWARENESS</b> History   Geography   Polity   Economics   Sports   Current Affairs   Banking 1000+ Questions with 100% Solutions	<b>ऐस एसएससी सामान्य जागरूकता</b> इतिहास   भूगोल   राजनीति   अर्थशास्त्र   खेल   वर्तमान मामलों   बैंकिंग 1000+ प्रश्नों के साथ 100% समाधान	<b>Ace SSC GENERAL INTELLIGENCE &amp; REASONING</b> 1000+ Questions with 100% Solutions

Visit: [adda247.com](http://adda247.com)  
 For any information, mail us at [support.publication@adda247.com](mailto:support.publication@adda247.com)